

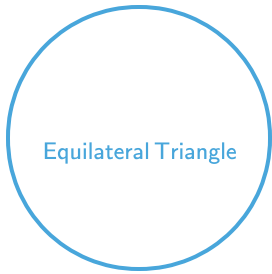




#1



Which shape has 3 equal angles?



Show your work

#2


Which shape has 2 acute angles and 2 obtuse angles?



Show your work

#3

Which shape has 5 angles?



Show your work

#4

Which shape has 4 right angles?

Square

Trapezoid

Pentagon

Show your work

#5

Which shape has 5 angles?

Rectangle

Pentagon

Trapezoid

Show your work

#6

Which shape has 3 equal sides?

Rhombus

Right Triangle

Equilateral Triangle

Show your work

#7

Which shape has 3 sides?

Square

Pentagon

Equilateral Triangle

Show your work

#8

Which shape has 3 corners?

Square

Pentagon

Equilateral Triangle

Show your work

#9

Which shape has 5 angles?

Trapezoid

Rectangle

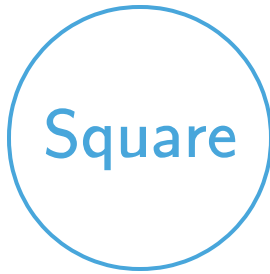
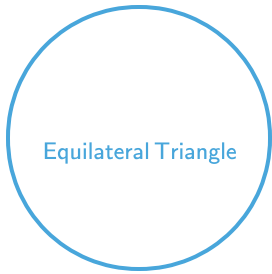
Pentagon

Show your work



#10


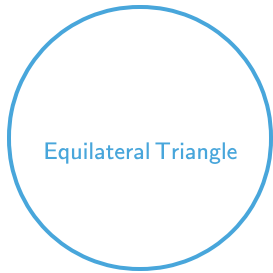
Which shape has 3 corners?



Show your work

#11



Which shape has 4 equal sides?



Show your work

#12

Which shape has 2 acute angles, 2 obtuse angles, and 4 equal sides?



Show your work

Question	Answer
#1	choice 1
#2	choice 3
#3	choice 1
#4	choice 1
#5	choice 2
#6	choice 3
#7	choice 3
#8	choice 3
#9	choice 3
#10	choice 1
#11	choice 3
#12	choice 2