
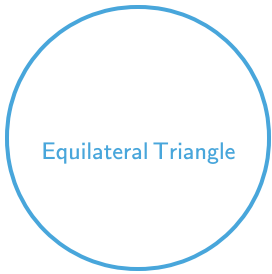





#1



Which shape has 3 equal angles?



Show your work

#2



Which shape has 2 acute angles and 2 obtuse angles?



Show your work

#3

Which shape has 2 acute angles and 2 obtuse angles?




Show your work



#4


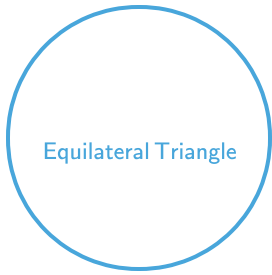
Which shape has 4 right angles?



Show your work

#5


Which shape has 3 sides?



Show your work

#6

Which shape has 4 right angles?



Show your work

#7

Which shape has 5 angles?

Rectangle Pentagon Trapezoid

Show your work

#8

Which shape has 3 equal angles?

Right Triangle Rhombus Equilateral Triangle

Show your work

#9

Which shape has 4 equal sides?



Equilateral Triangle Pentagon Rhombus

Show your work



#10


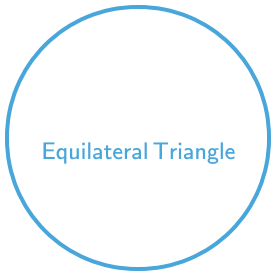
Which shape has 2 acute angles, 2 obtuse angles, and 4 equal sides?



Show your work

#11



Which shape has 3 sides?



Show your work

#12

Which shape has 2 acute angles, 2 obtuse angles, and 4 equal sides?



Show your work

Question	Answer
#1	choice 2
#2	choice 3
#3	choice 3
#4	choice 2
#5	choice 1
#6	choice 3
#7	choice 2
#8	choice 3
#9	choice 3
#10	choice 2
#11	choice 2
#12	choice 3