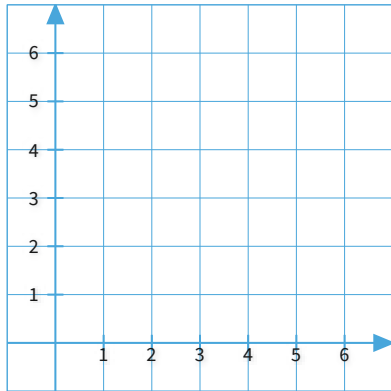


#1

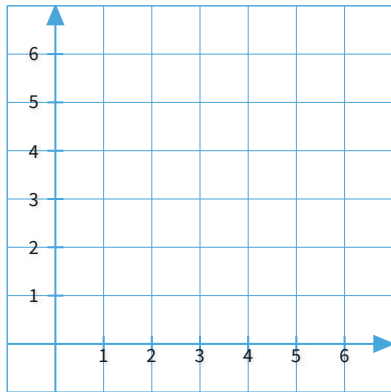
Graph the point $(2, 2)$ on the coordinate plane.



Show your work

#2

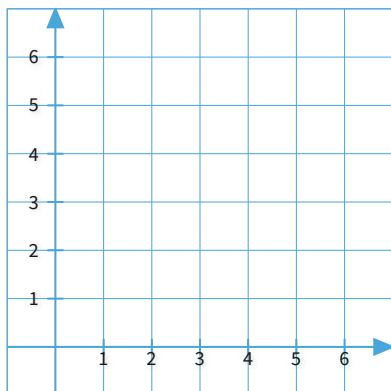
Graph the point $(2, 0)$ on the coordinate plane.



Show your work

#3

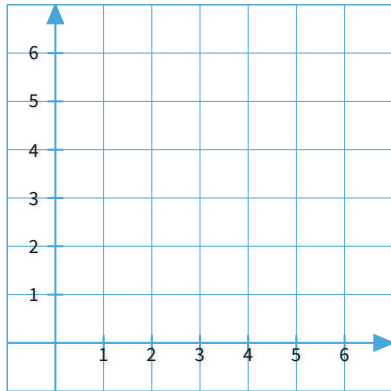
Graph the point $(4, 3)$ on the coordinate plane.



Show your work

#4

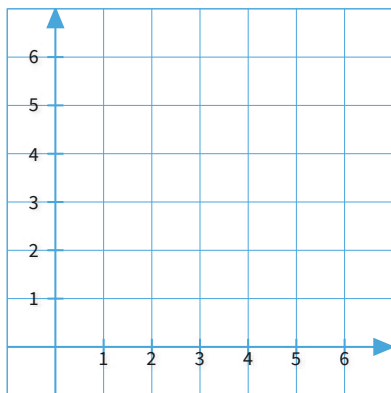
Graph the point $(1, 0)$ on the coordinate plane.



Show your work

#5

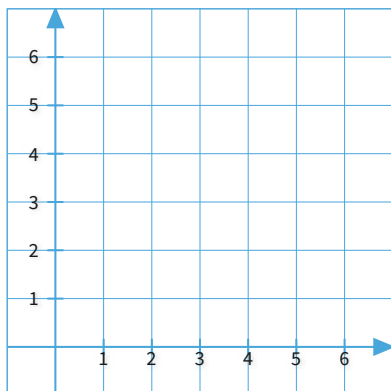
Graph the point $(2, 4)$ on the coordinate plane.



Show your work

#6

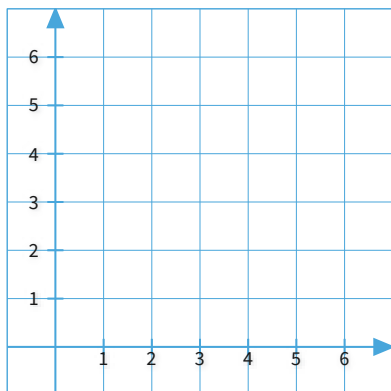
Graph the point $(0, 5)$ on the coordinate plane.



Show your work

#7

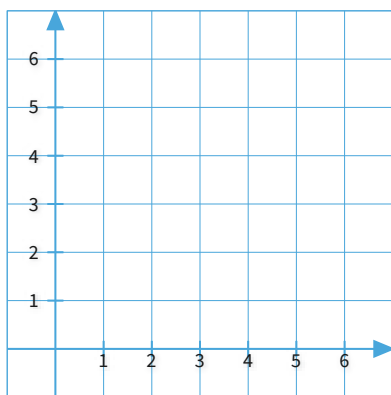
Graph the point $(0, 4)$ on the coordinate plane.



Show your work

#8

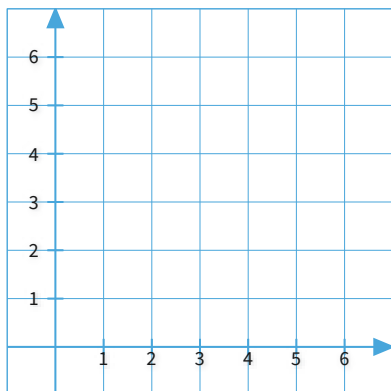
Graph the point $(0, 3)$ on the coordinate plane.



Show your work

#9

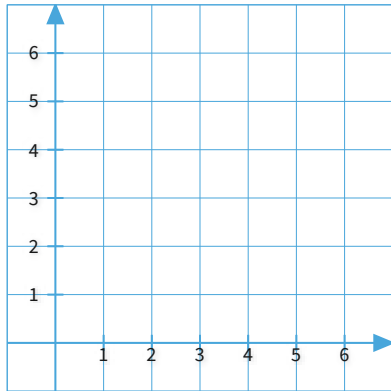
Graph the point $(4, 2)$ on the coordinate plane.



Show your work

#10

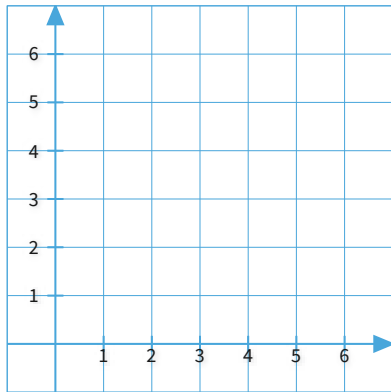
Graph the point (5, 3) on the coordinate plane.



Show your work

#11

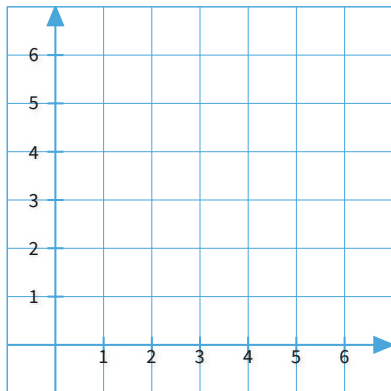
Graph the point (2, 5) on the coordinate plane.



Show your work

#12

Graph the point (4, 4) on the coordinate plane.



Show your work

Question	Answer
#1	[object Object]
#2	[object Object]
#3	[object Object]
#4	[object Object]
#5	[object Object]
#6	[object Object]
#7	[object Object]
#8	[object Object]
#9	[object Object]
#10	[object Object]
#11	[object Object]
#12	[object Object]