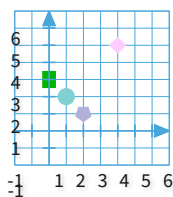


#1

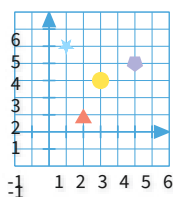
Which shape is at (0, 3)?



Show your work

#2

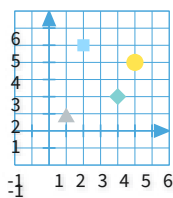
Which shape is at (2, 1)?



Show your work

#3

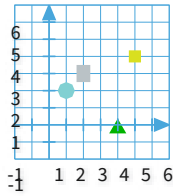
Which shape is at (4, 2)?



Show your work

#4

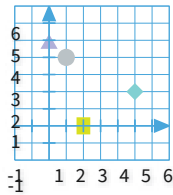
Which shape is at (5, 4)?



Show your work

#5

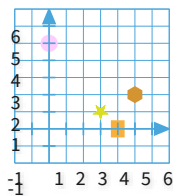
Which shape is at (5, 2)?



Show your work

#6

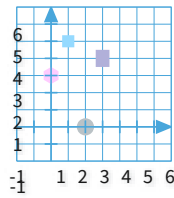
Which shape is at (0, 5)?



Show your work

#7

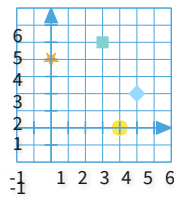
Which shape is at (1, 5)?



Show your work

#8

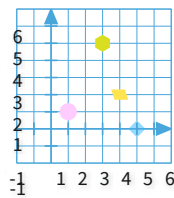
Which shape is at (4, 0)?



Show your work

#9

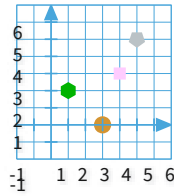
Which shape is at (3, 5)?



Show your work

#10

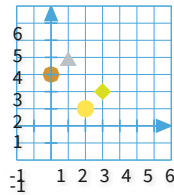
Which shape is at (1, 2)?



Show your work

#11

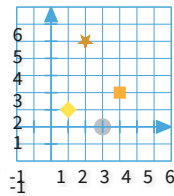
Which shape is at (1, 4)?



Show your work

#12

Which shape is at (2, 5)?



Show your work

Question	Answer
#1	choice 3
#2	choice 4
#3	choice 4
#4	choice 2
#5	choice 1
#6	choice 3
#7	choice 4
#8	choice 3
#9	choice 3
#10	choice 4
#11	choice 1
#12	choice 1