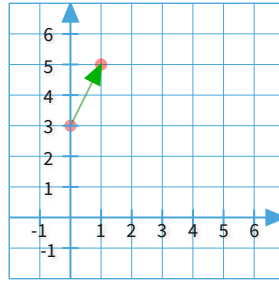
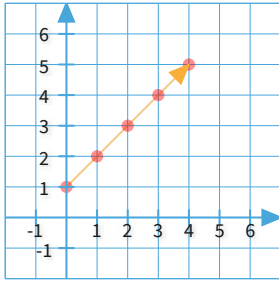




#1

Which graph shows this function?

$$y = x + 1$$

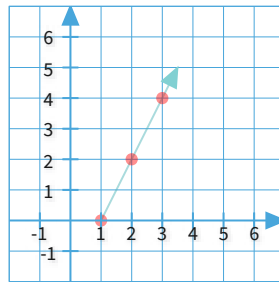
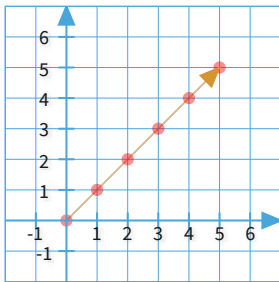


Show your work

#2

Which graph shows this function?

$$y = x$$

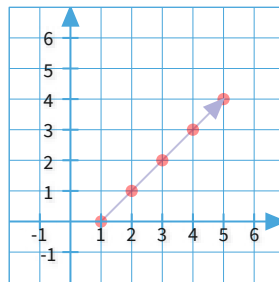
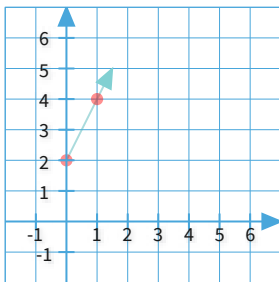


Show your work

#3

Which graph shows this function?

$$y = x - 1$$

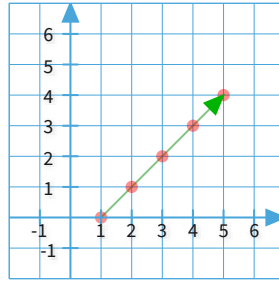
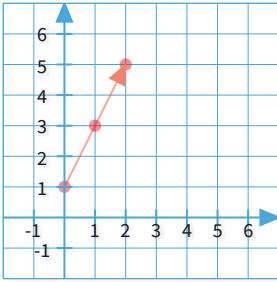


Show your work

#4

Which graph shows this function?

$$y = x - 1$$

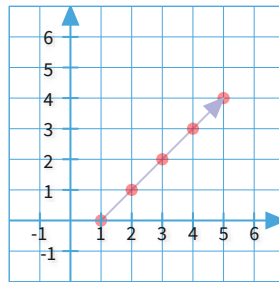
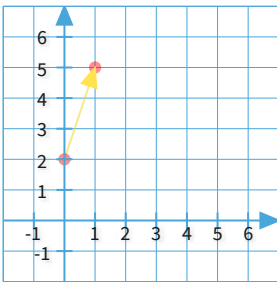


Show your work

#5

Which graph shows this function?

$$y = x - 1$$

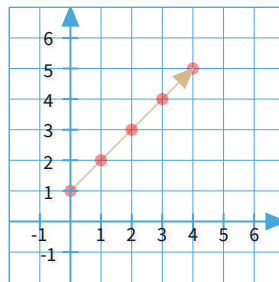
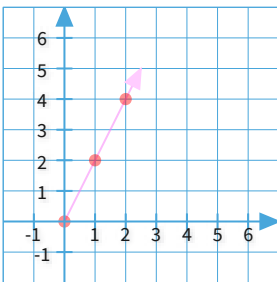


Show your work

#6

Which graph shows this function?

$$y = x + 1$$



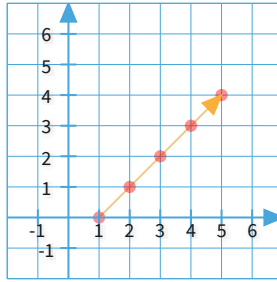
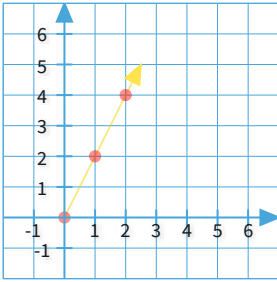
Show your work



#7

Which graph shows this function?

$$y = x - 1$$

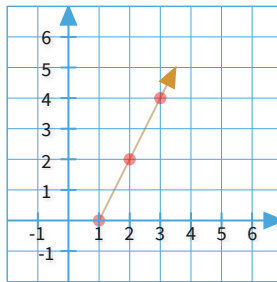
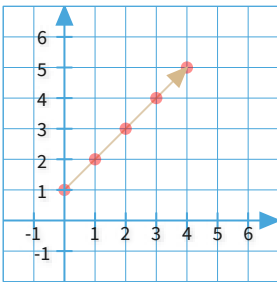


Show your work

#8

Which graph shows this function?

$$y = x + 1$$

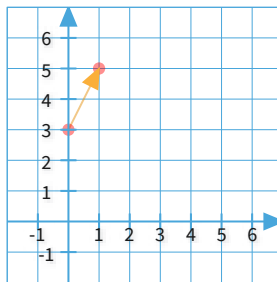
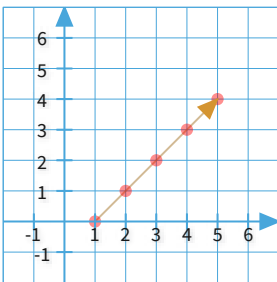


Show your work

#9

Which graph shows this function?

$$y = x - 1$$



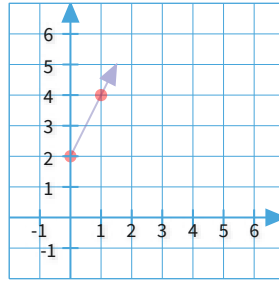
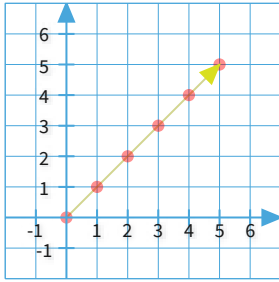
Show your work



#10

Which graph shows this function?

$y=x$

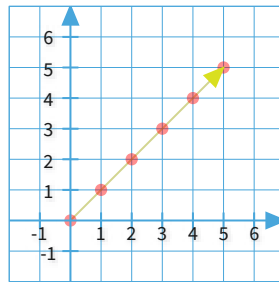
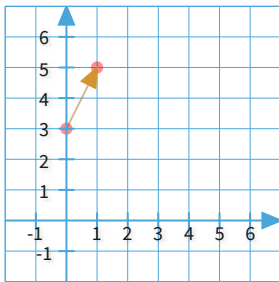


Show your work

#11

Which graph shows this function?

$y=x$

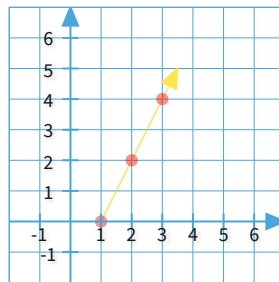
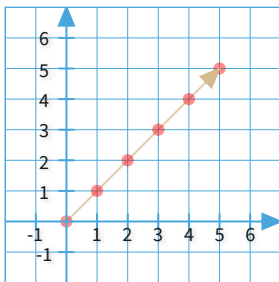


Show your work

#12

Which graph shows this function?

$y=x$



Show your work

Question	Answer
#1	choice 1
#2	choice 1
#3	choice 2
#4	choice 2
#5	choice 2
#6	choice 2
#7	choice 2
#8	choice 1
#9	choice 1
#10	choice 1
#11	choice 2
#12	choice 1