


#1


What decimal number is illustrated?

 0.7 0.6 0.8 1

Show your work

#2


What decimal number is illustrated?

 0.9 1.9 1.1 0.6

Show your work

#3


What decimal number is illustrated?

 0.1 3.2 0.2 0.3

Show your work

#4

What decimal number is illustrated?




- 2.9 1
- 0.8 0.9

Show your work

#5

What decimal number is illustrated?




- 0.3 1.2
- 0.1 0.2

Show your work

#6

What decimal number is illustrated?

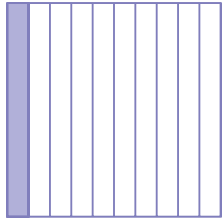


- 0.8 2.8
- 0.7 0.6

Show your work

#7

What decimal number is illustrated?




- 2.1 1.1
- 0.1 3.1

Show your work

#8

What decimal number is illustrated?




- 2.7 0.5
- 3.7 0.7

Show your work

#9

What decimal number is illustrated?

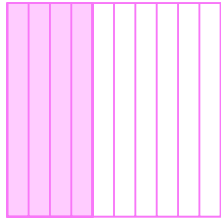


- 0.9 1.1
- 0.6 1

Show your work

#10

What decimal number is illustrated?




- 0.4 2.4
- 1.4 3.4

Show your work

#11

What decimal number is illustrated?




- 3.7 0.5
- 0.7 1.7

Show your work

#12

What decimal number is illustrated?



- 1.1 0.8
- 1 0.9

Show your work

Question	Answer
#1	0.8
#2	0.9
#3	0.2
#4	0.9
#5	0.2
#6	0.8
#7	0.1
#8	0.7
#9	0.9
#10	0.4
#11	0.7
#12	0.9