


#1

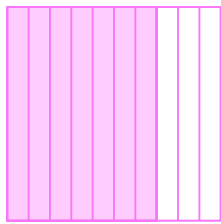
What decimal number is illustrated?

 0.8 1 1.1 0.9

Show your work

#2


What decimal number is illustrated?

 3.7 0.5 0.7 1.7

Show your work

#3


What decimal number is illustrated?

 0.6 3.6 2.6 1.6

Show your work

#4


What decimal number is illustrated?

 0.8 1.8 0.9 0.7

Show your work

#5


What decimal number is illustrated?

 1.1 0.8 1 0.9

Show your work

#6


What decimal number is illustrated?



Show your work

#7

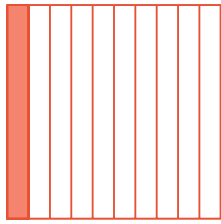
What decimal number is illustrated?

 1.1 0.8 1 0.9

Show your work

#8


What decimal number is illustrated?

 3.1 1.1 0.1 2.1

Show your work

#9


What decimal number is illustrated?

 0.3 0.2 0.1 2.2

Show your work

#10


What decimal number is illustrated?

 0.3 0.2 1.3 2.3

Show your work

#11


What decimal number is illustrated?

 0.7 0.9 3.9 0.8

Show your work

#12

What decimal number is illustrated?

 0.1 0.3 0.2 2.2

Show your work

Question	Answer
#1	0.9
#2	0.7
#3	0.6
#4	0.8
#5	0.9
#6	0.9
#7	0.9
#8	0.1
#9	0.2
#10	0.3
#11	0.9
#12	0.2