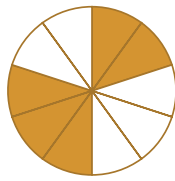


#1

What fraction of the shape is filled?



$\frac{5}{8}$

$\frac{5}{7}$

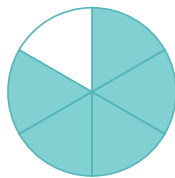
$\frac{5}{10}$

$\frac{5}{9}$

Show your work

#2

What fraction of the shape is filled?



$\frac{5}{6}$

$\frac{5}{7}$

$\frac{5}{8}$

$\frac{5}{10}$

Show your work

#3

What fraction of rectangles are yellow?
Simplify your answer.



$\frac{7}{9}$

$\frac{1}{4}$

$\frac{2}{3}$

$\frac{4}{7}$

Show your work

#4

What fraction of octagons are blue? Simplify your answer.



$\frac{1}{8}$

$\frac{2}{3}$

$\frac{5}{9}$

$\frac{1}{6}$

Show your work

#5

What fraction of squares are orange? Simplify your answer.



$\frac{3}{4}$

$\frac{3}{5}$

$\frac{2}{9}$

$\frac{1}{8}$

Show your work

#6

What fraction of triangles are brown? Simplify your answer.



$\frac{5}{8}$

$\frac{7}{10}$

$\frac{1}{8}$

$\frac{3}{10}$

Show your work

#7

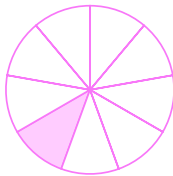
What fraction of triangles are grey? Simplify your answer.



Show your work

#8

What fraction of the shape is filled?



$\frac{1}{7}$

$\frac{1}{8}$


$\frac{1}{10}$

$\frac{1}{9}$

Show your work

#9

What fraction of the shape is filled?



$\frac{1}{3}$

$\frac{1}{5}$


$\frac{1}{4}$

$\frac{1}{2}$

Show your work

#10

What fraction of the shape is filled?



$\frac{1}{5}$

$\frac{1}{3}$


$\frac{1}{4}$

$\frac{1}{2}$

Show your work

#11

What fraction of the shape is filled?



$\frac{1}{5}$

$\frac{1}{3}$

$\frac{1}{4}$

$\frac{1}{2}$

Show your work

#12

What fraction of rectangles are red? Simplify your answer.



Show your work

Question	Answer
#1	choice 3
#2	choice 1
#3	1/4
#4	1/8
#5	1/8
#6	1/8
#7	1/8
#8	choice 4
#9	choice 1
#10	choice 2
#11	choice 2
#12	1/4