


#1 Zoe takes people on bird watching tours. She records the number of birds that each person sees. How many birds did the least number of people see?

Birds Spotted



- 7
- 5
- 8
- 3

Show your work

#2 Michael is a teacher and records the number of days that each of his students are absent. How many students are in the class?

Days Absent

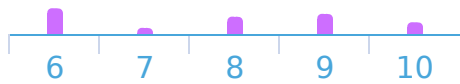


student(s)

Show your work

#3 Ryan serves sushi at a party and records how many pieces each person eats. How many people ate sushi?

Sushi Eaten



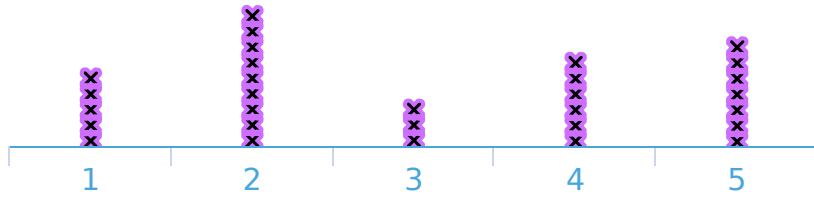
person(s)

Show your work

#4

Gavin serves sushi at a party and records how many pieces each person eats. How many people ate sushi?

Sushi Eaten



- 24
- 21
- 29
- 30

Show your work

#5

Nick is recording how many solar panels are on each house in his neighbourhood. How many houses are in his neighbourhood?

Solar Panels per House



house(s)

Show your work

#6

Owen is studying bees. He records how many flowers each bee visits before returning to the hive. How many flowers did the least number of bees visit?

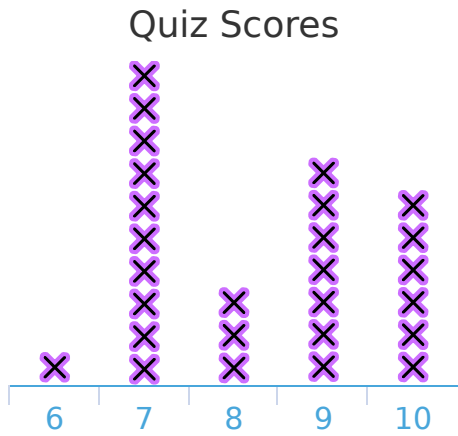
Flowers Visited



Flowers:

Show your work

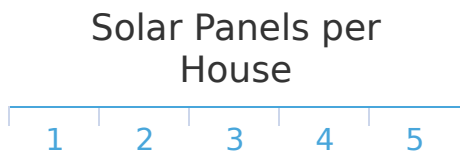
#7 A teacher recorded the scores on a quiz. Which score did the greatest number of people receive?



Score:

Show your work


#8 Alexander is recording how many solar panels are on each house in his neighbourhood. How many houses are in his neighbourhood?



house(s)

Show your work

#9 Austin serves sushi at a party and records how many pieces each person eats. How many people ate sushi?



- 15
- 17
- 18
- 12

Show your work

#10

Evan is recording how many solar panels are on each house in his neighbourhood. How many houses are in his neighbourhood?

Solar Panels per House



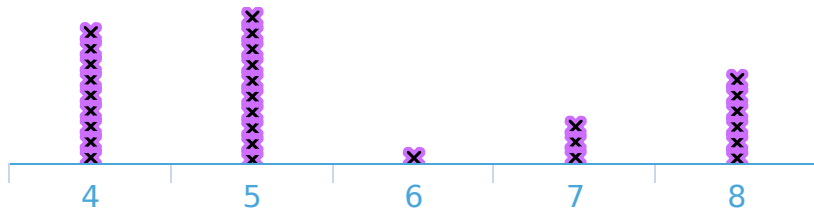
house(s)

Show your work

#11

Coach Noah records the long jump distances for each student. How many students did the long jump?

Long Jump Distances (ft)



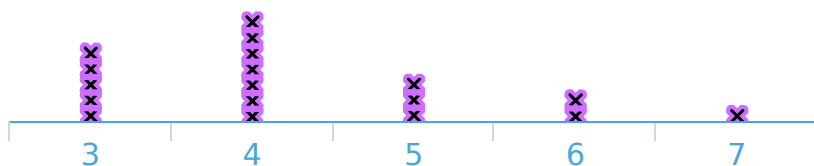
- 23
- 29
- 35
- 36

Show your work

#12

Emma takes people on bird watching tours. She records the number of birds that each person sees. How many people went on the bird watching tour?

Birds Spotted



- 20
- 19
- 18
- 12

Show your work

Question	Answer
#1	5
#2	32
#3	28
#4	30
#5	23
#6	6
#7	7
#8	19
#9	15
#10	14
#11	29
#12	18