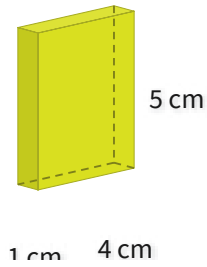


#1

What is the volume?

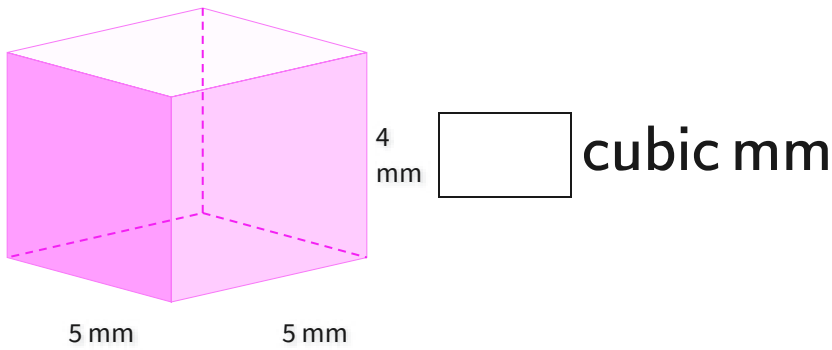


- 15 cubic cm
- 25 cubic cm
- 20 cubic cm
- 16 cubic cm

Show your work

#2

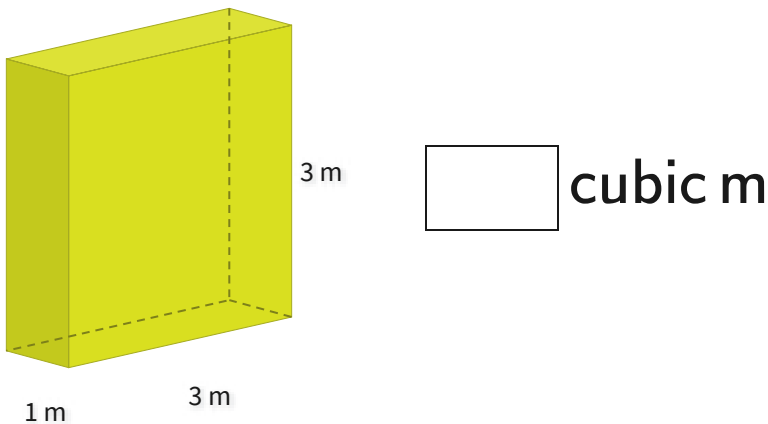
What is the volume?



Show your work

#3

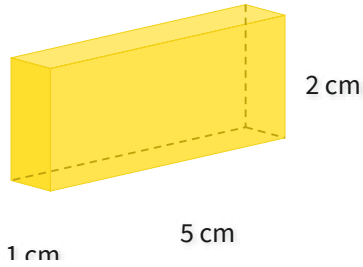
What is the volume?



Show your work

#4

What is the volume?

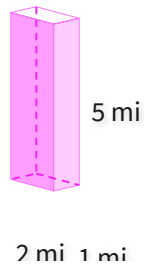


- 10 cubic cm
- 13 cubic cm
- 12 cubic cm
- 11 cubic cm

Show your work

#5

What is the volume?

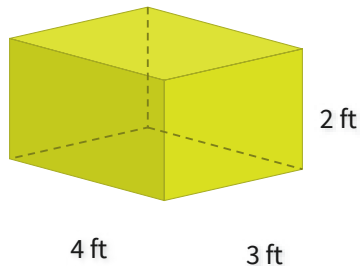


- 7 cubic mi
- 13 cubic mi
- 10 cubic mi
- 8 cubic mi

Show your work

#6

What is the volume?

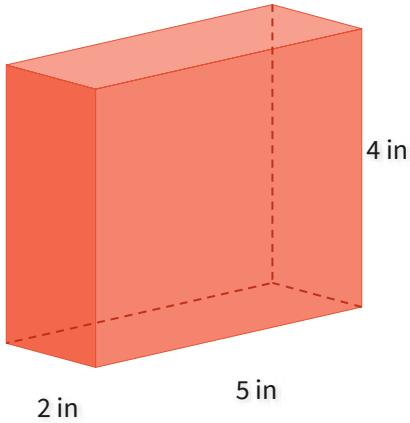


- 27 cubic ft
- 17 cubic ft
- 24 cubic ft
- 31 cubic ft

Show your work

#7

What is the volume?

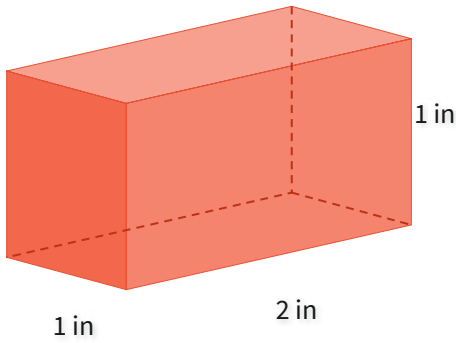


cubic in

Show your work

#8

What is the volume?

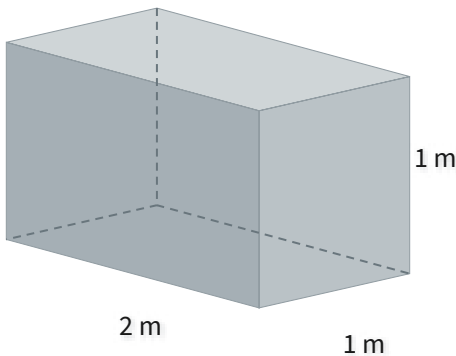


cubic in

Show your work

#9

What is the volume?

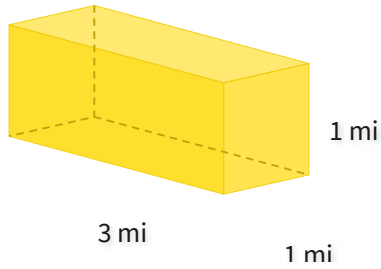


cubic m

Show your work

#10

What is the volume?

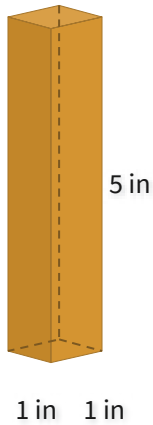


- 6 cubic mi
- 1 cubic mi
- 2 cubic mi
- 3 cubic mi

Show your work

#11

What is the volume?

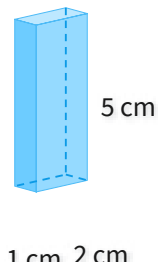


cubic in

Show your work

#12

What is the volume?



- 11 cubic cm
- 9 cubic cm
- 10 cubic cm
- 13 cubic cm

Show your work

Question	Answer
#1	choice 3
#2	100
#3	9
#4	choice 1
#5	choice 3
#6	choice 3
#7	40
#8	2
#9	2
#10	choice 4
#11	5
#12	choice 2