

#1

What kind of shape is this?



- cylinder     
  square     
  cone

Show your work

#2

What kind of shape is this?




- triangle     
  rectangular prism     
  parallelogram

Show your work

#3

What kind of shape is this?




- parallelogram     
  hexagon     
  circle

Show your work

#4

What kind of shape is this?




- circle     
  pentagon     
  hexagon

Show your work

#5

What kind of shape is this?




- triangular pyramid     
  triangle     
  pentagon

Show your work

#6

What kind of shape is this?




- cone     
  triangular prism     
  cylinder

Show your work

#7

What kind of shape is this?




- triangular prism     
  hexagon     
  triangular pyramid

Show your work

#8

What kind of shape is this?




- circle     
  triangular pyramid     
  triangle

Show your work

#9

What kind of shape is this?



- triangular pyramid     
  parallelogram     
  pentagon

Show your work

#10

What kind of shape is this?



- rectangle     
  square     
  rectangular prism

Show your work

#11

What kind of shape is this?




- triangle     
  pentagon     
  parallelogram

Show your work

#12

What kind of shape is this?



- rectangular prism     
  cone     
  circle

Show your work

Question	Answer
#1	choice 2
#2	choice 3
#3	choice 2
#4	choice 1
#5	choice 3
#6	choice 1
#7	choice 2
#8	choice 3
#9	choice 3
#10	choice 2
#11	choice 3
#12	choice 3