


#1

What kind of shape is this?



- hexagon     
  rectangle     
  triangle

Show your work

#2

What kind of shape is this?




- rectangle     
  cone     
  rectangular pyramid

Show your work

#3

What kind of shape is this?



- cube     
  triangular pyramid     
  rectangular pyramid

Show your work

#4

What kind of shape is this?




- triangular pyramid   
  parallelogram   
  rectangle

Show your work

#5

What kind of shape is this?



- rectangular prism   
  triangular prism   
  cube

Show your work

#6

What kind of shape is this?



- cone   
  rectangle   
  hexagon

Show your work

#7

What kind of shape is this?




- rectangle     
  square     
  pentagon

Show your work

#8

What kind of shape is this?



- hexagon     
  circle     
  parallelogram

Show your work

#9

What kind of shape is this?



- rectangular pyramid     
  cube     
  cone

Show your work

#10

What kind of shape is this?




- triangular pyramid     
  pentagon     
  hexagon

Show your work

#11

What kind of shape is this?



- cube     
  rectangular pyramid     
  rectangle

Show your work

#12

What kind of shape is this?



- square     
  triangle     
  pentagon

Show your work

Question	Answer
#1	choice 3
#2	choice 3
#3	choice 2
#4	choice 3
#5	choice 3
#6	choice 2
#7	choice 1
#8	choice 1
#9	choice 1
#10	choice 1
#11	choice 3
#12	choice 1