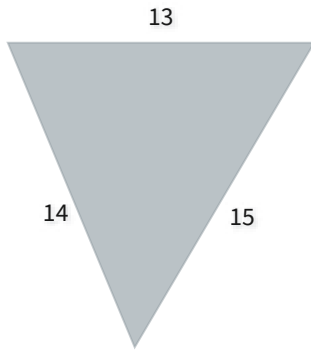


#1

What kind of triangle is this?

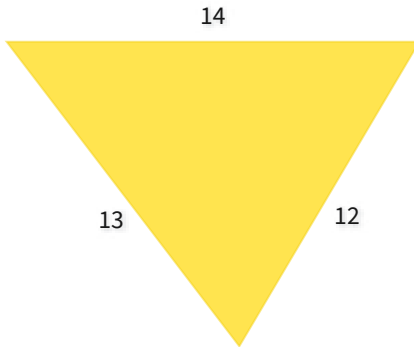


- Scalene     
  Isosceles but not equilateral     
  Equilateral

Show your work

#2

What kind of triangle is this?

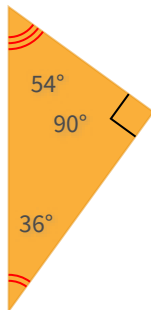


- Isosceles but not equilateral     
  Equilateral     
  Scalene

Show your work

#3

What kind of triangle is this?

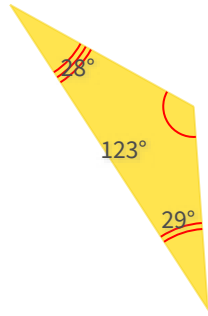


- Obtuse     
  Right     
  Acute

Show your work

#4

What kind of triangle is this?

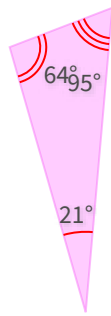


- Right     
  Obtuse     
  Acute

Show your work

#5

What kind of triangle is this?

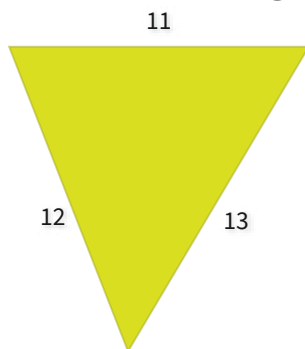


- Right     
  Acute     
  Obtuse

Show your work

#6

What kind of triangle is this?

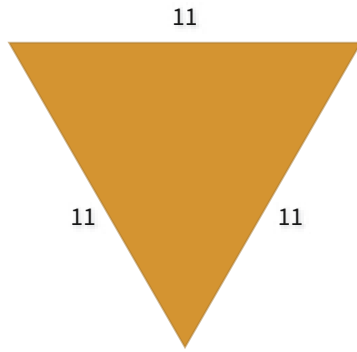


- Isosceles but not equilateral     
  Scalene     
  Equilateral

Show your work

#7

What kind of triangle is this?

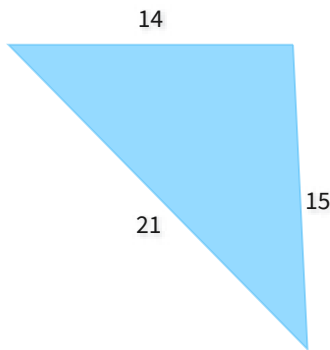


- Scalene     
  Isosceles but not equilateral     
  Equilateral

Show your work

#8

What kind of triangle is this?

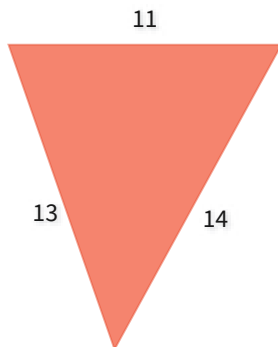


- Isosceles but not equilateral     
  Equilateral     
  Scalene

Show your work

#9

What kind of triangle is this?

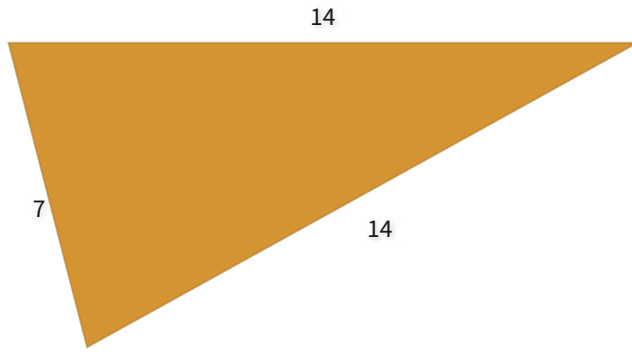


- Isosceles but not equilateral     
  Equilateral     
  Scalene

Show your work

#10

What kind of triangle is this?

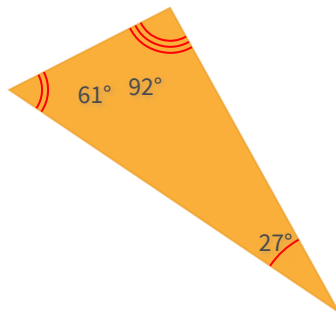


- Isosceles but not equilateral
  Scalene
  Equilateral

Show your work

#11

What kind of triangle is this?

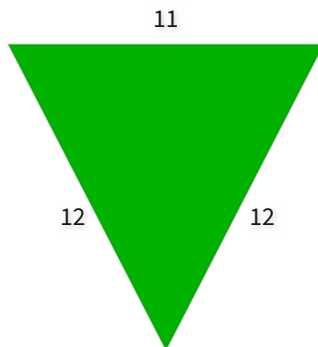


- Obtuse
  Right
  Acute

Show your work

#12

What kind of triangle is this?



- Equilateral
  Scalene
  Isosceles but not equilateral

Show your work

Question	Answer
#1	choice 1
#2	choice 3
#3	choice 2
#4	choice 2
#5	choice 3
#6	choice 2
#7	choice 3
#8	choice 3
#9	choice 3
#10	choice 1
#11	choice 1
#12	choice 3