

#1

Which two numbers have a quotient of 7?



Show your work

#2

Which two numbers have a quotient of 9?



Show your work

#3

Which two numbers have a quotient of 6?



Show your work

#4

Which two numbers have a quotient of 4?



Show your work

#5

Which two numbers have a quotient of 10?



Show your work

#6

Which two numbers have a quotient of 7?



Show your work

#7


Which two numbers have a quotient of 9?



Show your work

#8

Which two numbers have a quotient of 10?



Show your work

#9

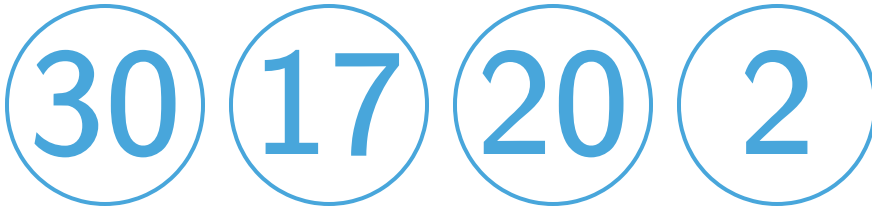
Which two numbers have a quotient of 7?



Show your work

#10


Which two numbers have a quotient of 10?



Show your work

#11


Which two numbers have a quotient of 10?



Show your work

#12

Which two numbers have a quotient of 9?



Show your work

Question	Answer
#1	choice 3, choice 2
#2	choice 4, choice 1
#3	choice 2, choice 3
#4	choice 1, choice 4
#5	choice 3, choice 2
#6	choice 1, choice 3
#7	choice 2, choice 4
#8	choice 1, choice 2
#9	choice 3, choice 2
#10	choice 3, choice 4
#11	choice 3, choice 4
#12	choice 4, choice 1