


#1

Look at the following pictograph. How many goals did Mason score?



- 2
- 3
- 0
- 1

Show your work

#2

Look at the following pictograph. It shows the number of planes Cameron went on each month. How many times did Cameron fly in January?




- 6
- 8
- 10
- 7

Show your work

#3

Look at the following pictograph. It shows the number of rainy days per month in Seattle. How many days did it rain in January?




- 7
- 11
- 8
- 10

Show your work

#4

Look at the following pictograph. It shows the number of penalty yards each football team has received. How many penalty yards did the Blue Bombers get?




- 2
- 3
- 5
- 4

Show your work

#5

Look at the following pictograph. It shows the number of penalty yards each football team has received. How many penalty yards did the Predators get?




penalty yard(s)

Show your work

#6

Abigail is in her space ship and just arrived at the solar system Kepler-186. She made a graph of the number of moons around each of the planets. How many moons orbit Kepler-186 e?




moon(s)

Show your work

#7

Look at the following pictograph. How many goals did Kayla score?




- 3
- 5
- 8
- 6

Show your work

#8

Emily is in her space ship and just arrived at the solar system Kepler-186. She made a graph of the number of moons around each of the planets. How many moons orbit Kepler-186 e?




- 5
- 9
- 8
- 10

Show your work

#9

Look at the following pictograph. It shows the number of rainy days per month in Seattle. How many days did it rain in April?




day(s)

Show your work

#10

Ants are crawling on Jacob. Look at the following pictograph. How many ants are on his Legs?




- 5
- 3
- 6
- 4

Show your work

#11

Look at the following pictograph. It shows the number of chairs each student sat on during a game of musical chairs. How many chairs did Kaylee sit on?




- 1
- 2
- 0
- 3

Show your work

#12

Look at the following pictograph. It shows the number of penalty yards each football team has received. How many penalty yards did the Predators get?



penalty yard(s)

Show your work

Question	Answer
#1	1
#2	8
#3	10
#4	2
#5	3
#6	2
#7	6
#8	8
#9	10
#10	4
#11	1
#12	7