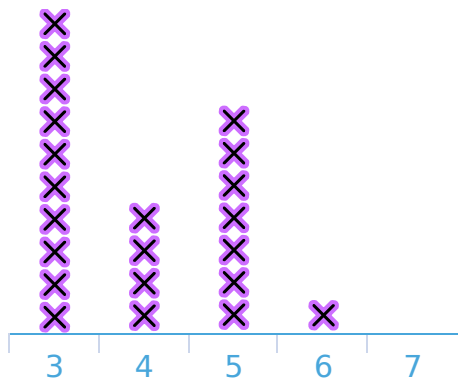


#1

Sophia serves sushi at a party and records how many pieces each person eats. How many pieces did the least number of people eat?

Sushi Eaten



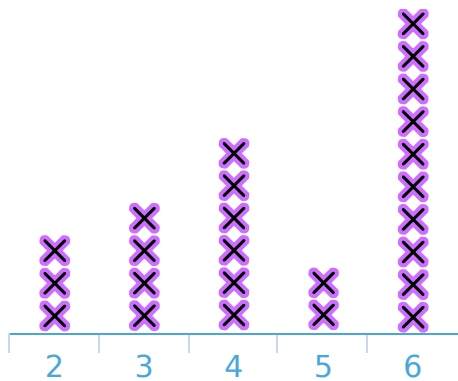
Pieces:

Show your work

#2

Aiden is studying bees. He records how many flowers each bee visits before returning to the hive. How many bees did Aiden record?

Flowers Visited



bee(s)

Show your work

#3

Aiden is recording how many solar panels are on each house in his neighbourhood. How many solar panels were on the least number of houses?

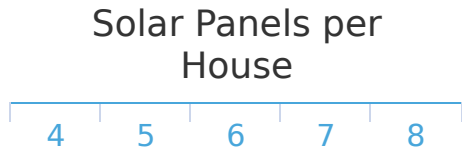
Solar Panels per House



Solar Panels:

Show your work

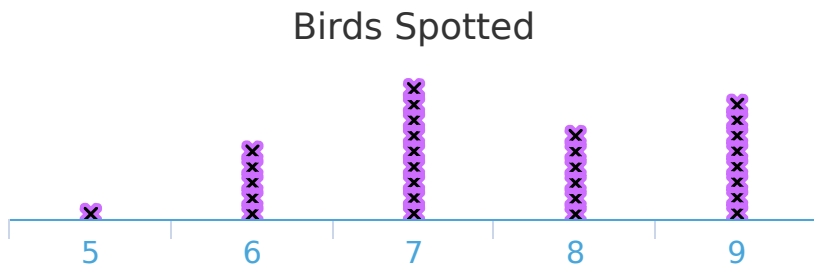
#4 Anna is recording how many solar panels are on each house in her neighbourhood. How many solar panels were on the least number of houses?



Solar Panels:

Show your work

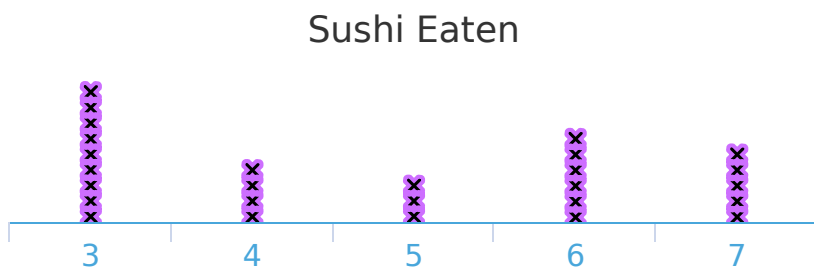
#5 Savannah takes people on bird watching tours. She records the number of birds that each person sees. How many birds did the least number of people see?



- | | |
|-------------------------|-------------------------|
| <input type="radio"/> 5 | <input type="radio"/> 4 |
| <input type="radio"/> 8 | <input type="radio"/> 6 |

Show your work

#6 Emma serves sushi at a party and records how many pieces each person eats. How many pieces did the least number of people eat?

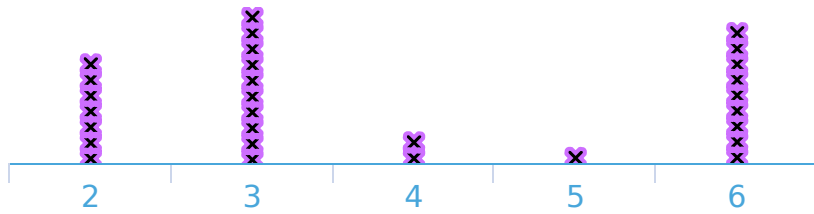


- | | |
|-------------------------|-------------------------|
| <input type="radio"/> 6 | <input type="radio"/> 5 |
| <input type="radio"/> 4 | <input type="radio"/> 7 |

Show your work

#7 Madison takes people on bird watching tours. She records the number of birds that each person sees. How many people went on the bird watching tour?

Birds Spotted



- 33
- 31
- 25
- 29

Show your work

#8 Ella is recording how many solar panels are on each house in her neighbourhood. How many houses are in her neighbourhood?

Solar Panels per House



house(s)

Show your work

#9 Coach Matilda records the number of chin-ups done by each student. How many students did chin-ups?

Chin-Ups per Student

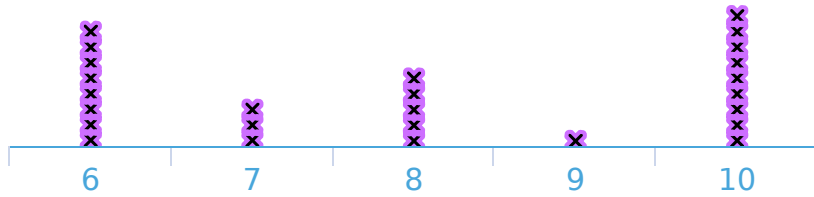


student(s)

Show your work

#10 A teacher recorded the scores on a quiz. How many students took the quiz?

Quiz Scores



- 20
- 26
- 33
- 32

Show your work

#11 Anna owns a store and records the number of items each customer purchased. How many items did the lowest number of customers purchase?

Customer Purchases



Purchases:

Show your work

#12 Ashley owns a store and records the number of items each customer purchased. How many customers made a purchase?

Customer Purchases



customer(s)

Show your work

Question	Answer
#1	7
#2	25
#3	7
#4	5
#5	5
#6	5
#7	29
#8	29
#9	27
#10	26
#11	6
#12	26