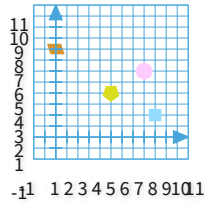


#1

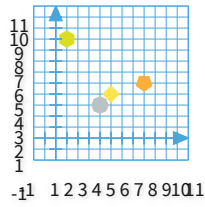
Which shape is at (5, 4)?



Show your work

#2

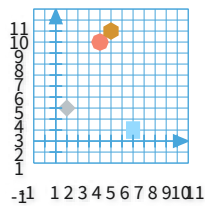
Which shape is at (5, 4)?



Show your work

#3

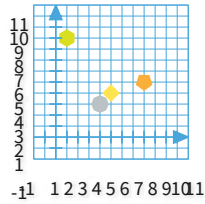
Which shape is at (4, 9)?



Show your work

#4

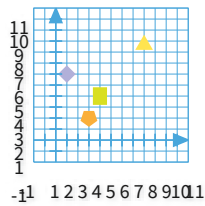
Which shape is at (5, 4)?



Show your work

#5

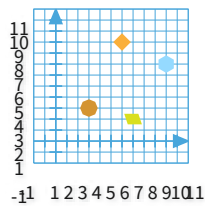
Which shape is at (3, 2)?



Show your work

#6

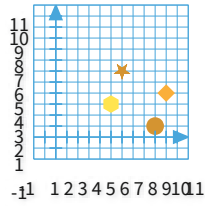
Which shape is at (6, 9)?



Show your work

#7

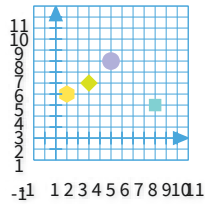
Which shape is at (10, 4)?



Show your work

#8

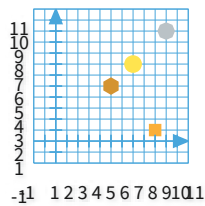
Which shape is at (5, 7)?



Show your work

#9

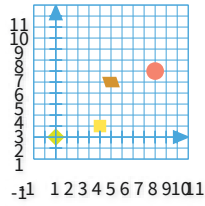
Which shape is at (10, 10)?



Show your work

#10

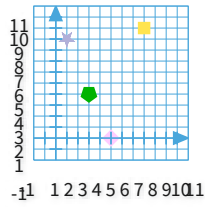
Which shape is at (4, 1)?



Show your work

#11

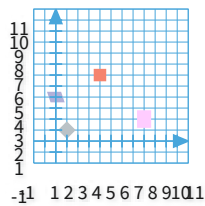
Which shape is at (5, 0)?



Show your work

#12

Which shape is at (4, 6)?



Show your work

Question	Answer
#1	choice 3
#2	choice 2
#3	choice 4
#4	choice 2
#5	choice 3
#6	choice 4
#7	choice 4
#8	choice 4
#9	choice 4
#10	choice 2
#11	choice 3
#12	choice 3