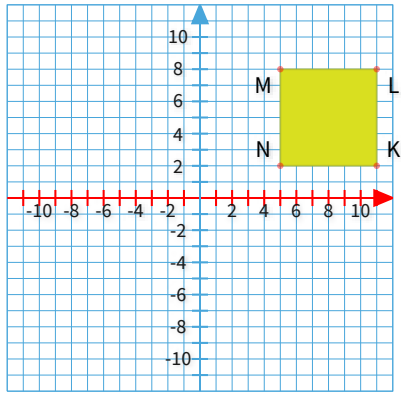




#1

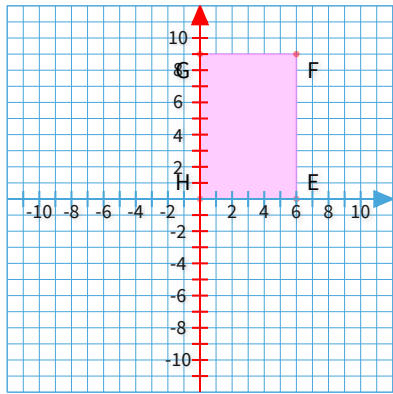
Graph the image of rectangle KLMN after a reflection over the x-axis.



Show your work

#2

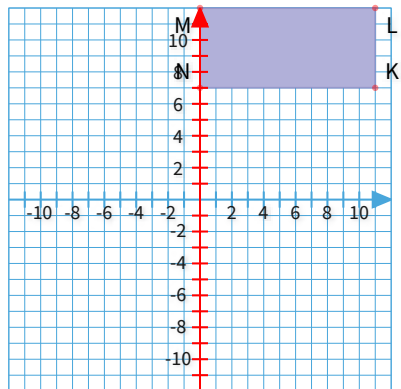
Graph the image of rectangle EFGH after a reflection over the y-axis.



Show your work

#3

Graph the image of rectangle KLMN after a reflection over the y-axis.

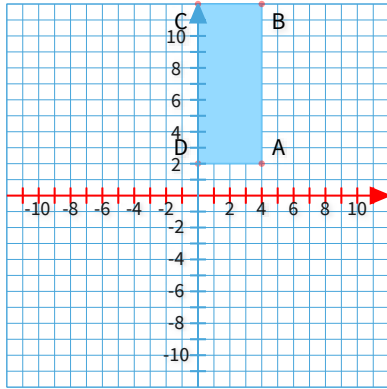


Show your work



#4

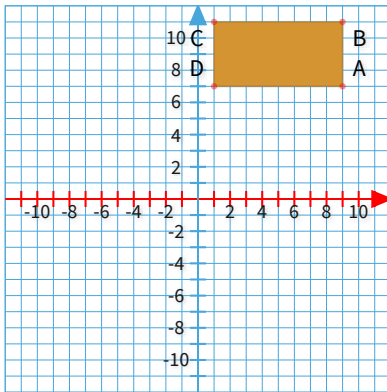
Graph the image of rectangle ABCD after a reflection over the x-axis.



Show your work

#5

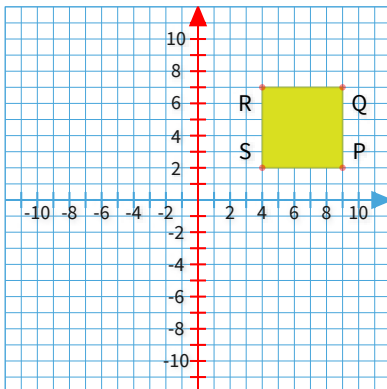
Graph the image of rectangle ABCD after a reflection over the x-axis.



Show your work

#6

Graph the image of rectangle PQRS after a reflection over the y-axis.

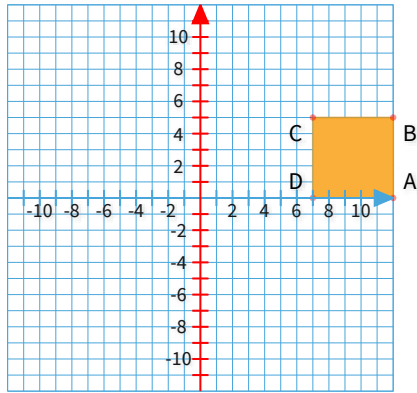


Show your work



#7

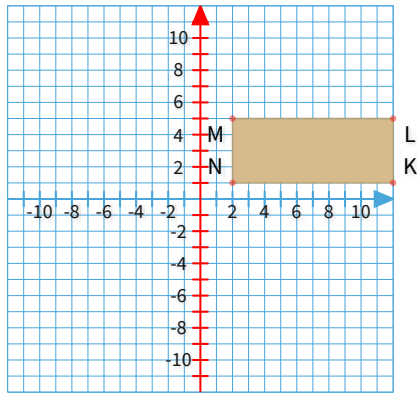
Graph the image of rectangle ABCD after a reflection over the y-axis.



Show your work

#8

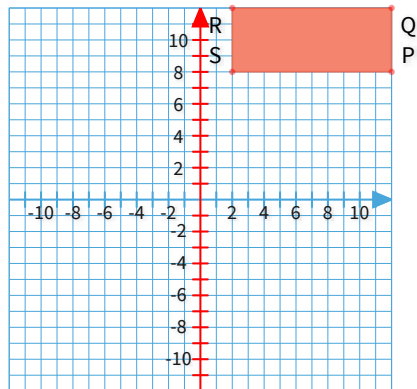
Graph the image of rectangle KLMN after a reflection over the y-axis.



Show your work

#9

Graph the image of rectangle PQRS after a reflection over the y-axis.

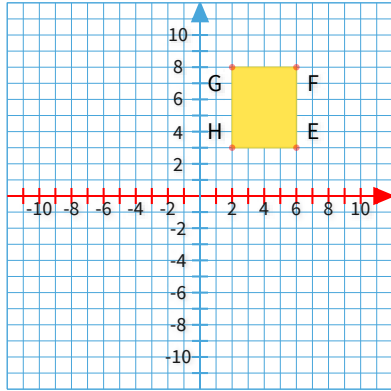


Show your work



#10

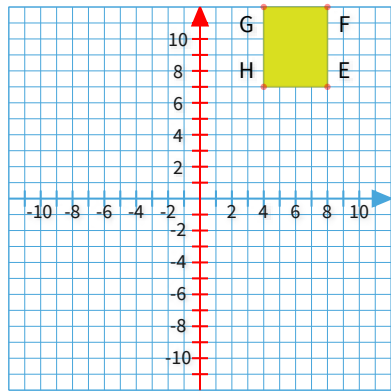
Graph the image of rectangle EFGH after a reflection over the x-axis.



Show your work

#11

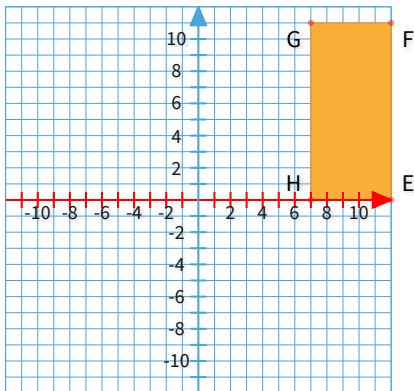
Graph the image of rectangle EFGH after a reflection over the y-axis.



Show your work

#12

Graph the image of rectangle EFGH after a reflection over the x-axis.



Show your work

Question	Answer
#1	5,-2,11,-2,11,-8,5,-8
#2	0,0,-6,0,-6,9,0,9
#3	0,7,-11,7,-11,12,0,12
#4	0,-2,4,-2,4,-12,0,-12
#5	1,-7,9,-7,9,-11,1,-11
#6	-4,2,-9,2,-9,7,-4,7
#7	-7,0,-12,0,-12,5,-7,5
#8	-2,1,-12,1,-12,5,-2,5
#9	-2,8,-12,8,-12,12,-2,12
#10	2,-3,6,-3,6,-8,2,-8
#11	-4,7,-8,7,-8,12,-4,12
#12	7,0,12,0,12,-11,7,-11