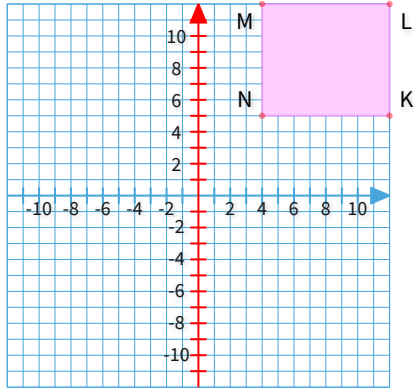




#1

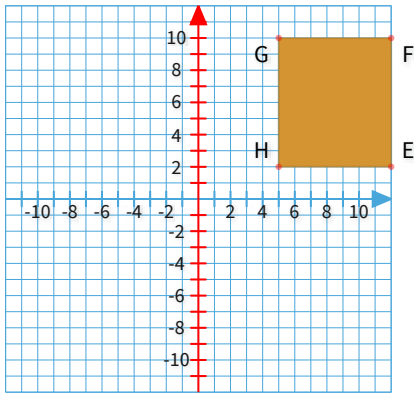
Graph the image of rectangle KLMN after a reflection over the y-axis.



Show your work

#2

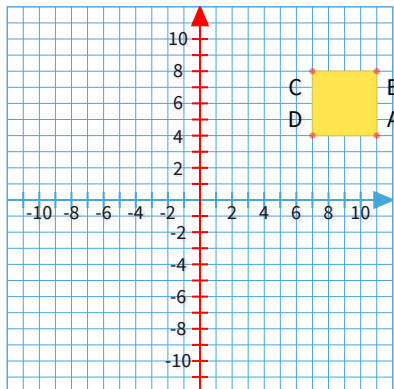
Graph the image of rectangle EFGH after a reflection over the y-axis.



Show your work

#3

Graph the image of rectangle ABCD after a reflection over the y-axis.

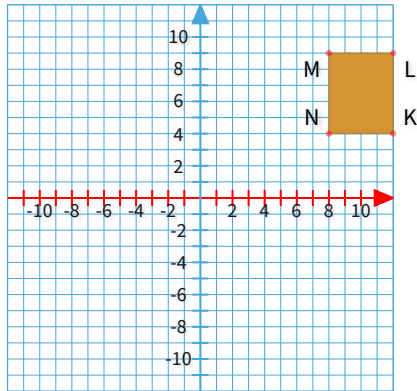


Show your work



#4

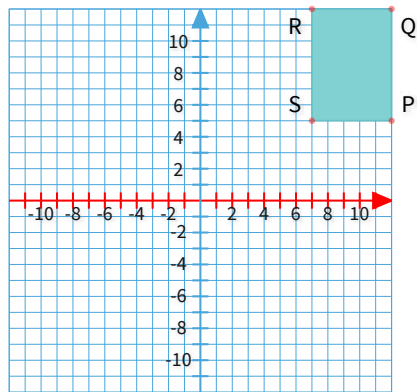
Graph the image of rectangle KLMN after a reflection over the x-axis.



Show your work

#5

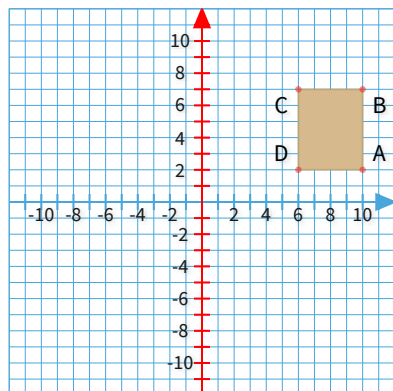
Graph the image of rectangle PQRS after a reflection over the x-axis.



Show your work

#6

Graph the image of rectangle ABCD after a reflection over the y-axis.

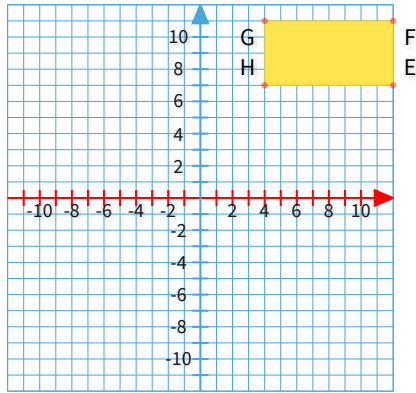


Show your work



#7

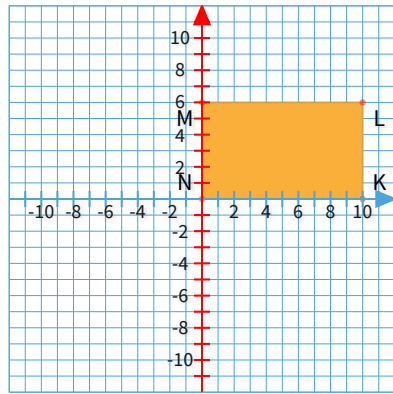
Graph the image of rectangle EFGH after a reflection over the x-axis.



Show your work

#8

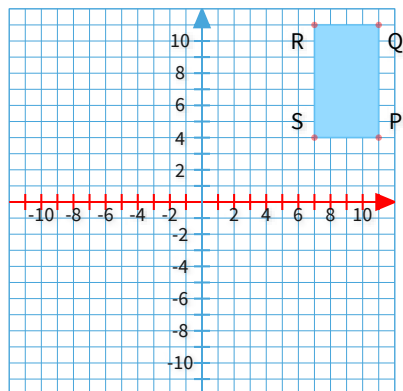
Graph the image of rectangle KLMN after a reflection over the y-axis.



Show your work

#9

Graph the image of rectangle PQRS after a reflection over the x-axis.

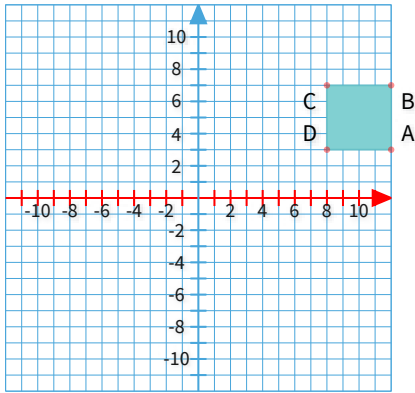


Show your work



#10

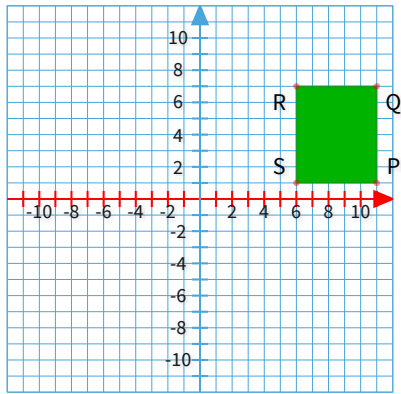
Graph the image of rectangle ABCD after a reflection over the x-axis.



Show your work

#11

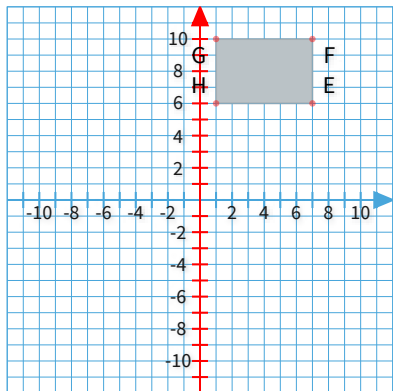
Graph the image of rectangle PQRS after a reflection over the x-axis.



Show your work

#12

Graph the image of rectangle EFGH after a reflection over the y-axis.



Show your work

Question	Answer
#1	-4,5,-12,5,-12,12,-4,12
#2	-5,2,-12,2,-12,10,-5,10
#3	-7,4,-11,4,-11,8,-7,8
#4	8,-4,12,-4,12,-9,8,-9
#5	7,-5,12,-5,12,-12,7,-12
#6	-6,2,-10,2,-10,7,-6,7
#7	4,-7,12,-7,12,-11,4,-11
#8	0,0,-10,0,-10,6,0,6
#9	7,-4,11,-4,11,-11,7,-11
#10	8,-3,12,-3,12,-7,8,-7
#11	6,-1,11,-1,11,-7,6,-7
#12	-1,6,-7,6,-7,10,-1,10