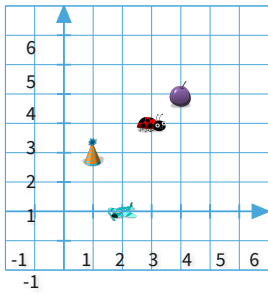


#1

Where is the plane?



Legend

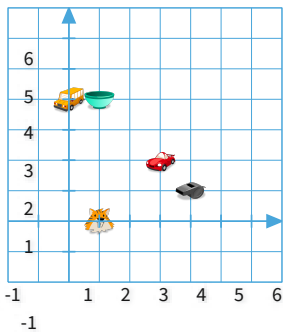
-  plane
-  ladybug
-  hat
-  grape

(,)






Show your work

#2

Lauren walked from the tiger to the bowl and then from the bowl to the bus. How far did Lauren walk in all?



Legend

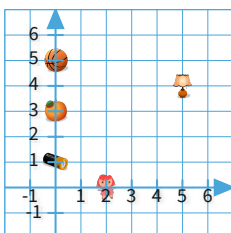
-  tiger
-  bowl
-  bus
-  sports car
-  whistle

units






Show your work

#3

Austin walked from the orange to the battery and then from the battery to the basketball. How far did Austin walk in all?



Legend

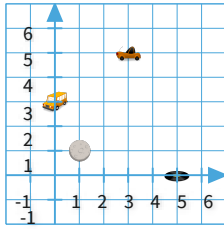
-  orange
-  battery
-  basketball
-  doll
-  lamp





- 6 units
- 9 units
- 4 units
- 7 units

Show your work

#4

Where is the moon?



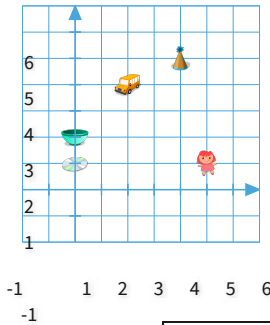
- Legend**
-  moon
 -  bus
 -  record
 -  car






- (0,3) (3,5)
 (1,1) (5,0)

Show your work

#5

Matthew walked from the doll to the compact disc and then from the compact disc to the bowl. How far did Matthew walk in all?



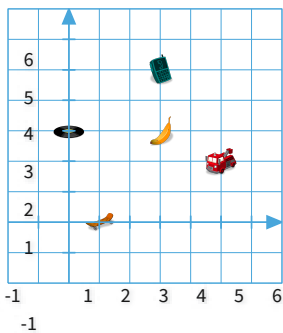
- Legend**
-  doll
 -  compact disc
 -  bowl
 -  hat
 -  bus






units

Show your work

#6

Lily walked from the record to the banana and then from the banana to the cell phone. How far did Lily walk in all?



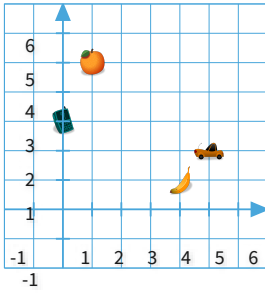
- Legend**
-  record
 -  banana
 -  cell phone
 -  skateboard
 -  fire truck

units





Show your work

#7

Where is the banana?



Legend

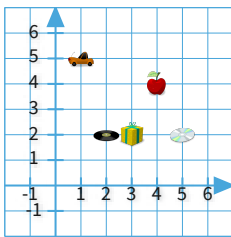
-  banana
-  cell phone
-  orange
-  car

(,)






Show your work

#8

Alexander walked from the record to the present and then from the present to the compact disc. How far did Alexander walk in all?



Legend

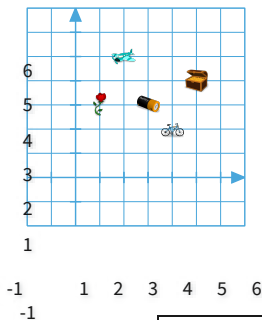
-  record
-  present
-  compact disc
-  apple
-  car

- 6 units
- 3 units
- 2 units
- 4 units






Show your work

#9

How far is it from the battery to the flower?



Legend

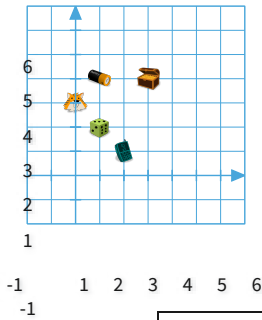
-  battery
-  flower
-  bicycle
-  plane
-  treasure chest

units

Show your work

#10

Gabriel walked from the die to the battery and then from the battery to the treasure chest. How far did Gabriel walk in all?



Legend

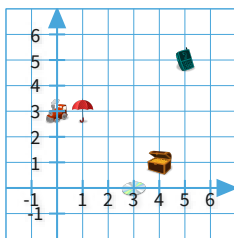
-  die
-  battery
-  treasure chest
-  cell phone
-  tiger

units






Show your work

#11

How far is it from the umbrella to the train?



Legend

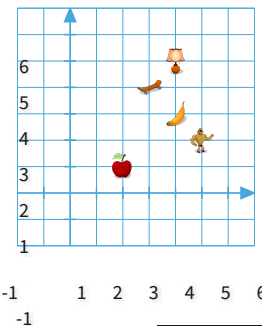
-  umbrella
-  train
-  compact disc
-  treasure chest
-  cell phone

- 4 units
- 2 units
- 1 units
- 3 units






Show your work

#12

How far is it from the lamp to the banana?



Legend

-  lamp
-  banana
-  action figure
-  apple
-  skateboard

units

Show your work

| Question | Answer |
|----------|----------|
| #1 | 2, 0 |
| #2 | 5 |
| #3 | choice 1 |
| #4 | choice 3 |
| #5 | 6 |
| #6 | 5 |
| #7 | 4, 1 |
| #8 | choice 2 |
| #9 | 2 |
| #10 | 4 |
| #11 | choice 3 |
| #12 | 2 |