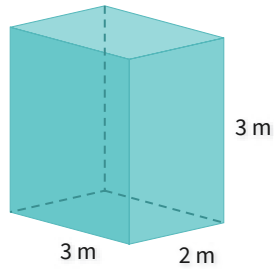


#1

What is the volume?

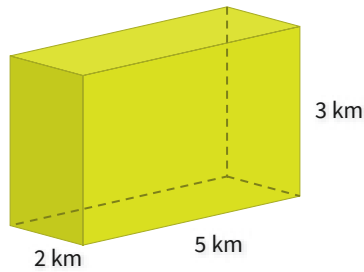


- 17 cubic m
- 18 cubic m
- 14 cubic m
- 21 cubic m

Show your work

#2

What is the volume?



- 38 cubic km
- 24 cubic km
- 31 cubic km
- 30 cubic km

Show your work

#3

What is the volume?

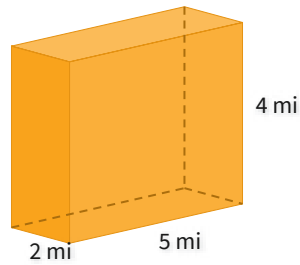


- 10 cubic ft
- 12 cubic ft
- 11 cubic ft
- 8 cubic ft

Show your work

#4

What is the volume?

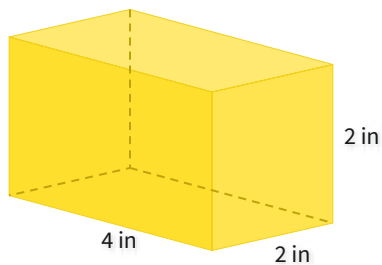


- 29 cubic mi
- 38 cubic mi
- 40 cubic mi
- 43 cubic mi

Show your work

#5

What is the volume?

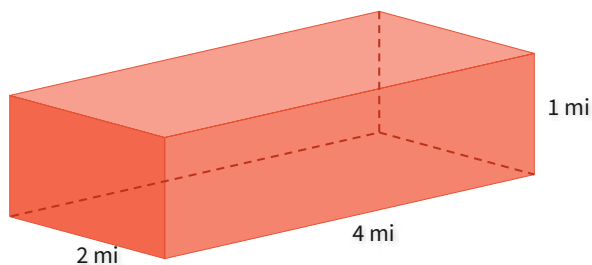


- 19 cubic in
- 11 cubic in
- 18 cubic in
- 16 cubic in

Show your work

#6

What is the volume?

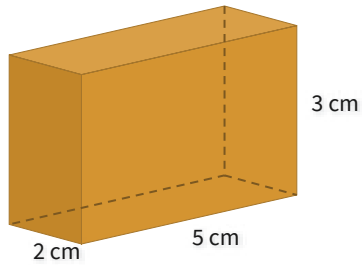


- 10 cubic mi
- 5 cubic mi
- 8 cubic mi
- 9 cubic mi

Show your work

#7

What is the volume?

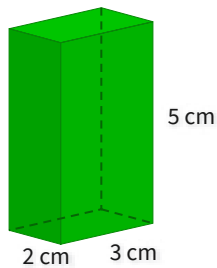


- 24 cubic cm
- 21 cubic cm
- 30 cubic cm
- 36 cubic cm

Show your work

#8

What is the volume?

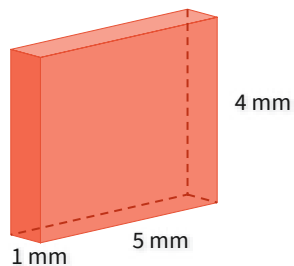


- 29 cubic cm
- 30 cubic cm
- 33 cubic cm
- 36 cubic cm

Show your work

#9

What is the volume?

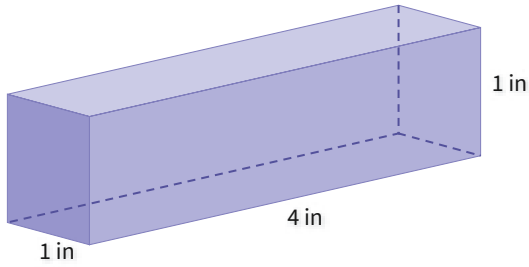


- 18 cubic mm
- 20 cubic mm
- 26 cubic mm
- 19 cubic mm

Show your work

#10

What is the volume?



- 1 cubic in
- 4 cubic in
- 2 cubic in
- 3 cubic in

Show your work

#11

What is the volume?

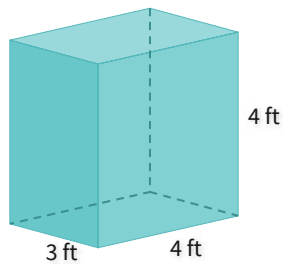


- 10 cubic m
- 13 cubic m
- 7 cubic m
- 9 cubic m

Show your work

#12

What is the volume?



- 44 cubic ft
- 63 cubic ft
- 58 cubic ft
- 48 cubic ft

Show your work

Question	Answer
#1	choice 2
#2	choice 4
#3	choice 1
#4	choice 3
#5	choice 4
#6	choice 3
#7	choice 3
#8	choice 2
#9	choice 2
#10	choice 2
#11	choice 1
#12	choice 4