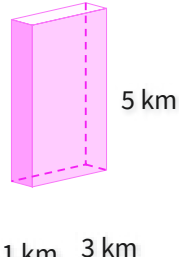


#1

What is the volume?

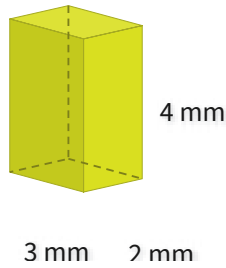


- 13 cubic km
- 12 cubic km
- 15 cubic km
- 20 cubic km

Show your work

#2

What is the volume?

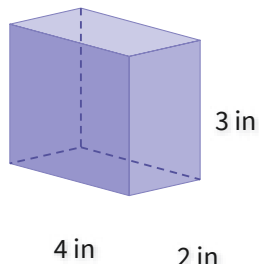


- 18 cubic mm
- 24 cubic mm
- 22 cubic mm
- 17 cubic mm

Show your work

#3

What is the volume?

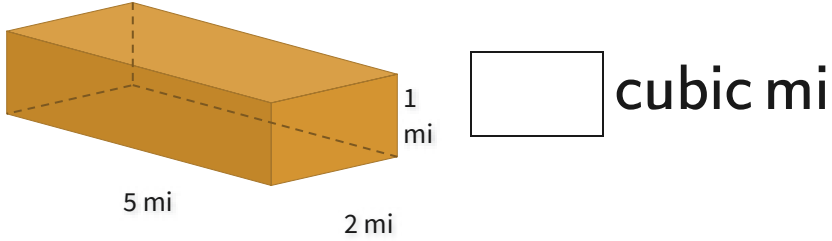


- 18 cubic in
- 28 cubic in
- 24 cubic in
- 17 cubic in

Show your work

#4

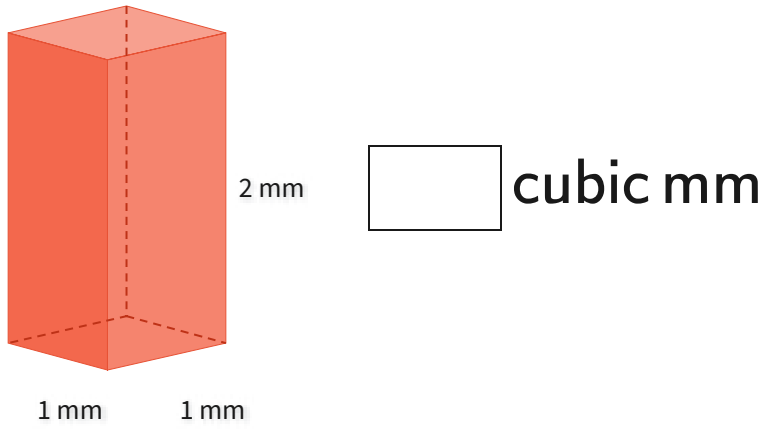
What is the volume?



Show your work

#5

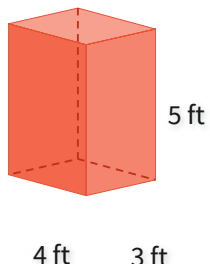
What is the volume?



Show your work

#6

What is the volume?

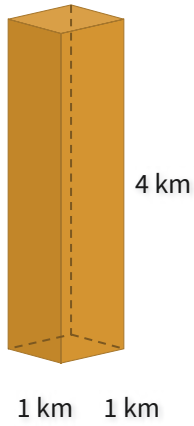


- 60 cubic ft
- 68 cubic ft
- 73 cubic ft
- 57 cubic ft

Show your work

#7

What is the volume?

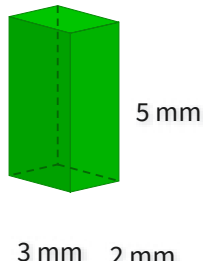


cubic km

Show your work

#8

What is the volume?

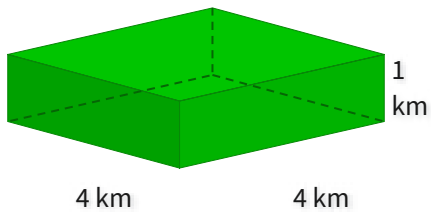


- 39 cubic mm
- 30 cubic mm
- 24 cubic mm
- 34 cubic mm

Show your work

#9

What is the volume?

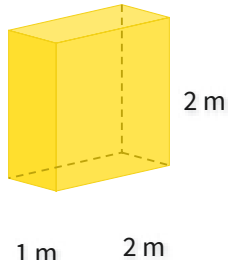


cubic km

Show your work

#10

What is the volume?

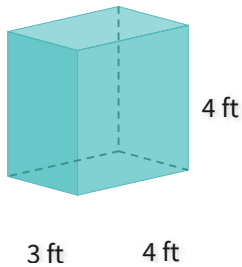


- 2 cubic m
- 6 cubic m
- 4 cubic m
- 1 cubic m

Show your work

#11

What is the volume?

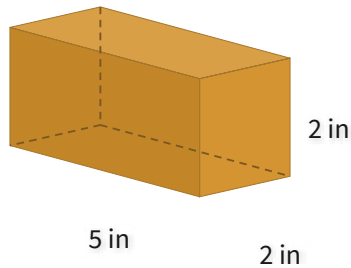


- 44 cubic ft
- 63 cubic ft
- 58 cubic ft
- 48 cubic ft

Show your work

#12

What is the volume?



- 17 cubic in
- 21 cubic in
- 20 cubic in
- 24 cubic in

Show your work

Question	Answer
#1	choice 3
#2	choice 2
#3	choice 3
#4	10
#5	2
#6	choice 1
#7	4
#8	choice 3
#9	16
#10	choice 3
#11	choice 4
#12	choice 3