


#1 Ava frequently flies for business. She made a chart of the number of flights made each month. Use the data below to complete the pictograph.

Flights Made				
Month	January	February	March	April
Flights	8	3	10	0



Show your work

#2 Lily is a referee for a football league. She made a chart of the number of penalties she has given each team. Use the data below to complete the pictograph.

Penalties Given				
Team Name	Predators	Blue Bombers	Marauders	Cougars
Penalties	2	5	8	4



Show your work

#3 At Cameron Elementary School students in the grade 2 class compare the number of action figures owned. Use the data below to complete the pictograph.

Action Figures owned				
Name	Hailey	Benjamin	Ryan	Ethan
Number	5	3	3	10

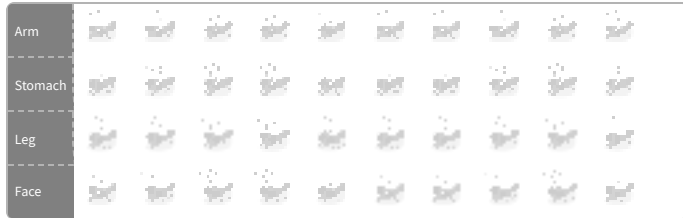


Show your work

#4

Natalie is covered in ants. The table below shows where on her body the ants are located. Use the data below to complete the pictograph.

Ant Location				
Location	Arm	Stomach	Leg	Face
Number of Ants	8	7	2	0



Show your work

#5

While playing musical chairs, a chart was made for how many chairs several of the kids sat in before they were eliminated. Use the data below to complete the pictograph.

Chairs Sat In				
Name	Ethan	Mia	Caleb	Logan
Chairs	0	9	6	3




Show your work

#6

Natalie is a galactic explorer looking for habitable planets and has arrived at a new solar system, Gliese 581. She wants to mark the number of moons around each planet in a graph. Use the data below to complete the pictograph.

Moons Around Planets				
Planet	Gliese 581 b	Gliese 581 c	Gliese 581 d	Gliese 581 e
Moon	9	3	5	6




Show your work

#7

Jackson made a table of the number tigers he saw on safari. Use the data below to complete the pictograph.

Tigers Seen				
Day	Monday	Tuesday	Wednesday	Thursday
Tigers	8	7	5	3




Show your work

#8

The grade 4 class at Jayden Elementary School made a chart of the number of presents each of them gave for Christmas. Use the data below to complete the pictograph.

Presents Given				
Name	Dahlia	Alyssa	Addison	Kaylee
Number	1	5	1	2




Show your work

#9

Daniel is covered in ants. The table below shows where on his body the ants are located. Use the data below to complete the pictograph.

Ant Location				
Location	Arm	Stomach	Leg	Face
Number of Ants	6	10	5	1




Show your work

#10

Evan made a table of the baskets he made at practice. Use the data below to complete the pictograph.

Baskets made				
Day	Monday	Tuesday	Wednesday	Thursday
Baskets	7	8	3	10




Show your work

#11

Darren is a galactic explorer looking for habitable planets and has arrived at a new solar system, Gliese 581. He wants to mark the number of moons around each planet in a graph. Use the data below to complete the pictograph.

Moons Around Planets				
Planet	Gliese 581 b	Gliese 581 c	Gliese 581 d	Gliese 581 e
Moon	10	7	7	10




Show your work

#12

Cameron frequently flies for business. He made a chart of the number of flights made each month. Use the data below to complete the pictograph.

Flights Made				
Month	January	February	March	April
Flights	0	2	6	0



Show your work

Question	Answer
#1	8, 3, 10, 0
#2	2, 5, 8, 4
#3	5, 3, 3, 10
#4	8, 7, 2, 0
#5	0, 9, 6, 3
#6	9, 3, 5, 6
#7	8, 7, 5, 3
#8	1, 5, 1, 2
#9	6, 10, 5, 1
#10	7, 8, 3, 10
#11	10, 7, 7, 10
#12	0, 2, 6, 0