




#1

The grade 4 class at Caleb Elementary School made a chart of the number of presents each of them gave for Christmas. Use the data below to complete the pictograph.

Presents Given				
Name	Austin	Kevin	Kayla	Anna
Number	2	1	10	5




Show your work

#2

Dahlia frequently flies for business. She made a chart of the number of flights made each month. Use the data below to complete the pictograph.

Flights Made				
Month	January	February	March	April
Flights	10	2	1	8




Show your work

#3

The grade 4 class at Christopher Elementary School made a chart of the number of presents each of them gave for Christmas. Use the data below to complete the pictograph.

Presents Given				
Name	Natalie	Grace	Kayla	Ella
Number	8	6	8	0




Show your work

#4

Zachary is a galactic explorer looking for habital planets and has arrived at a new solar system, Gliese 581. He wants to mark the number of moons around each planet in a graph. Use the data below to complete the pictograph.

Moons Around Planets				
Planet	Gliese 581 b	Gliese 581 c	Gliese 581 d	Gliese 581 e
Moon	5	9	6	7




Show your work

#5

The grade 4 class at Andrew Elementary School made a chart of the number of presents each of them gave for Christmas. Use the data below to complete the pictograph.

Presents Given				
Name	William	Ethan	Anthony	Alyssa
Number	7	1	5	2



Show your work

#6

Angela made a table of the number tigers she saw on safari. Use the data below to complete the pictograph.

Tigers Seen				
Day	Monday	Tuesday	Wednesday	Thursday
Tigers	4	2	0	1



Show your work

#7

Aiden lives in the rainy city of Vancouver. He made a chart of the number of times he had to use an umbrella each month. Use the data below to complete the pictograph.

Umbrellas Used Each Month				
Month	January	February	March	April
Umbrellas	10	6	2	2




Show your work

#8

The grade 4 class at Daniel Elementary School made a chart of the number of presents each of them gave for Christmas. Use the data below to complete the pictograph.

Presents Given				
Name	Grace	Joshua	Jack	Alexa
Number	9	9	2	9



Show your work

#9

Jackson is a referee for a football league. He made a chart of the number of penalties he has given each team. Use the data below to complete the pictograph.

Penalties Given				
Team Name	Predators	Blue Bombers	Marauders	Cougars
Penalties	4	3	3	4



Show your work

#10

Darren made a table of the number tigers he saw on safari. Use the data below to complete the pictograph.

Tigers Seen				
Day	Monday	Tuesday	Wednesday	Thursday
Tigers	5	5	4	0



Show your work

#11

Savannah lives in the rainy city of Vancouver. She made a chart of the number of times she had to use an umbrella each month. Use the data below to complete the pictograph.

Umbrellas Used Each Month				
Month	January	February	March	April
Umbrellas	0	0	8	4




Show your work

#12

Nathan is a galactic explorer looking for habital planets and has arrived at a new solar system, Gliese 581. He wants to mark the number of moons around each planet in a graph. Use the data below to complete the pictograph.

Moons Around Planets				
Planet	Gliese 581 b	Gliese 581 c	Gliese 581 d	Gliese 581 e
Moon	7	9	7	9



Show your work

Question	Answer
#1	2, 1, 10, 5
#2	10, 2, 1, 8
#3	8, 6, 8, 0
#4	5, 9, 6, 7
#5	7, 1, 5, 2
#6	4, 2, 0, 1
#7	10, 6, 2, 2
#8	9, 9, 2, 9
#9	4, 3, 3, 4
#10	5, 5, 4, 0
#11	0, 0, 8, 4
#12	7, 9, 7, 9