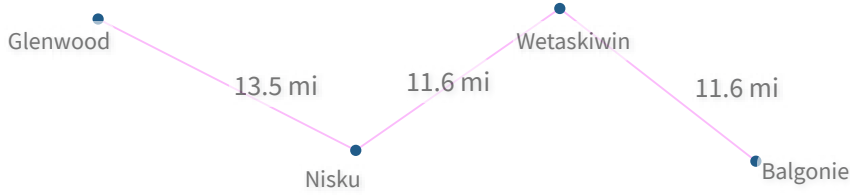


#1

Using the paths shown, how far is it from Wetaskiwin to Balgonie?

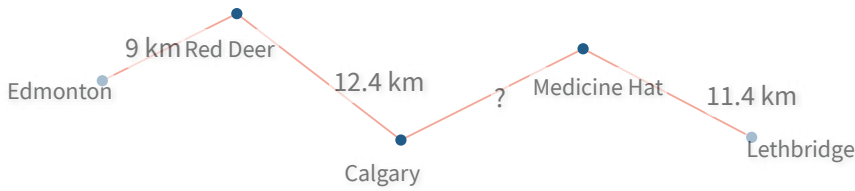


- 8.3 mi
- 12.5 mi
- 12.7 mi
- 11.6 mi

Show your work

#2

Using the paths shown, the distance from Edmonton to Lethbridge is 45 km. How far is it from Calgary to Medicine Hat?



- 15.6 km
- 10.3 km
- 12.2 km
- 10 km

Show your work

#3

Using the paths shown, the distance from Greenwood to Hampton is 35.7 mi. How far is it from London to Hampton?



mi

Show your work

#4

Using the paths shown, how long is the shortest route from Tremblant to London?



- 25.7 km
- 20.5 km
- 33.2 km
- 26.7 km

Show your work

#5

Using the paths shown, how long is the shortest route from Caroline to Lacombe?

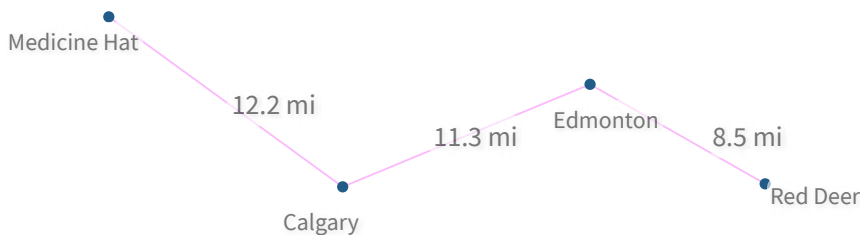


- 30.5 km
- 36.1 km
- 36.8 km
- 39.4 km

Show your work

#6

Using the paths shown, how far is it from Medicine Hat to Edmonton?

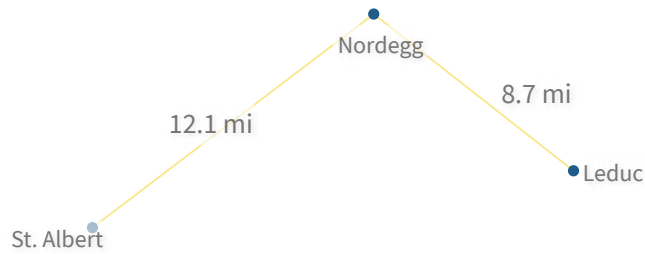


- 28.4 mi
- 27.1 mi
- 21 mi
- 23.5 mi

Show your work

#7

Using the paths shown, how far is it from Nordegg to Leduc?

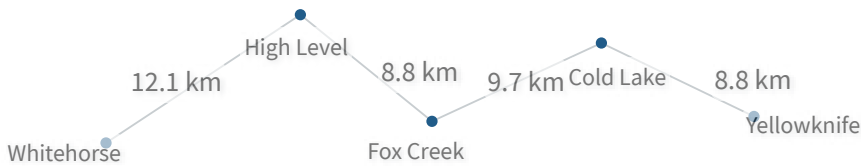


- 8.7 mi
- 10.1 mi
- 9.1 mi
- 9.2 mi

Show your work

#8

Using the paths shown, how far is it from Fox Creek to Yellowknife?

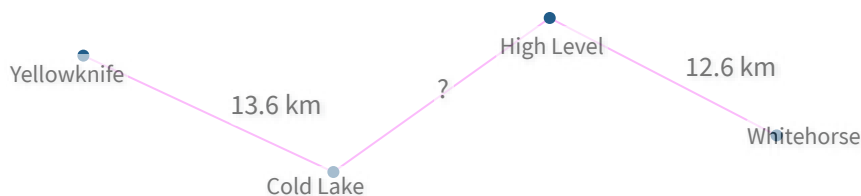


- 23.7 km
- 14.1 km
- 18.5 km
- 23.1 km

Show your work

#9

Using the paths shown, the distance from Yellowknife to Whitehorse is 39.3 km. How far is it from Cold Lake to High Level?



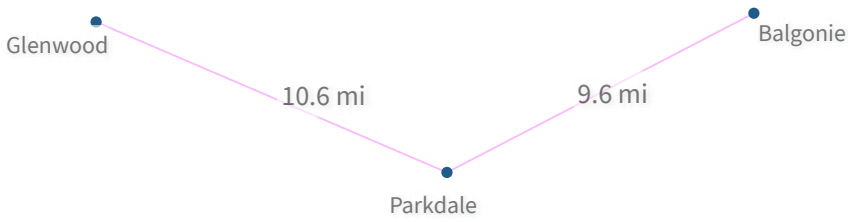
km

Show your work



#10

Using the paths shown, how far is it from Glenwood to Parkdale?

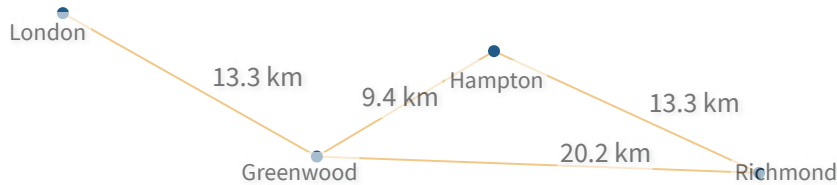


- 9.4 mi
- 10.6 mi
- 10.4 mi
- 11 mi

Show your work

#11

Using the paths shown, how long is the shortest route from London to Richmond?



km

Show your work

#12

Using the paths shown, how long is the shortest route from Smoky Lake to Banff?



mi

Show your work

Question	Answer
#1	choice 4
#2	choice 3
#3	12.8
#4	choice 1
#5	choice 2
#6	choice 4
#7	choice 1
#8	choice 3
#9	13.1
#10	choice 2
#11	33.5
#12	29.3