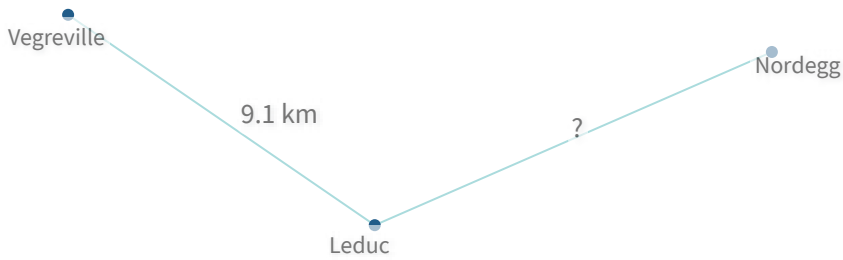


#1

Using the paths shown, the distance from Vegreville to Nordegg is 19.7 km. How far is it from Leduc to Nordegg?

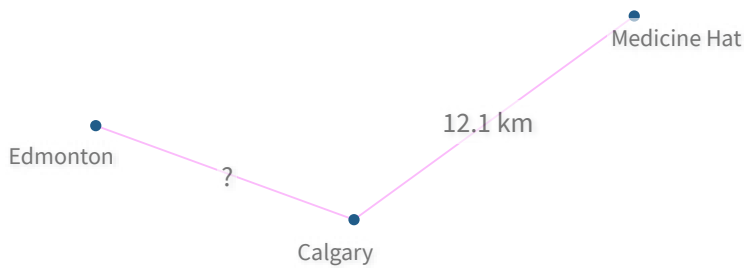


km

Show your work

#2

Using the paths shown, the distance from Edmonton to Medicine Hat is 21.7 km. How far is it from Edmonton to Calgary?

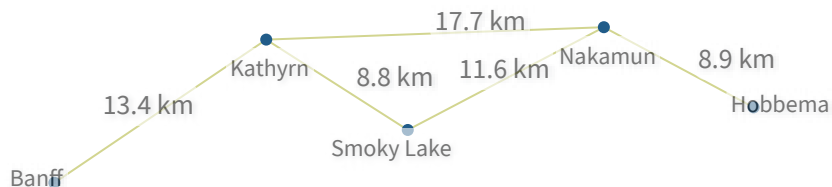


- 10 km
- 12.3 km
- 10.1 km
- 9.6 km

Show your work

#3

Using the paths shown, how long is the shortest route from Kathryn to Hobbema?

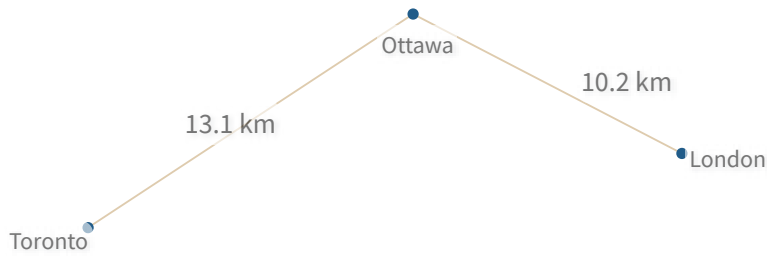


km

Show your work

#4

Using the paths shown, how far is it from Ottawa to London?



- 12.8 km
- 10.2 km
- 10 km
- 12.5 km

Show your work

#5

Using the paths shown, how far is it from St. Albert to Vulcan?

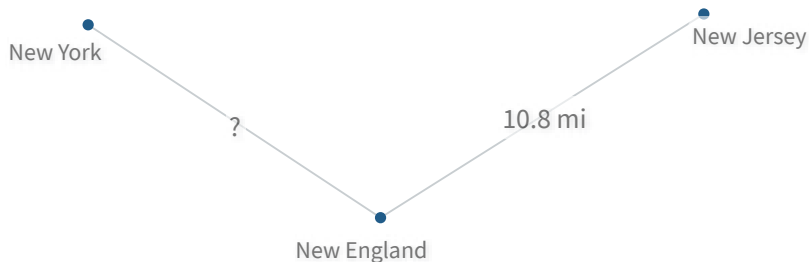


- 9.1 km
- 7 km
- 7.6 km
- 8.3 km

Show your work

#6

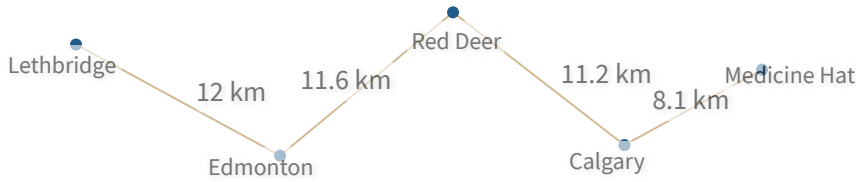
Using the paths shown, the distance from New York to New Jersey is 20.7 mi. How far is it from New York to New England?



- 10 mi
- 8.6 mi
- 9.9 mi
- 12.3 mi

Show your work


#7 Using the paths shown, how far is it from Red Deer to Medicine Hat?



km

Show your work

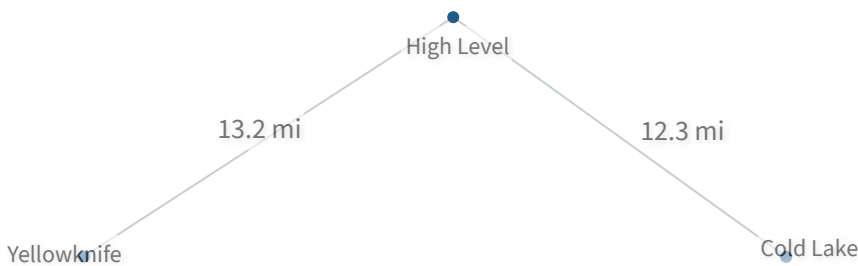
#8 Using the paths shown, how far is it from Glenwood to Wetaskiwin?



- 10 mi
- 9 mi
- 8.4 mi
- 6.7 mi

Show your work

#9 Using the paths shown, how far is it from High Level to Cold Lake?

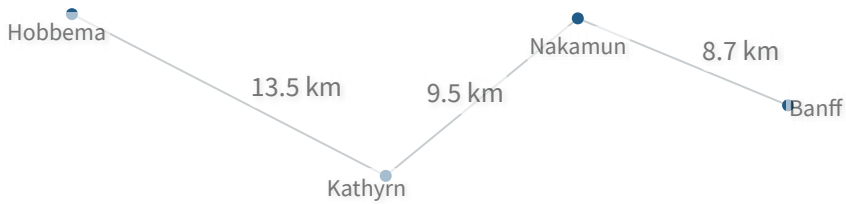


mi

Show your work

#10

Using the paths shown, how far is it from Kathryn to Banff?



km

Show your work

#11

Using the paths shown, the distance from Cold Lake to Yellowknife is 48.2 km. How far is it from Cold Lake to Whitehorse?

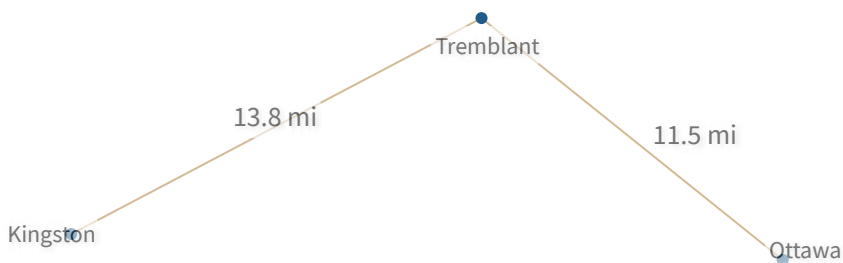


km

Show your work

#12

Using the paths shown, how far is it from Kingston to Ottawa?



mi

Show your work

Question	Answer
#1	10.6
#2	choice 4
#3	26.6
#4	choice 2
#5	choice 4
#6	choice 3
#7	19.3
#8	choice 3
#9	12.3
#10	18.2
#11	13.5
#12	25.3