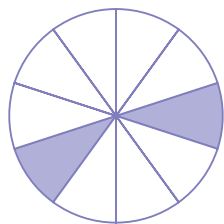


#1


What fraction of the shape is filled? Write your answer using a percent sign (For example: 50%).

 20% 50% 40% 10%

Show your work

#2

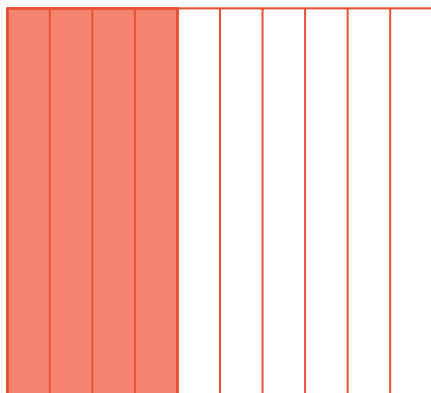
What fraction of the shape is filled? Write your answer using a percent sign (For example: 50%).



Show your work

#3

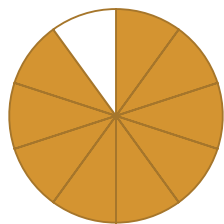
What fraction of the shape is filled? Write your answer using a percent sign (For example: 50%).



Show your work

#4


What fraction of the shape is filled? Write your answer using a percent sign (For example: 50%).

 60% 90% 70% 80%

Show your work

#5

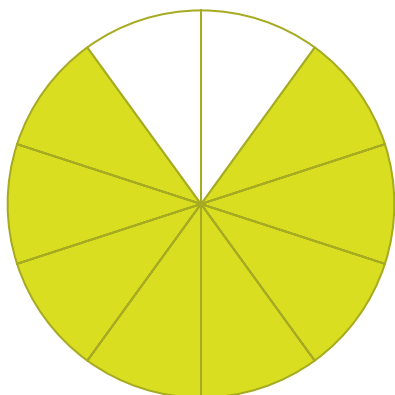
What fraction of the shape is filled? Write your answer using a percent sign (For example: 50%).

 10% 30% 20% 40%

Show your work

#6


What fraction of the shape is filled? Write your answer using a percent sign (For example: 50%).



Show your work

#7


What fraction of the shape is filled? Write your answer using a percent sign (For example: 50%).

 100% 50% 70% 60%

Show your work

#8

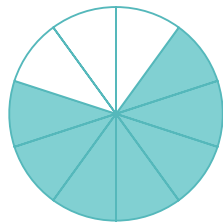
What fraction of the shape is filled? Write your answer using a percent sign (For example: 50%).

 40% 30% 50% 10%

Show your work

#9

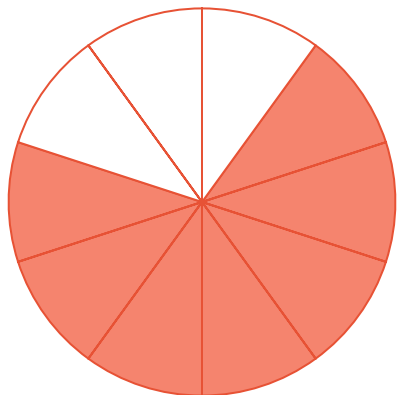
What fraction of the shape is filled? Write your answer using a percent sign (For example: 50%).

 50% 100% 70% 90%

Show your work

#10

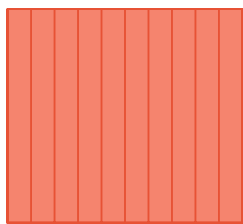
What fraction of the shape is filled? Write your answer using a percent sign (For example: 50%).



Show your work

#11

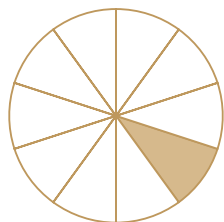
What fraction of the shape is filled? Write your answer using a percent sign (For example: 50%).

 70% 80% 100% 90%

Show your work

#12

What fraction of the shape is filled? Write your answer using a percent sign (For example: 50%).

 10% 30% 20% 40%

Show your work

Question	Answer
#1	choice 1
#2	10%
#3	40%
#4	choice 2
#5	choice 1
#6	80%
#7	choice 3
#8	choice 2
#9	choice 3
#10	70%
#11	choice 3
#12	choice 1