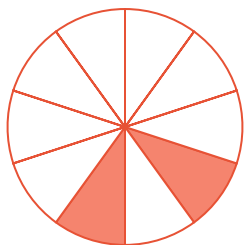



#1 What fraction of the shape is filled? Write your answer using a percent sign (For example: 50%).

 20% 50% 40% 10%

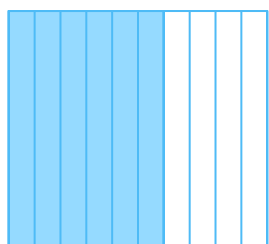
Show your work

#2 What fraction of the shape is filled? Write your answer using a percent sign (For example: 50%).

 100% 50% 70% 60%

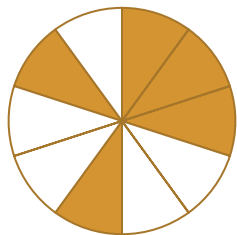
Show your work

#3 What fraction of the shape is filled? Write your answer using a percent sign (For example: 50%).

 90% 30% 80% 60%


Show your work

#4 What fraction of the shape is filled? Write your answer using a percent sign (For example: 50%).

 50% 80% 20% 70%


Show your work

#5 What fraction of the shape is filled? Write your answer using a percent sign (For example: 50%).

 90% 30% 80% 60%


Show your work

#6 What fraction of the shape is filled? Write your answer using a percent sign (For example: 50%).

 50% 60% 70% 80%


Show your work

#7 What fraction of the shape is filled? Write your answer using a percent sign (For example: 50%).

 40% 50% 20% 10%

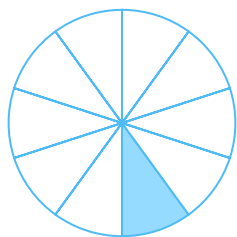
Show your work

#8 What fraction of the shape is filled? Write your answer using a percent sign (For example: 50%).

 20% 30% 70% 40%

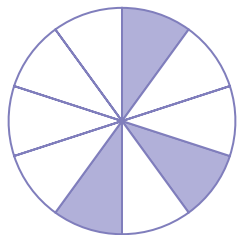
Show your work

#9 What fraction of the shape is filled? Write your answer using a percent sign (For example: 50%).

 10% 30% 20% 40%


Show your work

#10 What fraction of the shape is filled? Write your answer using a percent sign (For example: 50%).

 30% 50% 40% 60%

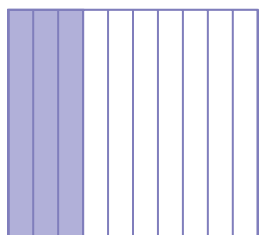
Show your work

#11 What fraction of the shape is filled? Write your answer using a percent sign (For example: 50%).

 10% 30% 20% 40%

Show your work

#12 What fraction of the shape is filled? Write your answer using a percent sign (For example: 50%).

 40% 30% 50% 10%

Show your work

Question	Answer
#1	choice 1
#2	choice 3
#3	choice 4
#4	choice 1
#5	choice 4
#6	choice 4
#7	choice 3
#8	choice 4
#9	choice 1
#10	choice 1
#11	choice 1
#12	choice 2