

#1

Which figure will this net make?



Show your work

#2

Which figure will this net make?



Show your work

#3

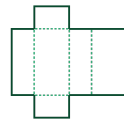
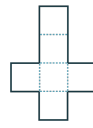
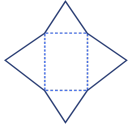
Which figure will this net make?



Show your work

#4

Which net will make this figure?



Show your work

#5

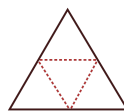
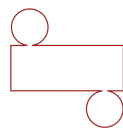
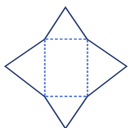
Which figure will this net make?



Show your work

#6

Which net will make this figure?



Show your work

#7

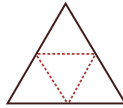
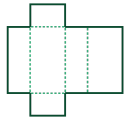
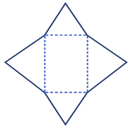
Which figure will this net make?



Show your work

#8

Which net will make this figure?



Show your work

#9

Which figure will this net make?

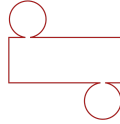
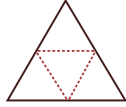
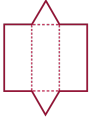


Show your work



#10

Which net will make this figure?



Show your work

#11

Which figure will this net make?



Show your work

#12

Which figure will this net make?



Show your work

Question	Answer
#1	choice 3
#2	choice 1
#3	choice 1
#4	choice 1
#5	choice 3
#6	choice 3
#7	choice 1
#8	choice 2
#9	choice 1
#10	choice 1
#11	choice 1
#12	choice 3