

#1

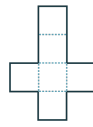
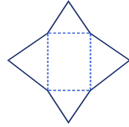
Which figure will this net make?



Show your work

#2

Which net will make this figure?



Show your work

#3

Which figure will this net make?



Show your work

#4

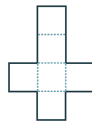
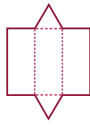
Which figure will this net make?



Show your work

#5

Which net will make this figure?



Show your work

#6

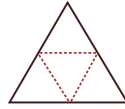
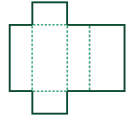
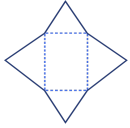
Which figure will this net make?



Show your work

#7

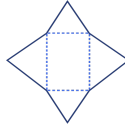
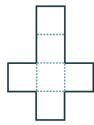
Which net will make this figure?



Show your work

#8

Which net will make this figure?



Show your work

#9

Which figure will this net make?

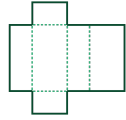
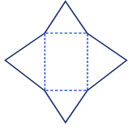


Show your work



#10

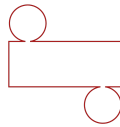
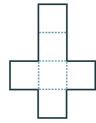
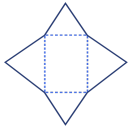
Which net will make this figure?



Show your work

#11

Which net will make this figure?



Show your work

#12

Which figure will this net make?



Show your work

Question	Answer
#1	choice 2
#2	choice 2
#3	choice 1
#4	choice 1
#5	choice 1
#6	choice 1
#7	choice 2
#8	choice 3
#9	choice 2
#10	choice 3
#11	choice 3
#12	choice 1