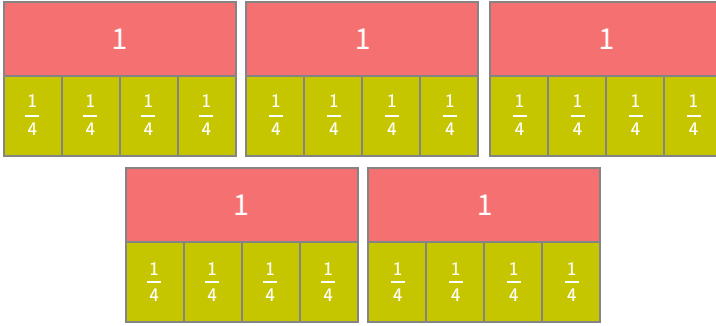


#4

Divide. Use the models to help you.

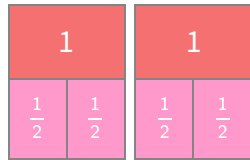


$$5 \div \frac{1}{4} = \boxed{}$$

Show your work

#5

Divide. Use the models to help you.



$$2 \div \frac{1}{2} = ?$$

2

4

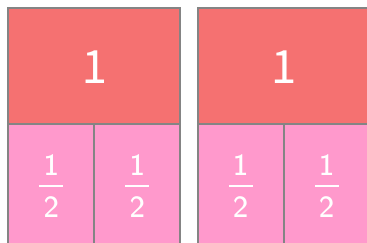
3

5

Show your work

#6

Divide. Use the models to help you.

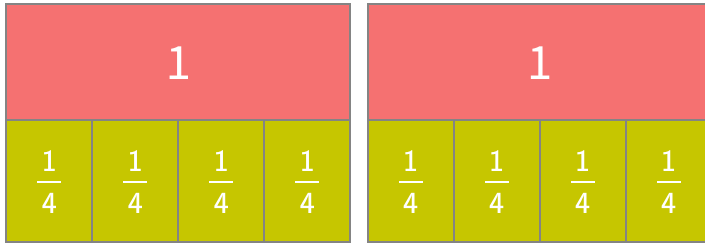


$$2 \div \frac{1}{2} = \boxed{}$$

Show your work

#7

Divide. Use the models to help you.

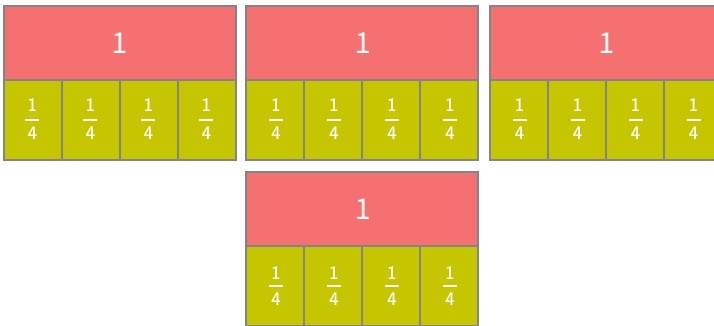


$$2 \div \frac{1}{4} = \boxed{}$$

Show your work

#8

Divide. Use the models to help you.

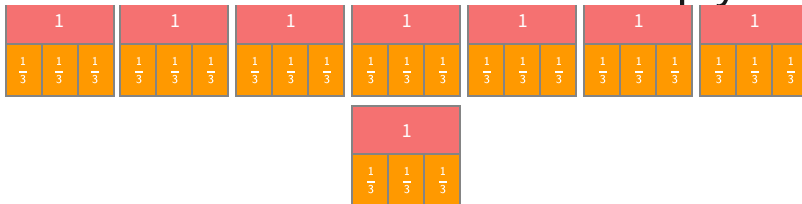


$$4 \div \frac{1}{4} = \boxed{}$$

Show your work

#9

Divide. Use the models to help you.



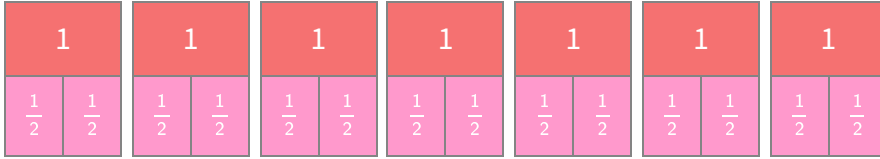
$$8 \div \frac{1}{3} = ?$$

- 30
- 24
- 26
- 22

Show your work

#10

Divide. Use the models to help you.

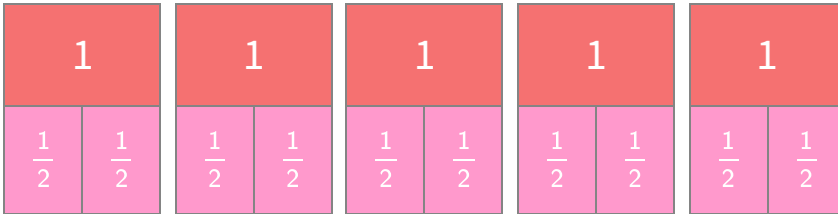


$$7 \div \frac{1}{2} = \boxed{}$$

Show your work

#11

Divide. Use the models to help you.

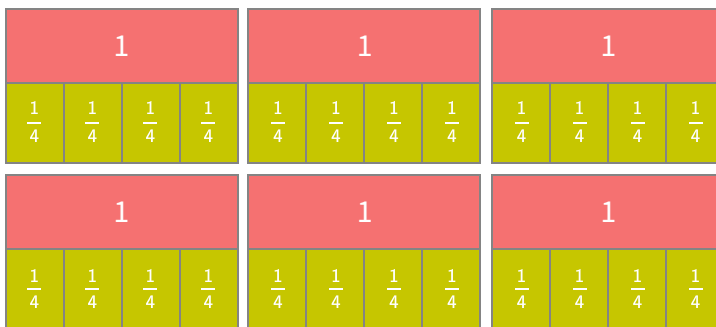


$$5 \div \frac{1}{2} = \boxed{}$$

Show your work

#12

Divide. Use the models to help you.



$$6 \div \frac{1}{4} = \boxed{}$$

Show your work

Question	Answer
#1	6
#2	40
#3	8
#4	20
#5	4
#6	4
#7	8
#8	16
#9	24
#10	14
#11	10
#12	24