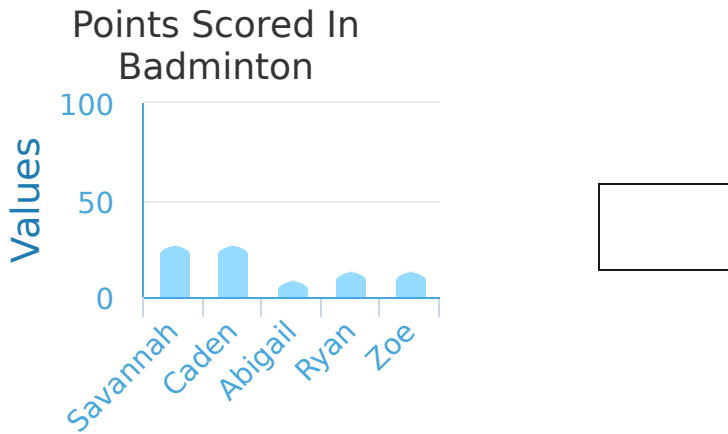
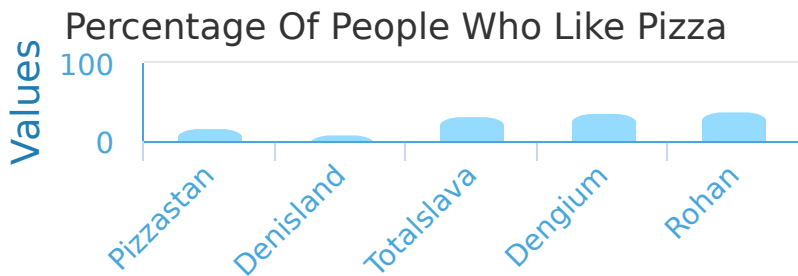


#1 Use the bar graph below to find out how many points Ryan scored.



Show your work

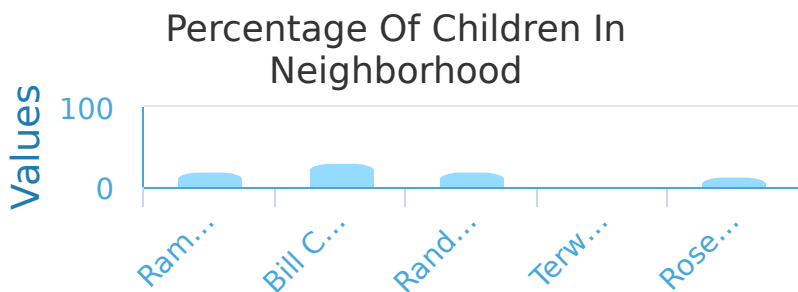
#2 Which country has the largest percentage of people who like pizza?



- Rohan
 Pizzastan
 Totalslava
 Denisland
 Dengium

Show your work

#3 The graph below shows the percentage of children in various neighborhoods around the city. Which neighborhood has the lowest percentage of children?



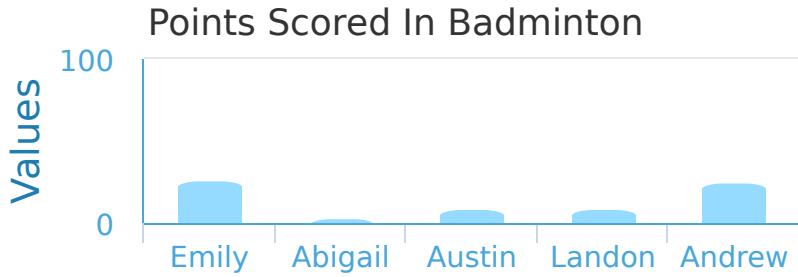
- Ramsey Woods
 Randys River
 Rose Canyon
 Bill Creek
 Terwiggler

Show your work



#4

Use the bar graph below to find out who has scored the most amount of points on the badminton team.



- Abigail Andrew Landon
 Austin Emily

Show your work

#5

In New Orleans they ran a survey on the favorite type of snack food. Which snack food is most popular?

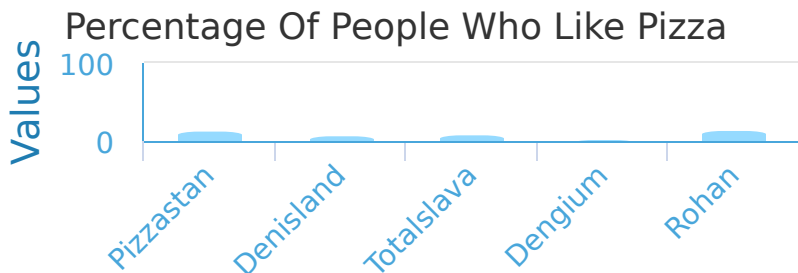


- Chocolate Fruit Junk Food
 Vegetables Nuts

Show your work

#6

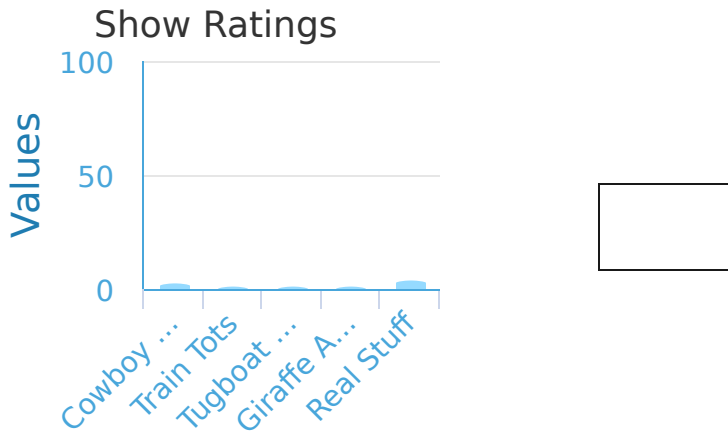
Which country has the smallest percentage of people who like pizza?



- Dengium Denisland Pizzastan
 Rohan Totalslava


Show your work

#7 The graph below shows the ratings of popular shows. What is the rating of Cowboy Boop?



Show your work

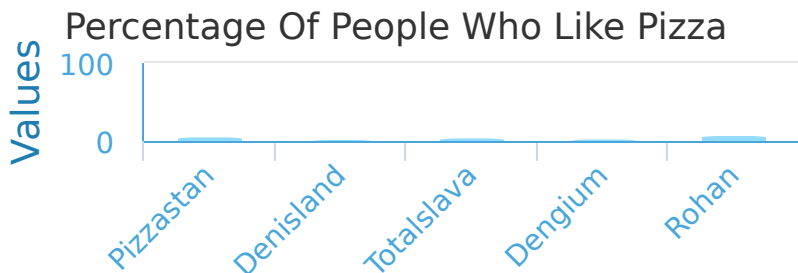
#8 The bar graph below shows the viewers for each channel on television. Which channel has the least amount of viewers?



- Channel 4
- Channel 1
- Channel 5
- Channel 3
- Channel 2

Show your work

#9 Which country has the largest percentage of people who like pizza?



- Dengium
- Totalslava
- Pizzastan
- Rohan
- Denisland

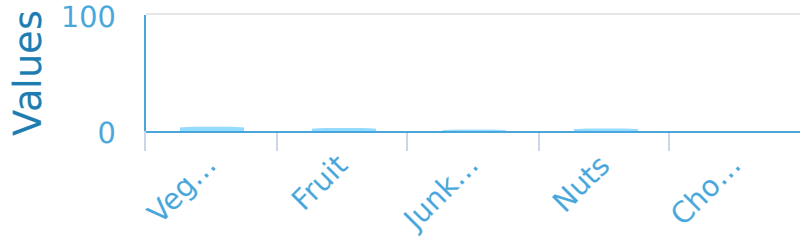
Show your work



#10

In New Orleans they ran a survey on the favorite type of snack food. Which snack food is least popular?

Favorite Snacks In New Orleans




- Vegetables
- Nuts
- Chocolate
- Junk Food
- Fruit

Show your work

#11

Olivia polled her classmates who rode bikes to find out which lock was the most popular among them. Looking at the graph below that she made, which lock is used the least?

Cyclist Locks



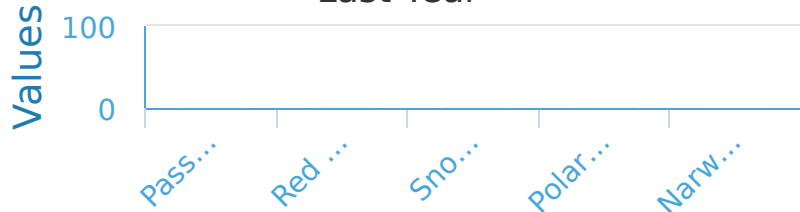
- Combo Lock
- Locking Skewers
- Key Lock
- Cable Locks
- U-lock

Show your work

#12

The graph below shows the percentage of a species that was killed off in the last year. Which animal is in the most danger?

Percentage Of Animal Population Killed Last Year



- Polar Bear
- Red Panda
- Narwhal
- Snow Leopard
- Passenger Pigeon

Show your work

Question	Answer
#1	30
#2	choice 1
#3	choice 5
#4	choice 5
#5	choice 5
#6	choice 1
#7	20
#8	choice 4
#9	choice 4
#10	choice 3
#11	choice 2
#12	choice 2