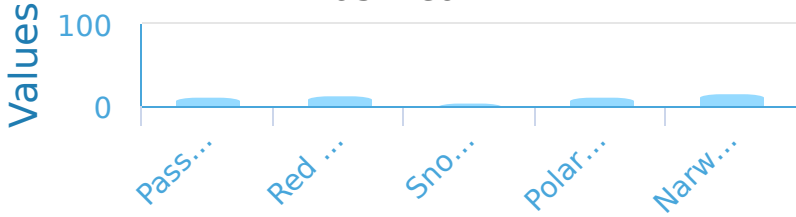


#1

The graph below shows the percentage of a species that was killed off in the last year. Which animal is in the most danger?

Percentage Of Animal Population Killed Last Year



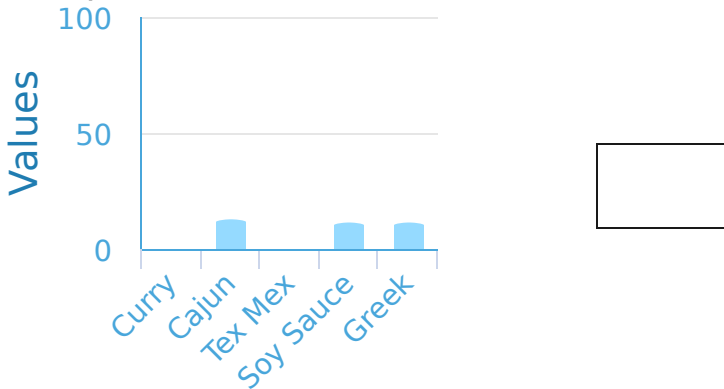
- Polar Bear
 Red Panda
 Narwhal
 Snow Leopard
 Passenger Pigeon

Show your work

#2

A school-wide survey was put out to find the most-liked flavor of the population in order to spice up cafeteria food. The graph below shows the number of students / teachers that like each spice. How many prefer Curry?

Spice Preference

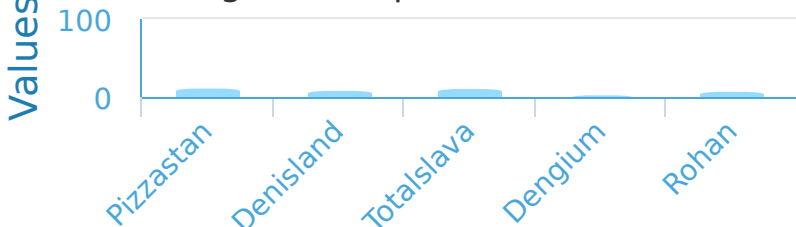


Show your work

#3

Which country has the largest percentage of people who like pizza?

Percentage Of People Who Like Pizza




- Pizzastan
 Dengium
 Rohan
 Denisland
 Totalslava

Show your work

#4

The graph below shows the percentage of a species that was killed off in the last year. Which animal is in the most danger?

Percentage Of Animal Population Killed Last Year



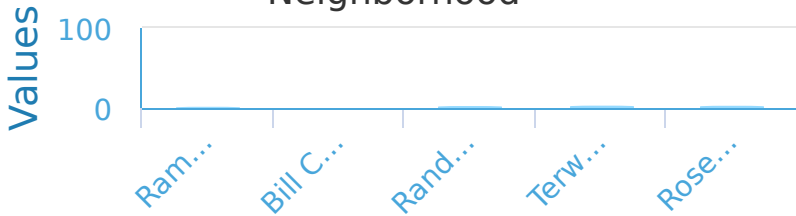
- Red Panda
 Polar Bear
 Narwhal
 Passenger Pigeon
 Snow Leopard

Show your work

#5

The graph below shows the percentage of children in various neighborhoods around the city. Which neighborhood has the lowest percentage of children?

Percentage Of Children In Neighborhood



- Ramsey Woods
 Randys River
 Bill Creek
 Terwiggler
 Rose Canyon

Show your work

#6

The graph below shows the percentage of children in various neighborhoods around the city. Which neighborhood has the highest percentage of children?

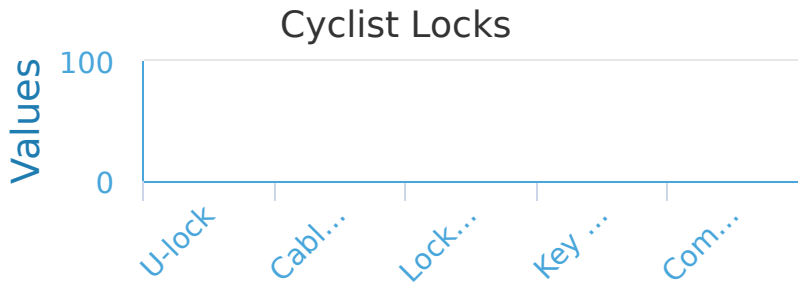
Percentage Of Children In Neighborhood



- Randys River
 Terwiggler
 Bill Creek
 Rose Canyon
 Ramsey Woods

Show your work

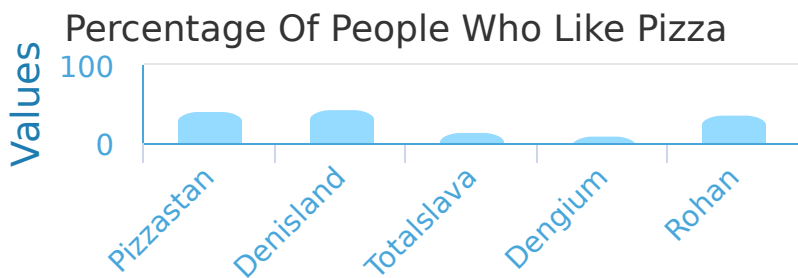
#7 William polled his classmates who rode bikes to find out which lock was the most popular among them. Looking at the graph below that he made, which lock is used the least?



- Key Lock
 Combo Lock
 Locking Skewers
 Cable Locks
 U-lock

Show your work

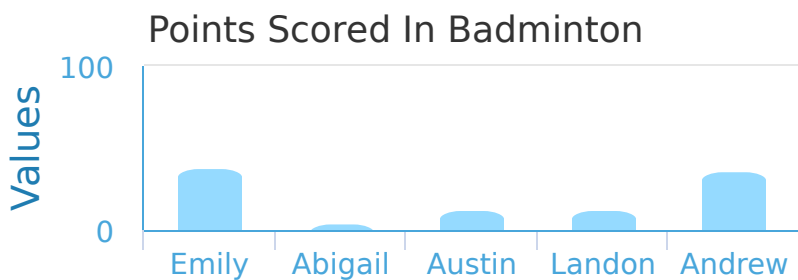
#8 Which country has the largest percentage of people who like pizza?



- Totalslava
 Rohan
 Dengium
 Pizzastan
 Denisland

Show your work

#9 Use the bar graph below to find out who has scored the most amount of points on the badminton team.



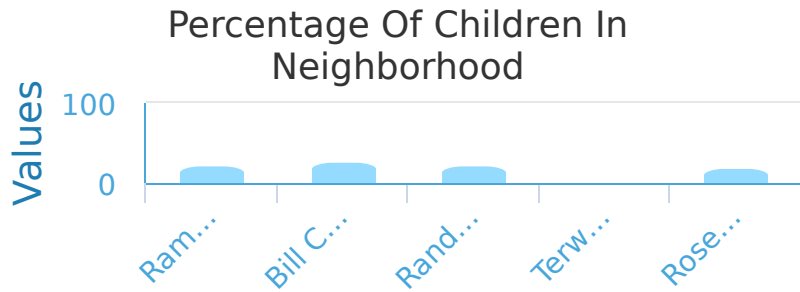
- Abigail
 Andrew
 Landon
 Austin
 Emily

Show your work



#10

The graph below shows the percentage of children in various neighborhoods around the city. Which neighborhood has the highest percentage of children?

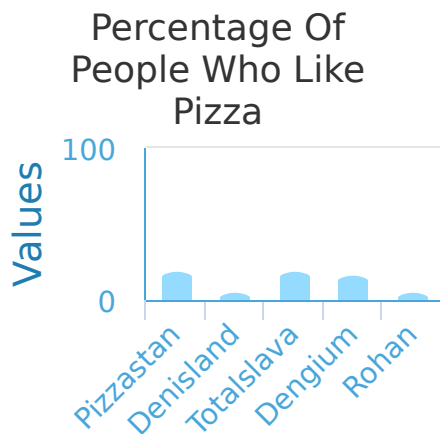


- Ramsey Woods
 Randys River
 Terwiggler
 Rose Canyon
 Bill Creek

Show your work

#11

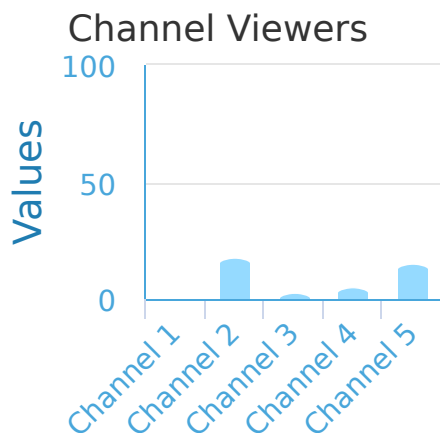
What percentage of people in Rohan like pizza?



Show your work

#12

The bar graph below shows the viewers for each channel on television. How many viewers does Channel 4 have?



Show your work

Question	Answer
#1	choice 3
#2	0
#3	choice 1
#4	choice 3
#5	choice 3
#6	choice 2
#7	choice 2
#8	choice 5
#9	choice 5
#10	choice 5
#11	20
#12	20