

#1

Wehire Inc. has the graph below to show how many employees they've had over the year. In which year did they have the most employees?

Wehire Inc. Employee Count




- 2001 2003 2000
 2004 2002

Show your work

#2

Darren tracked how many hours he worked every month while going to school. In which month did he work the most?

Hours of Work



- March May February
 April January

Show your work

#3

The graph below shows how many hours Angela spent at school over 5 weeks. Which week did she spend the most time at school?

Hours At School

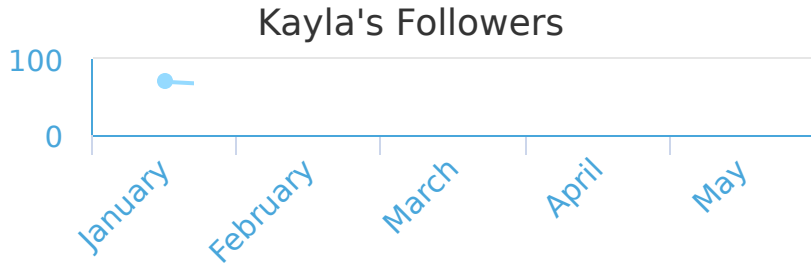


- Week 4 Week 3 Week 2
 Week 1 Week 5

Show your work

#4

Kayla graphs how many followers she has on social networks over a few months. In which month did she have the most followers?




- January March April
 May February

Show your work

#5

Use the graph below to find in which year the most forest was destroyed.




- 2000 2001 2004
 2003 2002

Show your work

#6

Use the graph below to find out which year had the most social networks.




- 2002 2004 2001
 2000 2003

Show your work

#7

Michael tracked how many hours he worked every month while going to school. In which month did he work the most?

Hours of Work



- April March January
 February May

Show your work

#8

The government has the graph below that shows how many women are working in manual labour jobs. Which year had the most women in manual labour jobs?

Women In Manual Labour




- 1980 1970 1990
 1960 1950

Show your work

#9

A company distributes the following graph that shows yearly income. Which year did they make the most?

Yearly Income



- 2004 2001 2003
 2000 2002

Show your work

#10

Use the graph below to find out which year had the most social networks.

Social Networks



- 2001 2000 2003
 2002 2004

Show your work

#11

Wehire Inc. has the graph below to show how many employees they've had over the year. In which year did they have the most employees?

Wehire Inc. Employee Count



- 2003 2004 2002
 2000 2001

Show your work

#12

Use the graph below to find in which year the most forest was destroyed.

Hectares Of Forest Destroyed



- 2002 2001 2003
 2000 2004

Show your work

Question	Answer
#1	choice 3
#2	choice 4
#3	choice 2
#4	choice 4
#5	choice 1
#6	choice 3
#7	choice 5
#8	choice 5
#9	choice 4
#10	choice 4
#11	choice 1
#12	choice 2