

#1 A school's fire drill performance was measured from day to day. Use the data in the table to complete the line graph.

Fire Drill Times

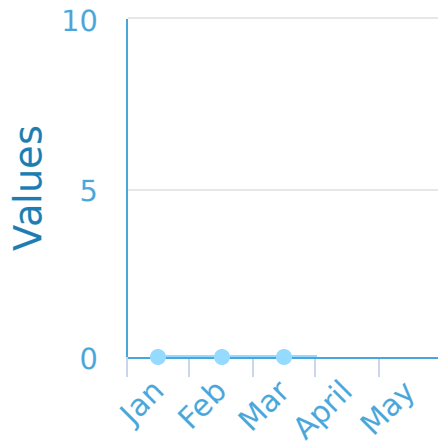
Day	Response times (minutes)
Mon	6
Tues	7
Wed	0
Thur	2
Fri	0

Show your work

#2 Connor's English mark is dependant on how many books he reads. Connor records the data in a table and wants to put the data into a graph. Use the data in the table to complete the line graph.

Number of Books Connor has Read

Month	Book Count
Jan	10
Feb	10
Mar	0
April	8
May	4



Show your work

#3 Spirit is a rover exploring Mars. The table below shows the number of meters travelled by Spirit each day this week. Use the data in the table to complete the line graph.

Spirit's Distance Travelled this Week

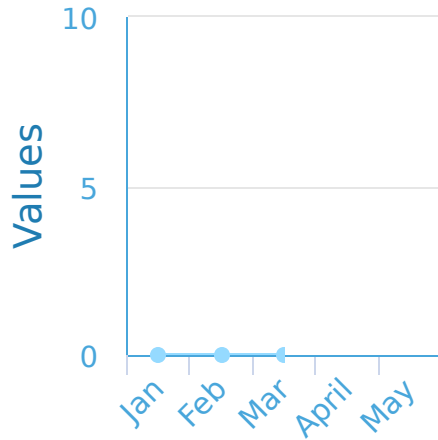
Day	Distance Tranvelled (m)
Mon	4
Tues	10
Wed	10
Thur	10

Show your work

#4 Darren's English mark is dependant on how many books he reads. Darren records the data in a table and wants to put the data into a graph. Use the data in the table to complete the line graph.

Number of Books Darren has Read

Month	Book Count
Jan	10
Feb	2
Mar	9
April	9
May	8

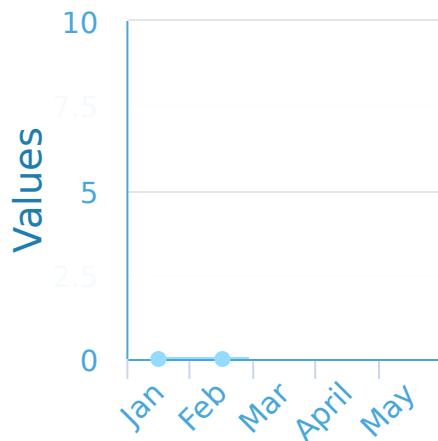


Show your work

#5 Ella's English mark is dependant on how many books she reads. Ella records the data in a table and wants to put the data into a graph. Use the data in the table to complete the line graph.

Number of Books Ella has Read

Month	Book Count
Jan	7
Feb	1
Mar	10
April	10
May	9



Show your work

#6 Cameron is a receiver on a football team. He is keeping track of the number of catches he makes every game in a table. Use the data in the table to complete the line graph.

Cameron's Receptions per Game

Game	Catches
Game 1	10
Game 2	3
Game 3	10
Game 4	8
Game 5	4



Show your work

#7

Fire Station 9 tracks the number of fires it puts out each month. Use the data in the table to complete the line graph.

Station 9 Fires Extinguished

Month	Number of Fires Extinguished
Jan	3
Feb	3
Mar	0
April	4
May	8

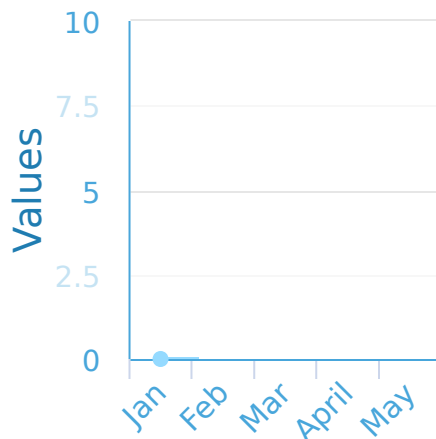
Show your work

#8

Kaylee's English mark is dependant on how many books she reads. Kaylee records the data in a table and wants to put the data into a graph. Use the data in the table to complete the line graph.

Number of Books Kaylee has Read

Month	Book Count
Jan	1
Feb	8
Mar	0
April	2
May	7



Show your work

#9

Saturn's 6th moon Titan has cryovolcanos. Astronomer Olivia recorded the number eruptions that occurred in a week. Use the data in the table to complete the line graph.

Eruptions on Titan

Day	Eruptions
Mon	3
Tues	7
Wed	1
Thur	5
Fri	10

Show your work

#10 Jacob sells cell phones at Hyper Talk Wireless. His sales figures for the week are recorded in the table. Use the data in the table to complete the line graph.

Jacob's Hyper Talk Sales Figures

Day	Phones Sold
Mon	3
Tues	10
Wed	10
Thur	8
Fri	7

Show your work

#11 Fire Station 9 tracks the number of fires it puts out each month. Use the data in the table to complete the line graph.

Station 9 Fires Extinguished

Month	Number of Fires Extinguished
Jan	1
Feb	3
Mar	4
April	8
May	5

Show your work

#12 Orbital Construction Inc. builds spacecraft from an orbital satellite and wants to graph how many they produce each month. Use the data in the table to complete the line graph.

Orbital Construction's Monthly Production

Month	Spacecraft Produced
Jan	0
Feb	5
Mar	8
April	2
May	0

Show your work

Question	Answer
#1	6, 7, 0, 2, 0
#2	10, 10, 0, 8, 4
#3	4, 10, 10, 10, 6
#4	10, 2, 9, 9, 8
#5	7, 1, 10, 10, 9
#6	10, 3, 10, 8, 4
#7	3, 3, 0, 4, 8
#8	1, 8, 0, 2, 7
#9	3, 7, 1, 5, 10
#10	3, 10, 10, 8, 7
#11	1, 3, 4, 8, 5
#12	0, 5, 8, 2, 0