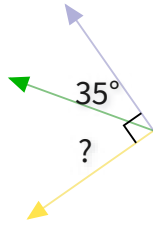


#1

What is the value of a missing angle?



50°

55°

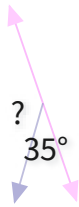
54°

41°

Show your work

#2

What is the value of a missing angle?



133°

145°

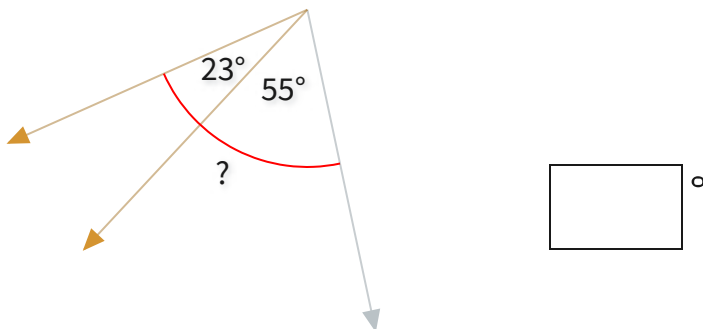
127°

136°

Show your work

#3

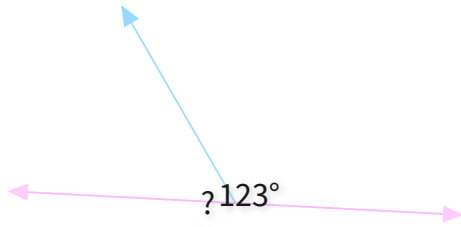
What is the value of a missing angle?



Show your work

#4

What is the value of a missing angle?

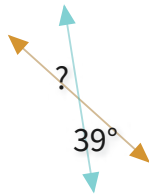


- 57°
- 56°
- 64°
- 71°

Show your work

#5

What is the value of a missing angle?



- 39°
- 48°
- 42°
- 28°

Show your work

#6

What is the value of a missing angle?



Show your work

#7

What is the value of a missing angle?



91°

108°

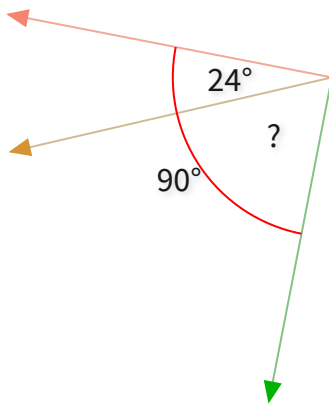
89°

113°

Show your work

#8

What is the value of a missing angle?

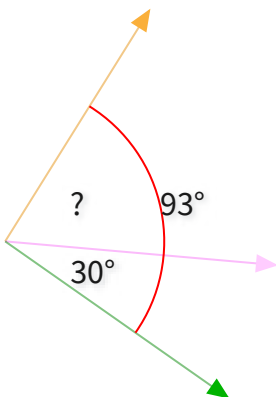


°

Show your work

#9

What is the value of a missing angle?

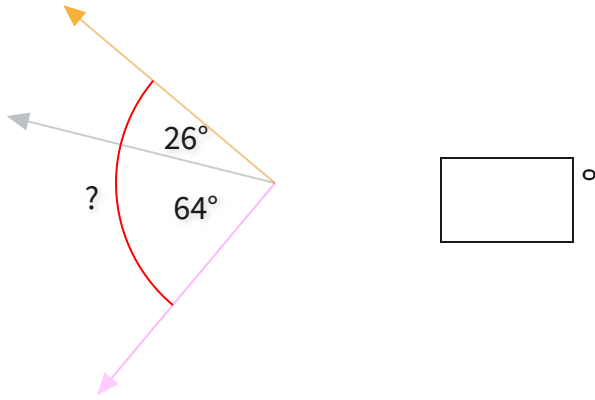


°

Show your work

#10

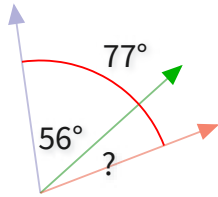
What is the value of a missing angle?



Show your work

#11

What is the value of a missing angle?



27°

20°

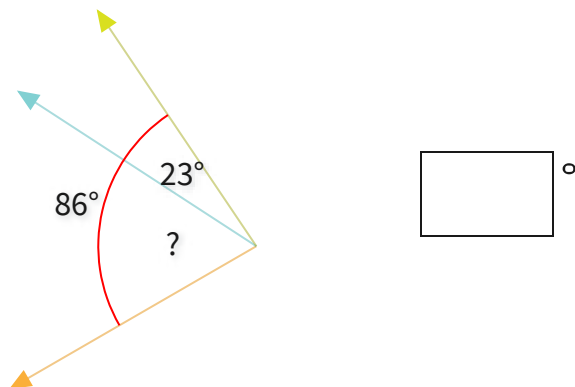
17°

21°

Show your work

#12

What is the value of a missing angle?



Show your work

Question	Answer
#1	choice 2
#2	choice 2
#3	78
#4	choice 1
#5	choice 1
#6	70
#7	choice 4
#8	66
#9	63
#10	90
#11	choice 4
#12	63