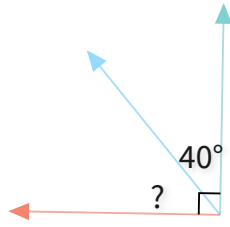


#1

What is the value of a missing angle?



50°

57°

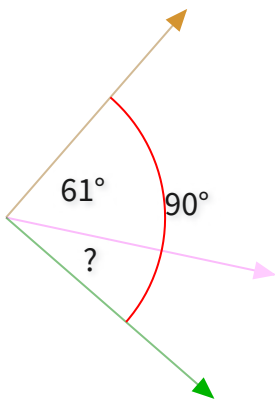
48°

35°

Show your work

#2

What is the value of a missing angle?

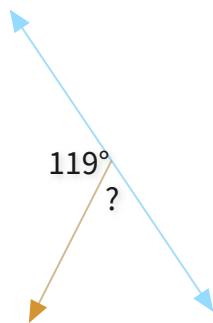


$^\circ$

Show your work

#3

What is the value of a missing angle?

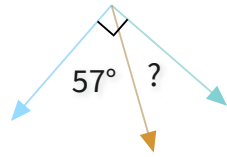


$^\circ$

Show your work

#4

What is the value of a missing angle?



37°

23°

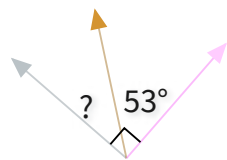
38°

33°

Show your work

#5

What is the value of a missing angle?



29°

39°

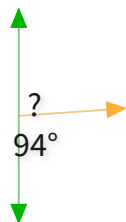
37°

35°

Show your work

#6

What is the value of a missing angle?



64°

68°

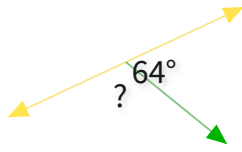
92°

86°

Show your work

#7

What is the value of a missing angle?



110°

148°

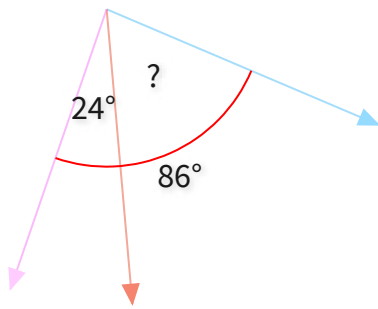
116°

96°

Show your work

#8

What is the value of a missing angle?



°

Show your work

#9

What is the value of a missing angle?



19°

20°

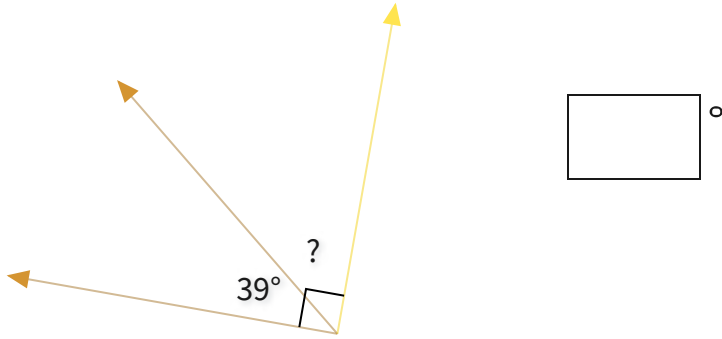
26°

21°

Show your work

#10

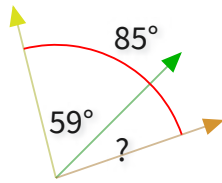
What is the value of a missing angle?



Show your work

#11

What is the value of a missing angle?

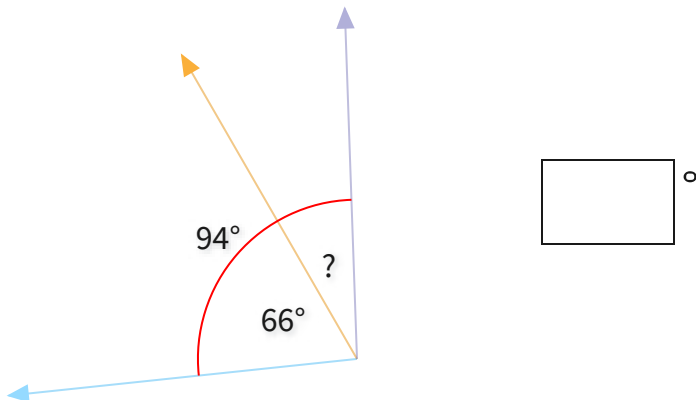


- 22°
- 28°
- 31°
- 26°

Show your work

#12

What is the value of a missing angle?



Show your work

| Question | Answer |
|----------|----------|
| #1 | choice 1 |
| #2 | 29 |
| #3 | 61 |
| #4 | choice 4 |
| #5 | choice 3 |
| #6 | choice 4 |
| #7 | choice 3 |
| #8 | 62 |
| #9 | choice 4 |
| #10 | 51 |
| #11 | choice 4 |
| #12 | 28 |