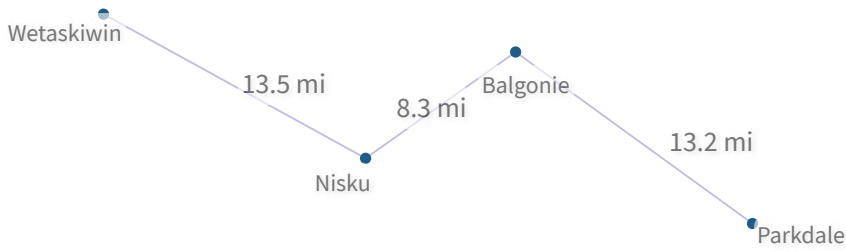


#1

Using the paths shown, how far is it from Balgonie to Parkdale?

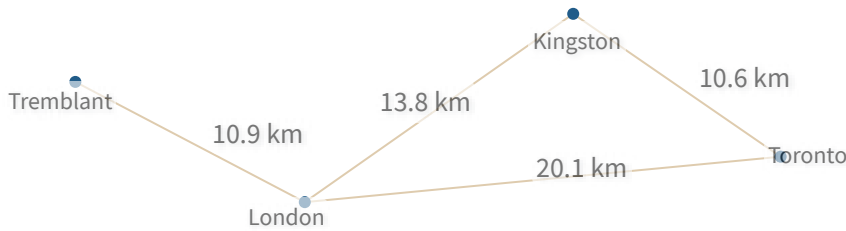


- 12.4 mi
- 16.5 mi
- 13.2 mi
- 12.7 mi

Show your work

#2

Using the paths shown, how long is the shortest route from Tremblant to Toronto?

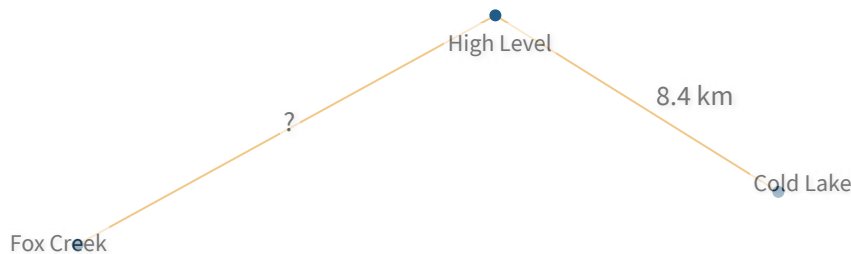


km

Show your work

#3

Using the paths shown, the distance from Fox Creek to Cold Lake is 20.4 km. How far is it from Fox Creek to High Level?



km

Show your work

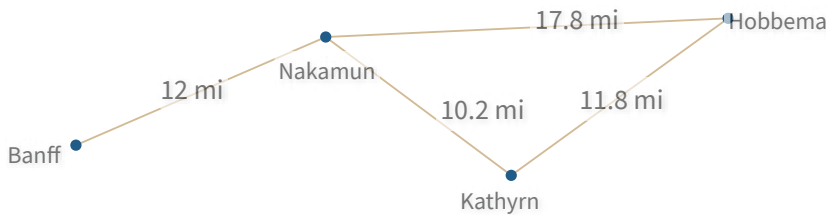
#4 Using the paths shown, how far is it from New Hampshire to New England?



km

Show your work

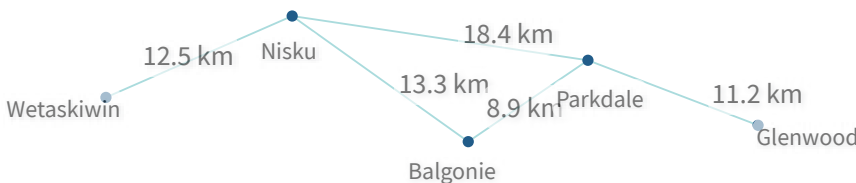
#5 Using the paths shown, how long is the shortest route from Banff to Hobbema?



- 30.7 mi
- 24 mi
- 25.1 mi
- 29.8 mi

Show your work

#6 Using the paths shown, how long is the shortest route from Wetaskiwin to Glenwood?

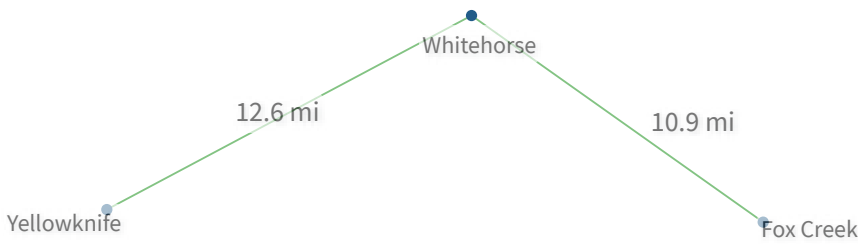


- 39.5 km
- 42.1 km
- 51.1 km
- 50.7 km

Show your work

#7

Using the paths shown, how far is it from Whitehorse to Fox Creek?



- 13.8 mi
- 10.9 mi
- 11.9 mi
- 10.2 mi

Show your work

#8

Using the paths shown, how long is the shortest route from New Hampshire to New York?

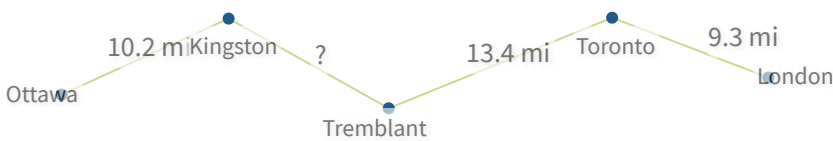


- 28.6 km
- 40.6 km
- 38.1 km
- 34.2 km

Show your work

#9

Using the paths shown, the distance from Ottawa to London is 43.1 mi. How far is it from Kingston to Tremblant?



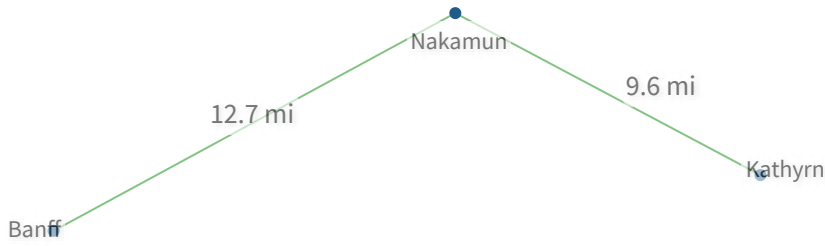
mi

Show your work



#10

Using the paths shown, how far is it from Nakamun to Kathryn?

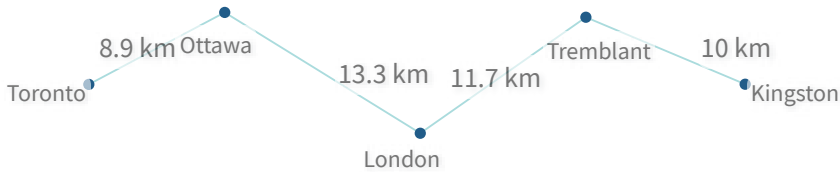


mi

Show your work

#11

Using the paths shown, how far is it from Tremblant to Kingston?

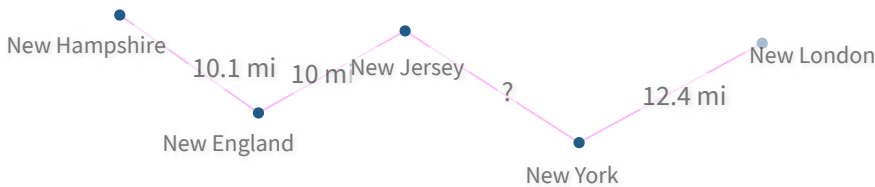


- 13 km
- 12 km
- 10 km
- 8 km

Show your work

#12

Using the paths shown, the distance from New Hampshire to New London is 44.8 mi. How far is it from New Jersey to New York?



- 11.9 mi
- 15.3 mi
- 14.2 mi
- 12.3 mi

Show your work

Question	Answer
#1	choice 3
#2	31
#3	12
#4	9.3
#5	choice 4
#6	choice 2
#7	choice 2
#8	choice 4
#9	10.2
#10	9.6
#11	choice 3
#12	choice 4