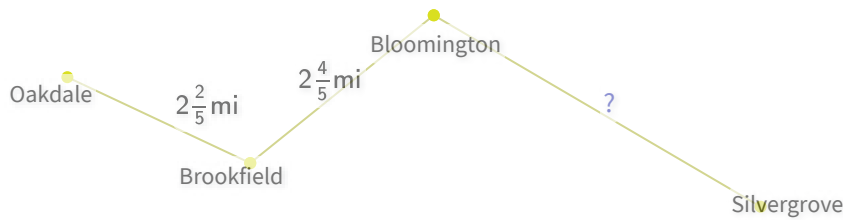


#1

The distance from Oakdale to Silvergrove is $9\frac{7}{10}$. How far is it from Bloomington to Silvergrove? Simplify your answer.

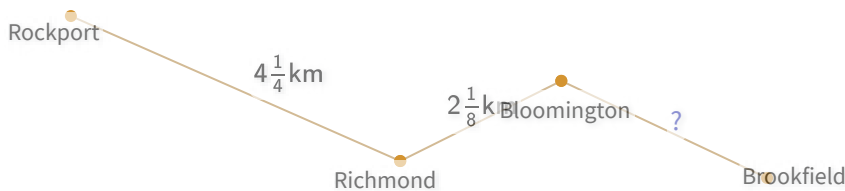


mi

Show your work

#2

The distance from Rockport to Brookfield is $9\frac{1}{16}$. How far is it from Bloomington to Brookfield? Simplify your answer.

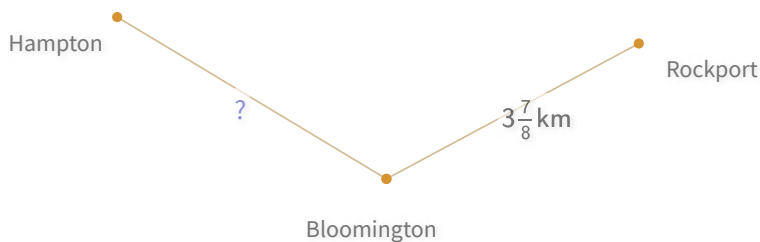


km

Show your work

#3

The distance from Hampton to Rockport is $8\frac{1}{8}$. How far is it from Hampton to Bloomington? Simplify your answer.



$4\frac{3}{16}$

$4\frac{5}{16}$

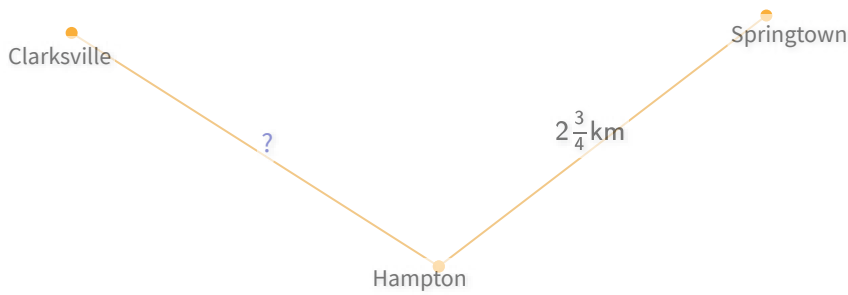
$4\frac{1}{4}$

$4\frac{1}{8}$

Show your work

#4

The distance from Clarksville to Springtown is $5\frac{13}{20}$. How far is it from Clarksville to Hampton? Simplify your answer.

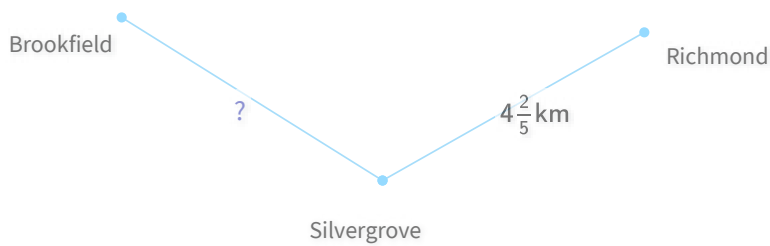


km

Show your work

#5

The distance from Brookfield to Richmond is $8\frac{9}{10}$. How far is it from Brookfield to Silvergrove? Simplify your answer.



$4\frac{1}{2}$

$4\frac{9}{16}$


$4\frac{7}{16}$

$4\frac{3}{8}$

Show your work

#6

The distance from Bloomington to Oakdale is $5\frac{3}{10}$. How far is it from Bloomington to Hampton? Simplify your answer.

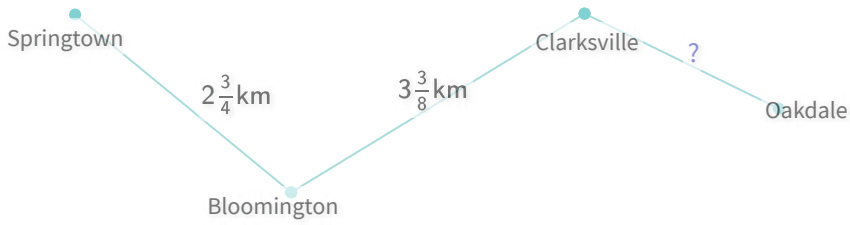


mi

Show your work

#7

The distance from Springtown to Oakdale is $8\frac{1}{4}$. How far is it from Clarksville to Oakdale? Simplify your answer.

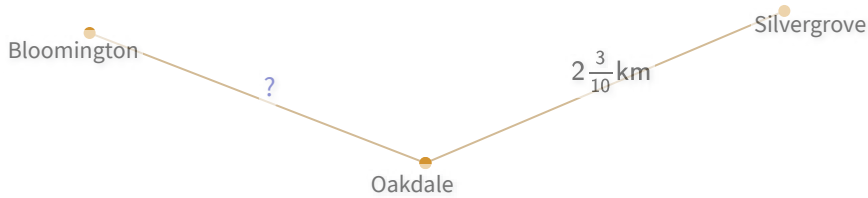


km

Show your work

#8

The distance from Bloomington to Silvergrove is $4\frac{17}{40}$. How far is it from Bloomington to Oakdale? Simplify your answer.

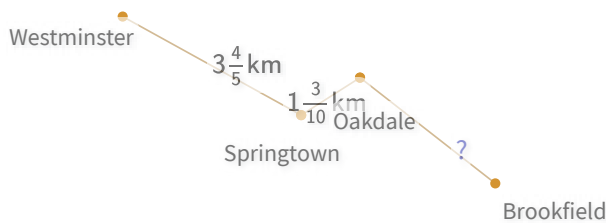


km

Show your work

#9

The distance from Westminster to Brookfield is $8\frac{3}{10}$. How far is it from Oakdale to Brookfield? Simplify your answer.



$3\frac{1}{5}$

$3\frac{11}{80}$

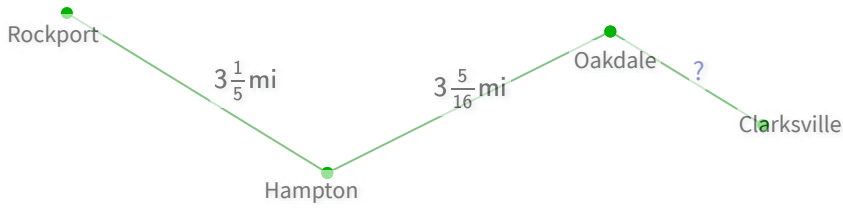
$3\frac{3}{40}$

$3\frac{21}{80}$

Show your work

#10

The distance from Rockport to Clarksville is $8\frac{31}{80}$. How far is it from Oakdale to Clarksville? Simplify your answer.

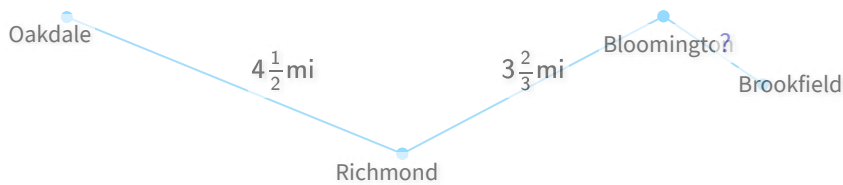


mi

Show your work

#11

The distance from Oakdale to Brookfield is $9\frac{2}{3}$. How far is it from Bloomington to Brookfield? Simplify your answer.

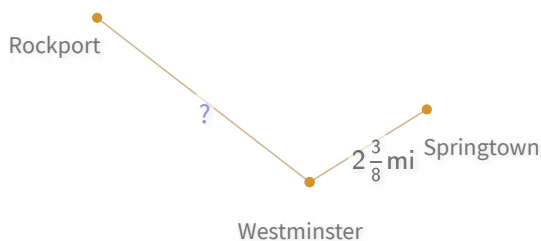


mi

Show your work

#12

The distance from Rockport to Springtown is 7. How far is it from Rockport to Westminster? Simplify your answer.



- $4\frac{11}{16}$
- $4\frac{9}{16}$
- $4\frac{5}{8}$
- $4\frac{1}{2}$

Show your work

| Question | Answer |
|----------|----------|
| #1 | 4 1/2 |
| #2 | 2 11/16 |
| #3 | choice 3 |
| #4 | 2 9/10 |
| #5 | choice 1 |
| #6 | 2 4/5 |
| #7 | 2 1/8 |
| #8 | 2 1/8 |
| #9 | choice 1 |
| #10 | 1 7/8 |
| #11 | 1 1/2 |
| #12 | choice 3 |