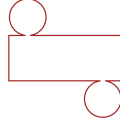
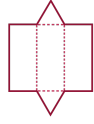
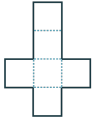


#1

Which net will make this figure?



Show your work

#2

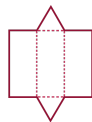
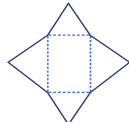
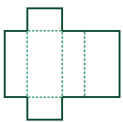
Which figure will this net make?



Show your work

#3


Which net will make this figure?



Show your work

#4


Which figure will this net make?



Show your work

#5

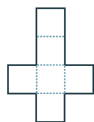
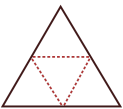
Which figure will this net make?



Show your work

#6

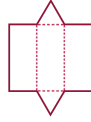
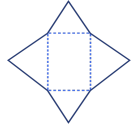
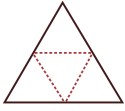
Which net will make this figure?



Show your work

#7

Which net will make this figure?



Show your work

#8

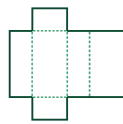
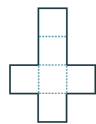
Which figure will this net make?



Show your work

#9

Which net will make this figure?

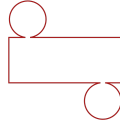
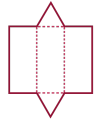


Show your work



#10

Which net will make this figure?



Show your work

#11

Which figure will this net make?



Show your work

#12

Which figure will this net make?



Show your work

Question	Answer
#1	choice 2
#2	choice 2
#3	choice 2
#4	choice 1
#5	choice 1
#6	choice 2
#7	choice 1
#8	choice 1
#9	choice 2
#10	choice 3
#11	choice 1
#12	choice 3