

#1

Which figure will this net make?



Show your work

#2

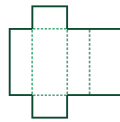
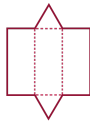
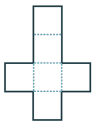
Which figure will this net make?



Show your work

#3

Which net will make this figure?



Show your work

#4

Which figure will this net make?



Show your work

#5

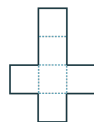
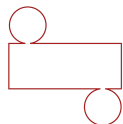
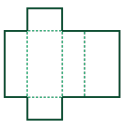
Which figure will this net make?



Show your work

#6

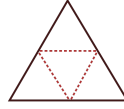
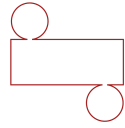
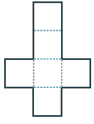
Which net will make this figure?



Show your work

#7

Which net will make this figure?



Show your work

#8


Which figure will this net make?



Show your work

#9

Which figure will this net make?



Show your work

#10

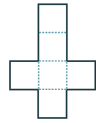
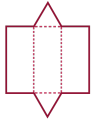
Which figure will this net make?



Show your work

#11

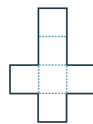
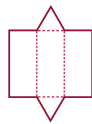
Which net will make this figure?



Show your work

#12

Which net will make this figure?



Show your work

Question	Answer
#1	choice 3
#2	choice 1
#3	choice 3
#4	choice 1
#5	choice 3
#6	choice 3
#7	choice 3
#8	choice 3
#9	choice 3
#10	choice 3
#11	choice 3
#12	choice 2