


#1

What is the shape of this figure's base?




- square
- circle
- triangle
- rectangle

Show your work

#2

What is the shape of this figure's base?




- triangle
- circle
- square
- rectangle

Show your work

#3

Which of these is a triangular pyramid?




-
-
-

Show your work

#4

What is the name of this figure?



- cone
- rectangular prism
- cylinder
- rectangular pyramid

Show your work

#5

What is the shape of this figure's base?



- circle
- triangle
- square
- rectangle

Show your work

#6

What is the name of this figure?



- cube
- rectangular pyramid
- cylinder
- cone

Show your work

#7

What is the shape of this figure's base?




- square
- rectangle
- triangle
- circle

Show your work

#8

What is the shape of this figure's base?






- circle
- square
- rectangle
- triangle

Show your work

#9

Which of these is a cube?




-
-
-

Show your work

#10

What is the shape of this figure's base?



- rectangle
- square
- circle
- triangle

Show your work

#11

What is the shape of this figure's base?




- rectangle
- triangle
- circle
- square

Show your work

#12

What is the shape of this figure's base?



- circle
- rectangle
- triangle
- square

Show your work

Question	Answer
#1	choice 3
#2	choice 1
#3	choice 3
#4	choice 1
#5	choice 4
#6	choice 1
#7	choice 2
#8	choice 4
#9	choice 1
#10	choice 3
#11	choice 1
#12	choice 3