



#1


Which of these is a cube?



Show your work

#2

What is the name of this figure?




- rectangular prism
- rectangular pyramid
- cone
- triangular pyramid

Show your work

#3

What is the name of this figure?



- triangular pyramid
- rectangular prism
- rectangular pyramid
- cylinder

Show your work

#4

What is the shape of this figure's base?




- square
- rectangle
- triangle
- circle

Show your work

#5

What is the shape of this figure's base?



- rectangle
- triangle
- circle
- square

Show your work

#6

What is the shape of this figure's base?






- triangle
- square
- circle
- rectangle

Show your work

#7




Which of these is a triangular prism?



Show your work

#8

Which of these is a cone?



Show your work

#9

What is the shape of this figure's base?



circle

rectangle


square

triangle

Show your work

#10

What is the shape of this figure's base?






- rectangle
- square
- triangle
- circle

Show your work

#11

Which of these is a cube?



-
-
-

Show your work

#12

What is the name of this figure?



- triangular pyramid
- rectangular pyramid
- cone
- cylinder

Show your work

Question	Answer
#1	choice 3
#2	choice 4
#3	choice 1
#4	choice 2
#5	choice 1
#6	choice 3
#7	choice 3
#8	choice 2
#9	choice 4
#10	choice 2
#11	choice 3
#12	choice 3