

#1

Is 6 an integer?

no

yes

Show your work

#2

Which of the following are whole numbers?

15

12

13

5

Show your work

#3

Which of the following are integers?

 $\frac{1}{3}$

-10


2

10

Show your work

#4

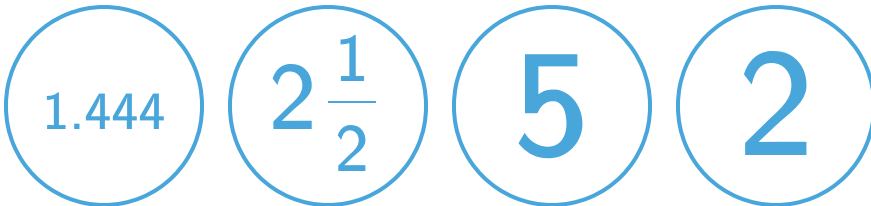
Which of the following are natural numbers?



Show your work

#5

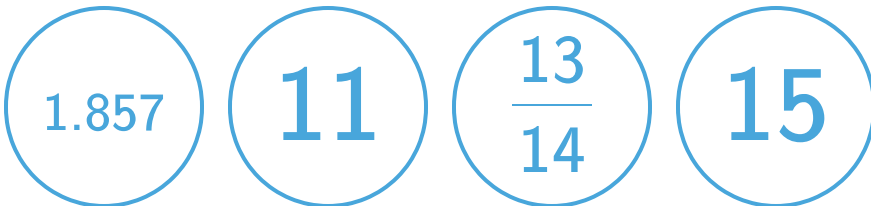
Which of the following are natural numbers?



Show your work

#6

Which of the following are whole numbers?



Show your work

#7

Which of the following is an integer?

$$1\frac{5}{7}$$

$$-6$$

$$1.833$$

$$1.091$$

Show your work

#8

Which of the following is a natural number?

$$2.500$$

$$\frac{4}{5}$$

$$-8$$

$$4$$

Show your work

#9

Which of the following are integers?

$$\frac{7}{11}$$

$$11$$

$$-8$$

$$-2$$

Show your work

#10

Which of the following are natural numbers?

7

0.308

-2

4

Show your work

#11

Which of the following is an integer?

 $1\frac{2}{5}$ $\frac{4}{5}$

-5

0.500

Show your work

#12

Which of the following is a natural number?

 $\frac{2}{5}$

-10

 $1\frac{4}{5}$

9

Show your work

Question	Answer
#1	choice 2
#2	choice 3, choice 4, choice 1, choice 2
#3	choice 4, choice 2, choice 3
#4	choice 1, choice 3, choice 2
#5	choice 3, choice 4
#6	choice 2, choice 4
#7	choice 2
#8	choice 4
#9	choice 2, choice 4, choice 3
#10	choice 1, choice 4
#11	choice 3
#12	choice 4