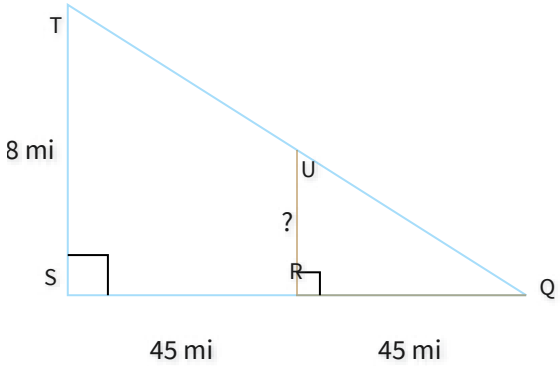


#1

What is the missing length?

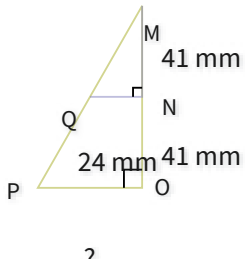


mi

Show your work

#2

What is the missing length?

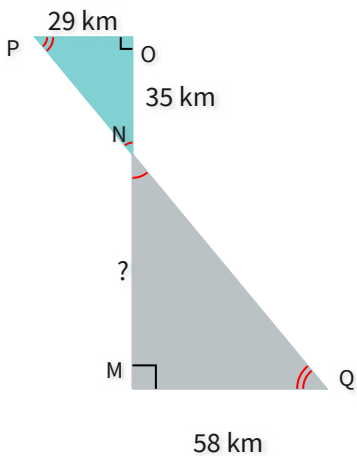


- 35 mm
- 55 mm
- 38 mm
- 48 mm

Show your work

#3

What is the missing length?

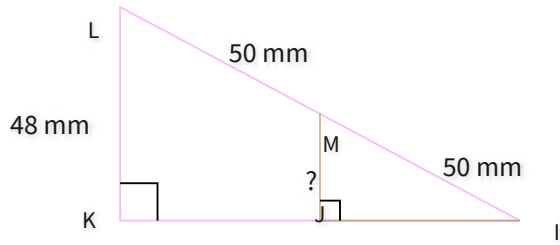


km

Show your work

#4

What is the missing length?

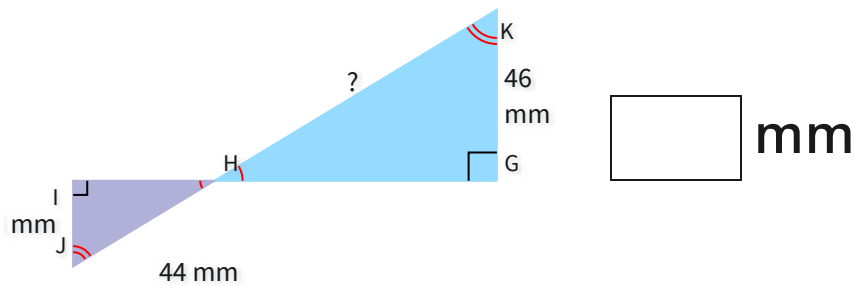


- 24 mm
- 27 mm
- 26 mm
- 30 mm

Show your work

#5

What is the missing length?

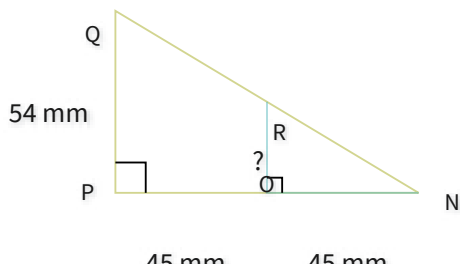


mm

Show your work

#6

What is the missing length?

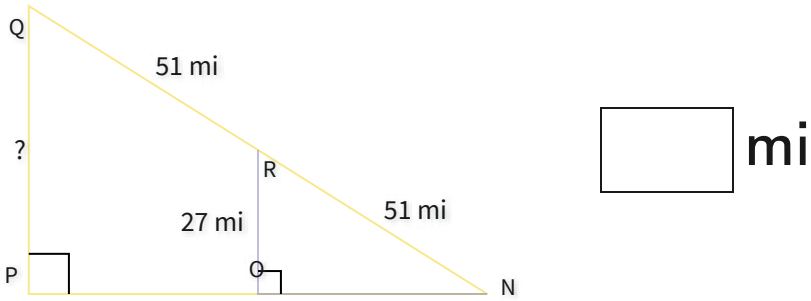


- 24 mm
- 27 mm
- 34 mm
- 26 mm

Show your work

#7

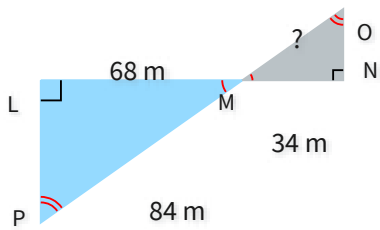
What is the missing length?



Show your work

#8

What is the missing length?

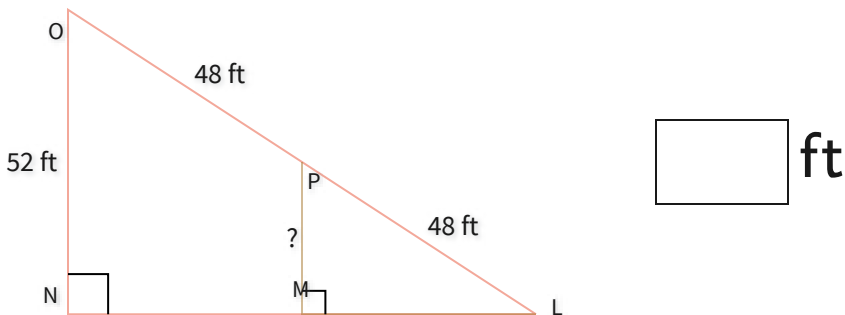


- 31 m
- 38 m
- 42 m
- 43 m

Show your work

#9

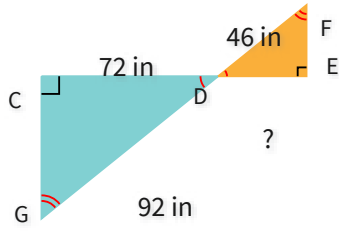
What is the missing length?



Show your work

#10

What is the missing length?

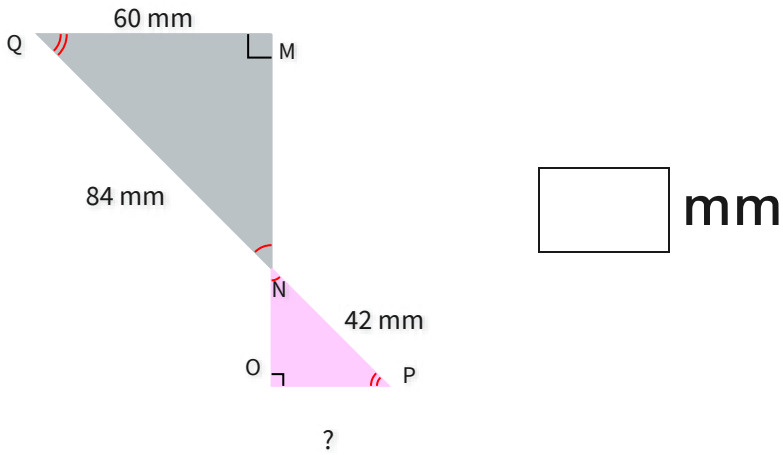


- 37 in
- 36 in
- 27 in
- 32 in

Show your work

#11

What is the missing length?

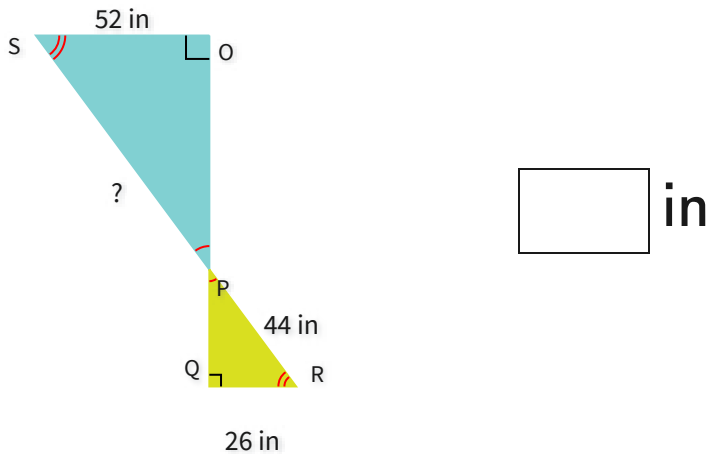


mm

Show your work

#12

What is the missing length?



in

Show your work

Question	Answer
#1	29
#2	choice 4
#3	70
#4	choice 1
#5	88
#6	choice 2
#7	54
#8	choice 2
#9	26
#10	choice 2
#11	30
#12	88