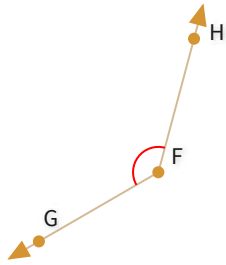


#1

Select all correct names for the following angle:

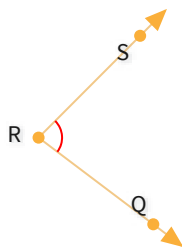


- | | | | |
|-----------------------|--------------|-----------------------|--------------|
| <input type="radio"/> | $\angle GFH$ | <input type="radio"/> | $\angle HGF$ |
| <input type="radio"/> | $\angle FHG$ | <input type="radio"/> | $\angle HG$ |

Show your work

#2

Select all correct names for the following angle:



- | | | | |
|-----------------------|-------------|-----------------------|--------------|
| <input type="radio"/> | $\angle QS$ | <input type="radio"/> | $\angle SRQ$ |
| <input type="radio"/> | $\angle QR$ | <input type="radio"/> | $\angle QRS$ |

Show your work

#3

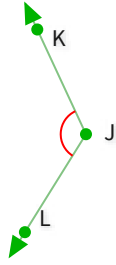
Is this angle acute, right, obtuse, or straight?



- | | | | |
|-----------------------|-------|-----------------------|----------|
| <input type="radio"/> | Right | <input type="radio"/> | Obtuse |
| <input type="radio"/> | Acute | <input type="radio"/> | Straight |

Show your work

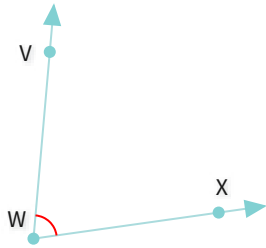
#4 Select all correct names for the following angle:



- | | | | |
|-----------------------|--------------|-----------------------|-------------|
| <input type="radio"/> | $\angle KJL$ | <input type="radio"/> | $\angle LK$ |
| <input type="radio"/> | $\angle J$ | <input type="radio"/> | $\angle KL$ |

Show your work

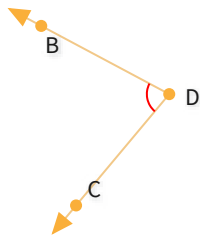
#5 Select all correct names for the following angle:



- | | | | |
|-----------------------|-------------|-----------------------|--------------|
| <input type="radio"/> | $\angle XV$ | <input type="radio"/> | $\angle WXV$ |
| <input type="radio"/> | $\angle VX$ | <input type="radio"/> | $\angle XWV$ |

Show your work

#6 Select all correct names for the following angle:

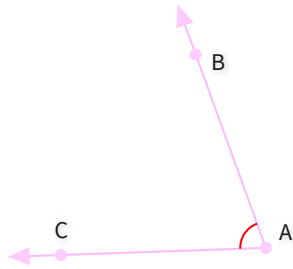


- | | | | |
|-----------------------|--------------|-----------------------|--------------|
| <input type="radio"/> | $\angle BDC$ | <input type="radio"/> | $\angle DBC$ |
| <input type="radio"/> | $\angle B$ | <input type="radio"/> | $\angle CDB$ |

Show your work

#7

Select all correct names for the following angle:



- | | | | |
|-----------------------|--------------|-----------------------|-------------|
| <input type="radio"/> | $\angle CBA$ | <input type="radio"/> | $\angle BC$ |
| <input type="radio"/> | $\angle BAC$ | <input type="radio"/> | $\angle A$ |

Show your work

#8

Is this angle acute, right, obtuse, or straight?

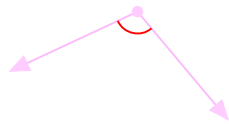


- | | |
|--------------------------------|------------------------------|
| <input type="radio"/> Straight | <input type="radio"/> Right |
| <input type="radio"/> Acute | <input type="radio"/> Obtuse |

Show your work

#9

Is this angle acute, right, obtuse, or straight?

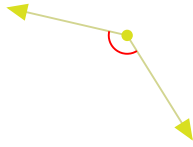


- | | |
|-----------------------------|--------------------------------|
| <input type="radio"/> Right | <input type="radio"/> Obtuse |
| <input type="radio"/> Acute | <input type="radio"/> Straight |

Show your work

#10

Is this angle acute, right, obtuse, or straight?

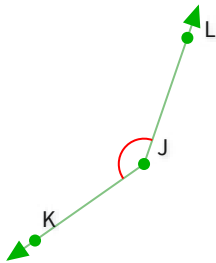


- Straight Obtuse
 Acute Right

Show your work

#11

Select all correct names for the following angle:

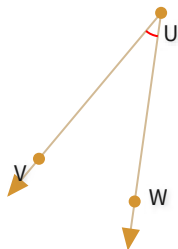


- $\angle KJL$ $\angle KL$
 $\angle K$ $\angle JK$

Show your work

#12

Select all correct names for the following angle:



- $\angle V$ $\angle WUV$
 $\angle UWV$ $\angle U$

Show your work

Question	Answer
#1	choice 1
#2	choice 4, choice 2
#3	choice 2
#4	choice 3, choice 1
#5	choice 4
#6	choice 1, choice 4
#7	choice 4, choice 3
#8	choice 3
#9	choice 2
#10	choice 2
#11	choice 1
#12	choice 2, choice 4