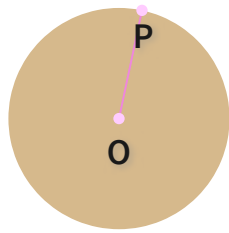




#1

What is OP?




- Diameter
- Radius
- Chord
- Center

Show your work

#2

What is KL?

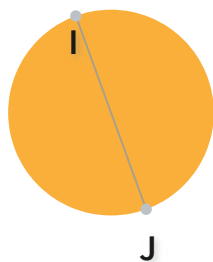


- Radius
- Chord
- Diameter
- Center

Show your work

#3

What is IJ?

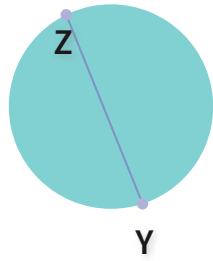


- Radius
- Center
- Chord
- Diameter

Show your work

#4

What is YZ?

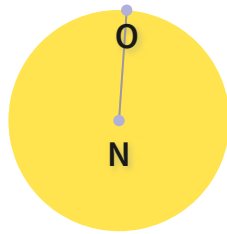


- Diameter
- Chord
- Radius
- Center

Show your work

#5

What is NO?




- Center
- Radius
- Diameter
- Chord

Show your work

#6

What is AB?



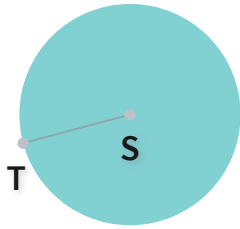
- Chord
- Diameter
- Center
- Radius

Show your work



#7

What is ST?

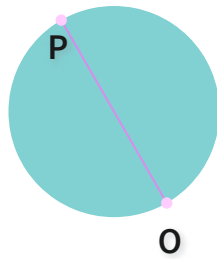


- Radius
- Chord
- Diameter
- Center

Show your work

#8

What is OP?

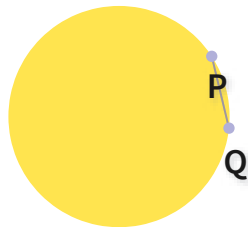


- Chord
- Center
- Diameter
- Radius

Show your work

#9

What is PQ?



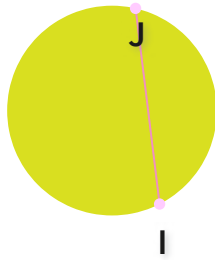
- Diameter
- Chord
- Radius
- Center

Show your work



#10

What is IJ?




- Radius
- Diameter
- Center
- Chord

Show your work

#11

What is U?

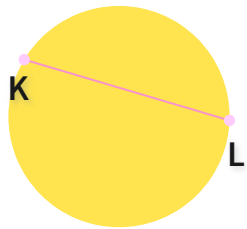


- Diameter
- Center
- Radius
- Chord

Show your work

#12

What is KL?



- Diameter
- Chord
- Radius
- Center

Show your work

Question	Answer
#1	choice 3
#2	choice 2
#3	choice 4
#4	choice 2
#5	choice 2
#6	choice 2
#7	choice 1
#8	choice 3
#9	choice 2
#10	choice 4
#11	choice 2
#12	choice 2