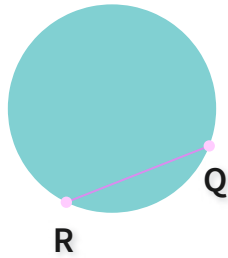




#1

What is QR?

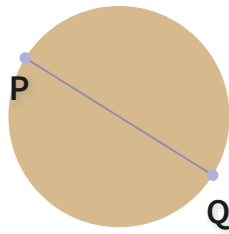


- Chord
- Radius
- Diameter
- Center

Show your work

#2

What is PQ?




- Diameter
- Radius
- Center
- Chord

Show your work

#3

What is IJ?



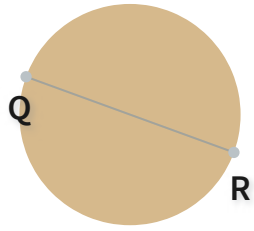
- Chord
- Center
- Radius
- Diameter

Show your work



#4

What is QR?

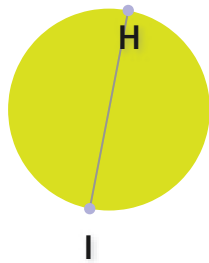


- Diameter
- Chord
- Center
- Radius

Show your work

#5

What is HI?

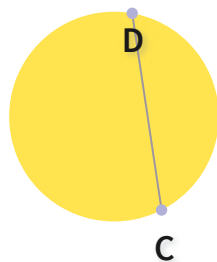


- Radius
- Diameter
- Center
- Chord

Show your work

#6

What is CD?



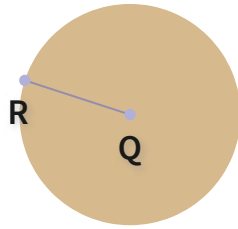
- Chord
- Diameter
- Center
- Radius

Show your work



#7

What is QR?

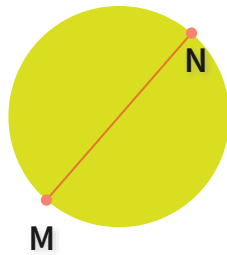


- Chord
- Diameter
- Center
- Radius

Show your work

#8

What is MN?

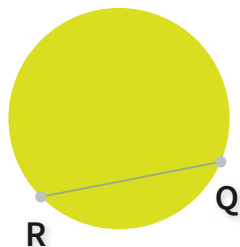


- Diameter
- Chord
- Center
- Radius

Show your work

#9

What is QR?



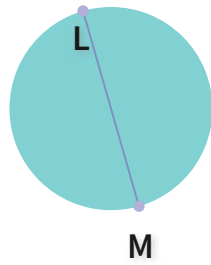
- Diameter
- Radius
- Center
- Chord

Show your work



#10

What is LM?

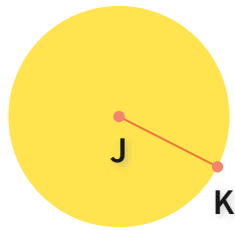


- Diameter
- Chord
- Radius
- Center

Show your work

#11

What is JK?

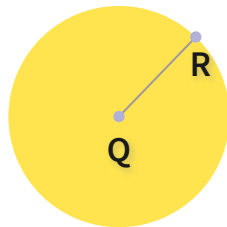


- Radius
- Center
- Chord
- Diameter

Show your work

#12

What is QR?



- Diameter
- Chord
- Center
- Radius

Show your work

Question	Answer
#1	choice 1
#2	choice 1
#3	choice 4
#4	choice 1
#5	choice 4
#6	choice 1
#7	choice 4
#8	choice 1
#9	choice 4
#10	choice 1
#11	choice 1
#12	choice 4