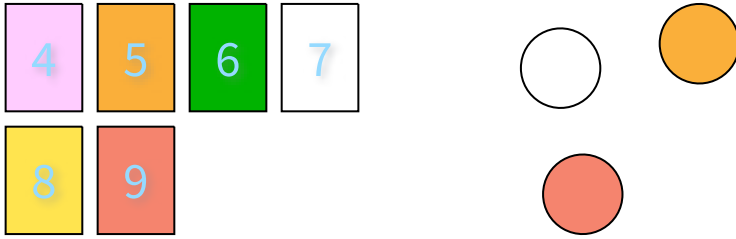


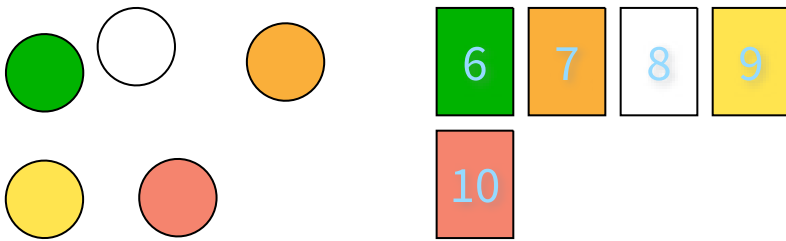
#1 You pick a card and pick a marble. How many outcomes are possible?



- 20
- 24
- 18
- 22

Show your work

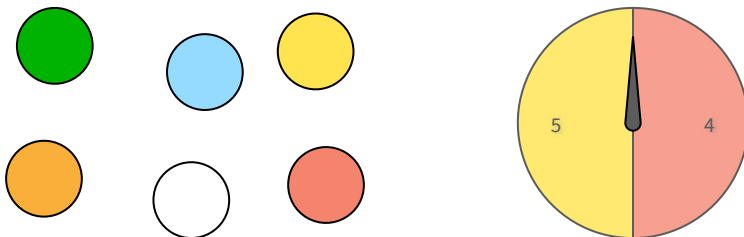
#2 You pick a marble and pick a card. How many outcomes are possible?



- 20
- 25
- 31
- 24

Show your work

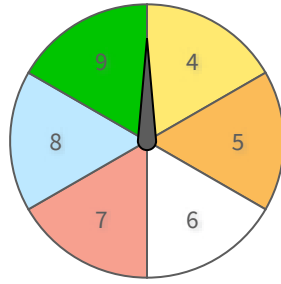
#3 You pick a marble and spin a wheel. How many outcomes are possible?



- 11
- 9
- 12
- 16

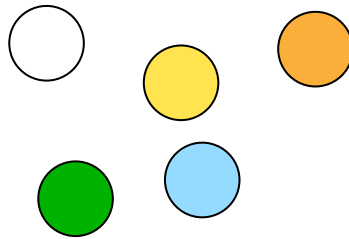
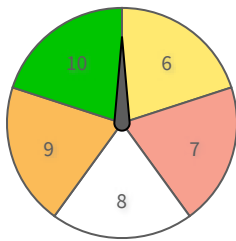
Show your work

#4 You pick a card and spin a wheel. How many outcomes are possible?



Show your work

#5 You spin a wheel and pick a marble. How many outcomes are possible?

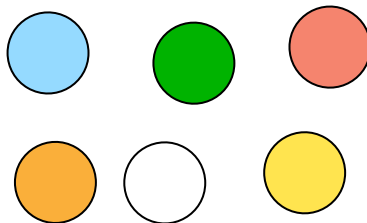


- 17
- 25

- 20
- 22

Show your work

#6 You pick a card and pick a marble. How many outcomes are possible?

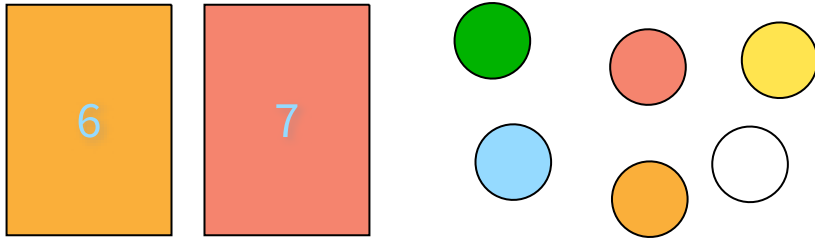


- 35
- 24

- 25
- 30

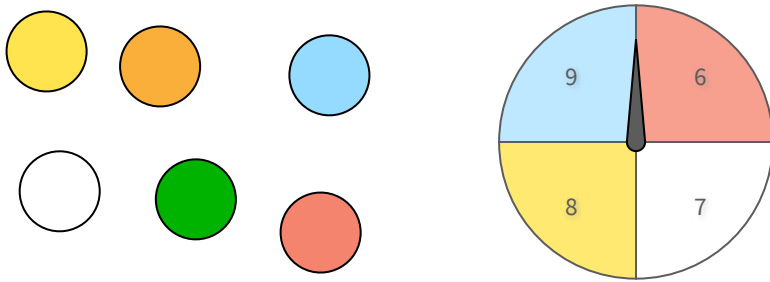
Show your work

#7 You pick a card and pick a marble. How many outcomes are possible?



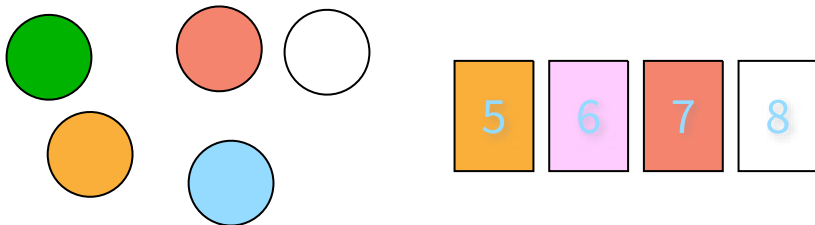

Show your work

#8 You pick a marble and spin a wheel. How many outcomes are possible?




Show your work

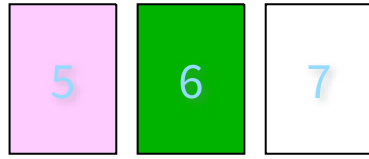
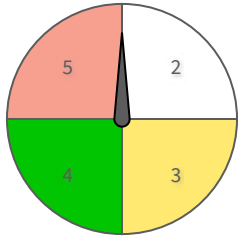
#9 You pick a marble and pick a card. How many outcomes are possible?




Show your work

#10

You spin a wheel and pick a card. How many outcomes are possible?

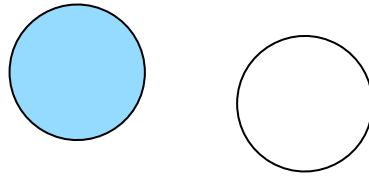
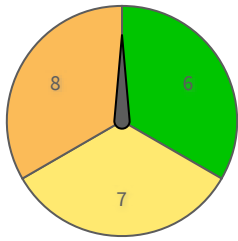


- 10
- 12
- 9
- 14

Show your work

#11

You spin a wheel and pick a marble. How many outcomes are possible?

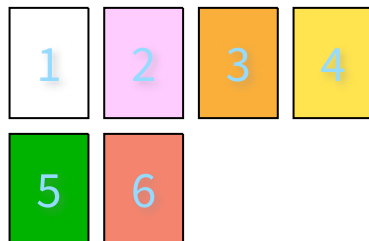
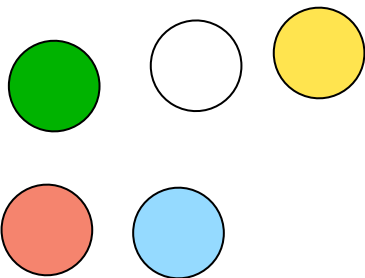


- 3
- 8
- 9
- 6

Show your work

#12

You pick a marble and pick a card. How many outcomes are possible?



Show your work

Question	Answer
#1	18
#2	25
#3	12
#4	30
#5	25
#6	30
#7	12
#8	24
#9	20
#10	12
#11	6
#12	30