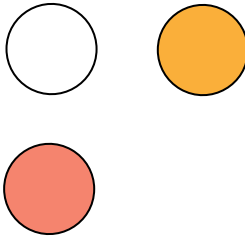
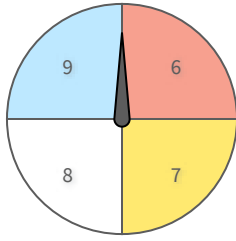


#1

You spin a wheel and pick a marble. How many outcomes are possible?



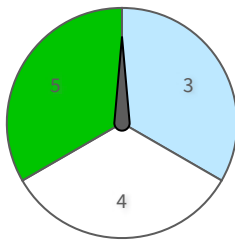

- 12
- 11

- 10
- 14

Show your work

#2

You pick a card and spin a wheel. How many outcomes are possible?



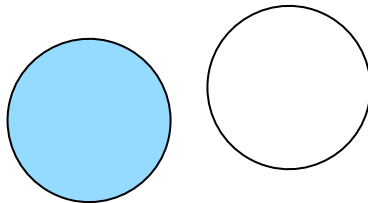
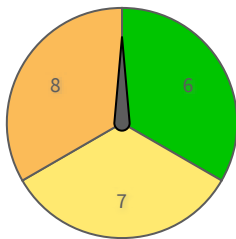
- 24
- 18

- 12
- 19

Show your work

#3

You spin a wheel and pick a marble. How many outcomes are possible?

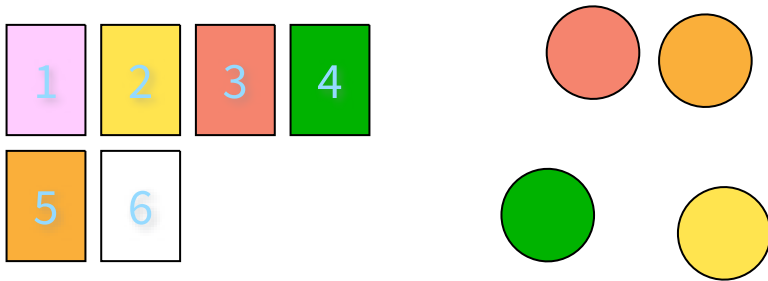


- 3
- 8

- 9
- 6

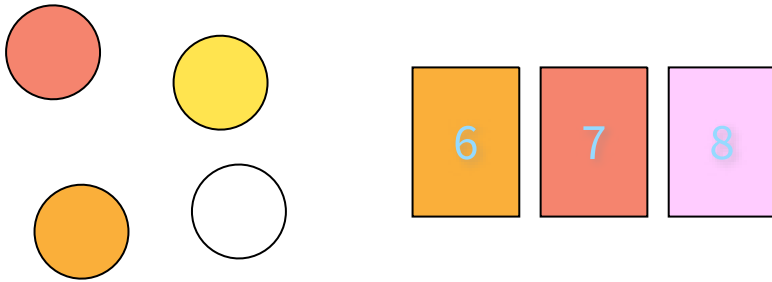
Show your work

#4 You pick a card and pick a marble. How many outcomes are possible?



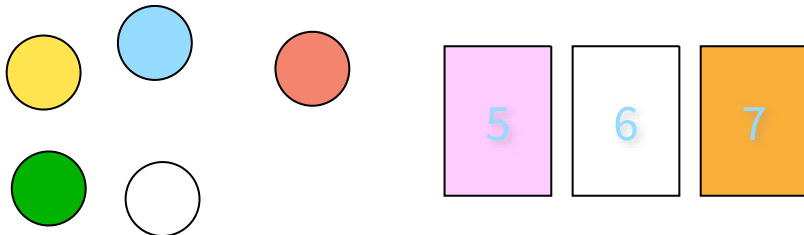
Show your work

#5 You pick a marble and pick a card. How many outcomes are possible?



Show your work

#6 You pick a marble and pick a card. How many outcomes are possible?



14

12


19

15

Show your work

#7

You pick a marble and spin a wheel. How many outcomes are possible?

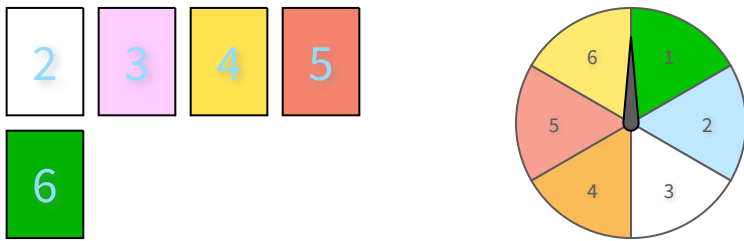


- 25
- 30
- 28
- 32

Show your work

#8

You pick a card and spin a wheel. How many outcomes are possible?

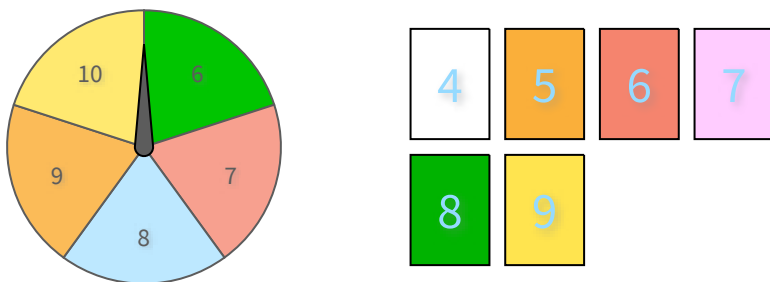


- 38
- 28
- 30
- 37

Show your work

#9

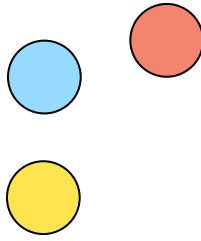
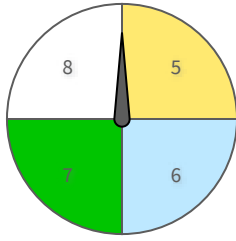
You spin a wheel and pick a card. How many outcomes are possible?



Show your work

#10

You spin a wheel and pick a marble. How many outcomes are possible?

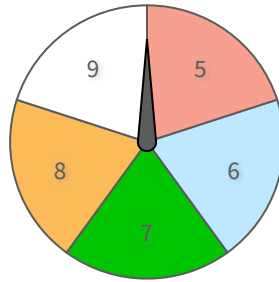
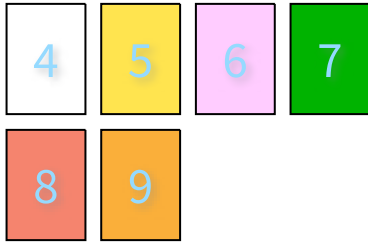


- 12
- 13
- 8
- 14

Show your work

#11

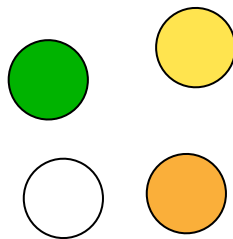
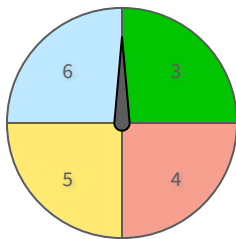
You pick a card and spin a wheel. How many outcomes are possible?



Show your work

#12

You spin a wheel and pick a marble. How many outcomes are possible?



- 16
- 17
- 13
- 18

Show your work

Question	Answer
#1	12
#2	18
#3	6
#4	24
#5	12
#6	15
#7	25
#8	30
#9	30
#10	12
#11	30
#12	16